



Stelle fest, ob der gezeigte Winkel spitzwinklig, stumpfwinklig, rechtwinklig oder geradwinklig ist.

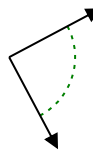
Bsp)



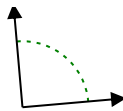
1)



2)



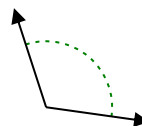
3)



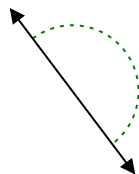
4)



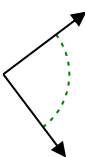
5)



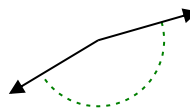
6)



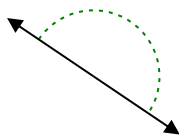
7)



8)



9)



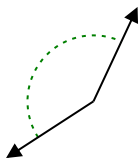
10)



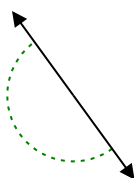
11)



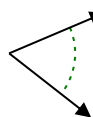
12)



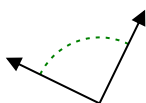
13)



14)



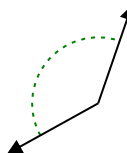
15)



16)



17)



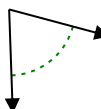
18)



19)



20)



Antworten

Bsp. spitzwinklig

1. \_\_\_\_\_

2. \_\_\_\_\_

3. \_\_\_\_\_

4. \_\_\_\_\_

5. \_\_\_\_\_

6. \_\_\_\_\_

7. \_\_\_\_\_

8. \_\_\_\_\_

9. \_\_\_\_\_

10. \_\_\_\_\_

11. \_\_\_\_\_

12. \_\_\_\_\_

13. \_\_\_\_\_

14. \_\_\_\_\_

15. \_\_\_\_\_

16. \_\_\_\_\_

17. \_\_\_\_\_

18. \_\_\_\_\_

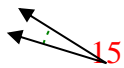
19. \_\_\_\_\_

20. \_\_\_\_\_

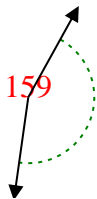


Stelle fest, ob der gezeigte Winkel spitzwinklig, stumpfwinklig, rechtwinklig oder geradwinklig ist.

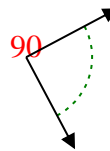
Bsp)



1)



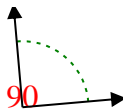
2)



Bsp.

spitzwinklig

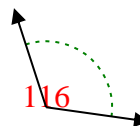
3)



4)



5)



1. stumpfwinklig

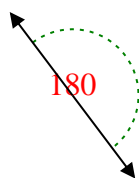
2. rechtwinklig

3. rechtwinklig

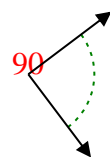
4. stumpfwinklig

5. stumpfwinklig

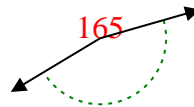
6)



7)



8)

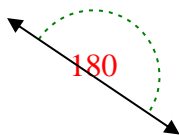


6. gestreckt

7. rechtwinklig

8. stumpfwinklig

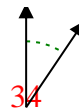
9)



10)



11)

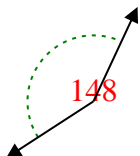


9. gestreckt

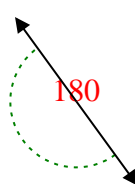
10. spitzwinklig

11. spitzwinklig

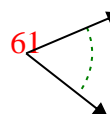
12)



13)



14)

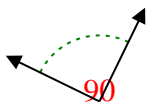


12. stumpfwinklig

13. gestreckt

14. spitzwinklig

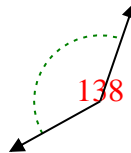
15)



16)



17)



15. rechtwinklig

16. stumpfwinklig

17. stumpfwinklig

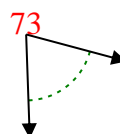
18)



19)



20)



18. spitzwinklig

19. spitzwinklig

20. spitzwinklig