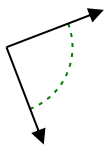




Stelle fest, ob der gezeigte Winkel spitzwinklig, stumpfwinklig, rechtwinklig oder geradwinklig ist.

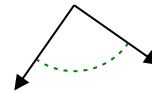
Bsp)



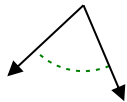
1)



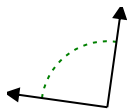
2)



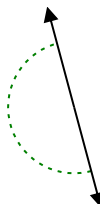
3)



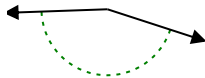
4)



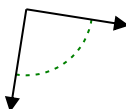
5)



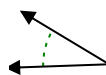
6)



7)



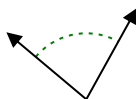
8)



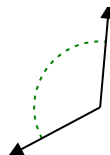
9)



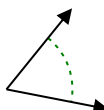
10)



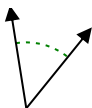
11)



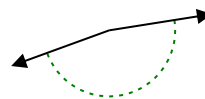
12)



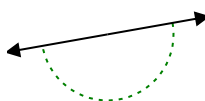
13)



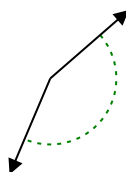
14)



15)



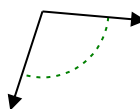
16)



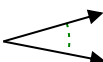
17)



18)



19)



20)



Antworten

Bsp. rechtwinklig

1. _____

2. _____

3. _____

4. _____

5. _____

6. _____

7. _____

8. _____

9. _____

10. _____

11. _____

12. _____

13. _____

14. _____

15. _____

16. _____

17. _____

18. _____

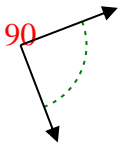
19. _____

20. _____

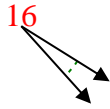


Stelle fest, ob der gezeigte Winkel spitzwinklig, stumpfwinklig, rechtwinklig oder geradwinklig ist.

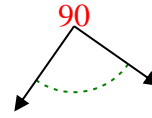
Bsp)



1)



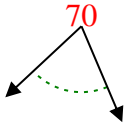
2)



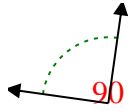
Bsp.

rechtwinklig

3)



4)



5)



1.

spitzwinklig

2.

rechtwinklig

3.

spitzwinklig

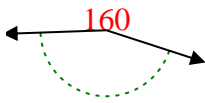
4.

rechtwinklig

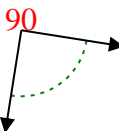
5.

gestreckt

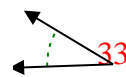
6)



7)



8)



6.

stumpfwinklig

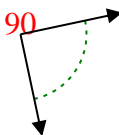
7.

rechtwinklig

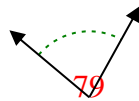
8.

spitzwinklig

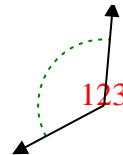
9)



10)



11)



9.

rechtwinklig

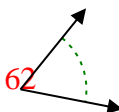
10.

spitzwinklig

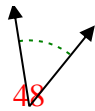
11.

stumpfwinklig

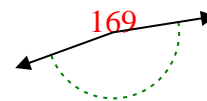
12)



13)



14)



12.

spitzwinklig

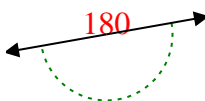
13.

spitzwinklig

14.

stumpfwinklig

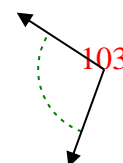
15)



16)



17)



15.

gestreckt

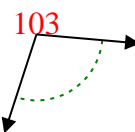
16.

stumpfwinklig

17.

stumpfwinklig

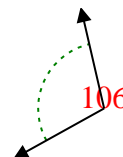
18)



19)



20)



18.

stumpfwinklig

19.

spitzwinklig

20.

stumpfwinklig