

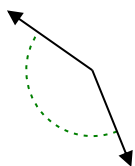


Stelle fest, ob der gezeigte Winkel spitzwinklig, stumpfwinklig, rechtwinklig oder geradwinklig ist.

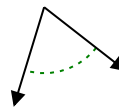
Bsp)



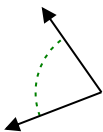
1)



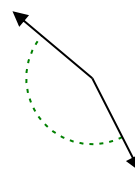
2)



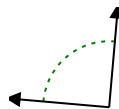
3)



4)



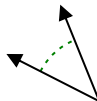
5)



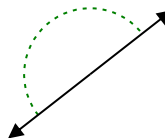
6)



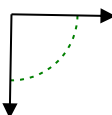
7)



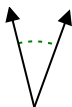
8)



9)



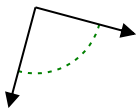
10)



11)



12)



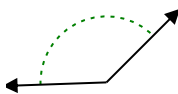
13)



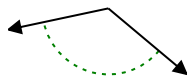
14)



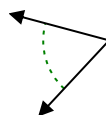
15)



16)



17)



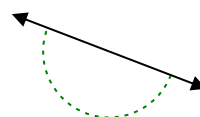
18)



19)



20)



**Antworten**

Bsp. rechtwinklig

1. \_\_\_\_\_

2. \_\_\_\_\_

3. \_\_\_\_\_

4. \_\_\_\_\_

5. \_\_\_\_\_

6. \_\_\_\_\_

7. \_\_\_\_\_

8. \_\_\_\_\_

9. \_\_\_\_\_

10. \_\_\_\_\_

11. \_\_\_\_\_

12. \_\_\_\_\_

13. \_\_\_\_\_

14. \_\_\_\_\_

15. \_\_\_\_\_

16. \_\_\_\_\_

17. \_\_\_\_\_

18. \_\_\_\_\_

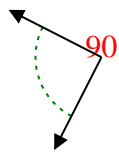
19. \_\_\_\_\_

20. \_\_\_\_\_

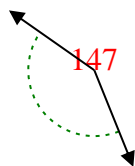


Stelle fest, ob der gezeigte Winkel spitzwinklig, stumpfwinklig, rechtwinklig oder geradwinklig ist.

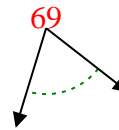
Bsp)



1)



2)



Antworten

Bsp.

rechtwinklig

1. stumpfwinklig

2. spitzwinklig

3. spitzwinklig

4. stumpfwinklig

5. rechtwinklig

6. stumpfwinklig

7. spitzwinklig

8. gestreckt

9. rechtwinklig

10. spitzwinklig

11. spitzwinklig

12. rechtwinklig

13. stumpfwinklig

14. stumpfwinklig

15. stumpfwinklig

16. stumpfwinklig

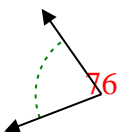
17. spitzwinklig

18. spitzwinklig

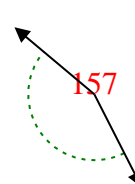
19. stumpfwinklig

20. gestreckt

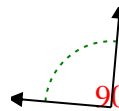
3)



4)



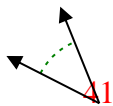
5)



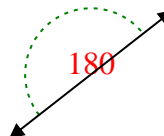
6)



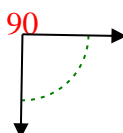
7)



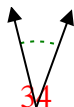
8)




9)



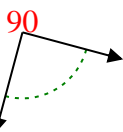
10)



11)



12)



13)



14)



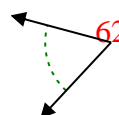
15)



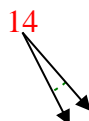
16)



17)



18)



19)



20)

