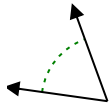


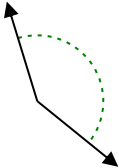


Stelle fest, ob der gezeigte Winkel spitzwinklig, stumpfwinklig, rechtwinklig oder geradwinklig ist.

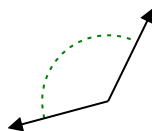
Bsp)



1)



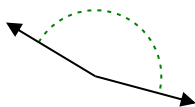
2)



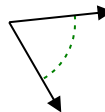
3)



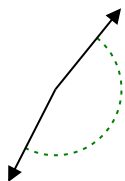
4)



5)



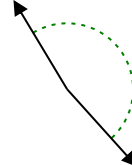
6)



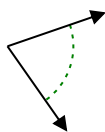
7)



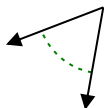
8)



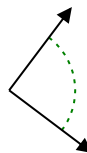
9)



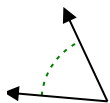
10)



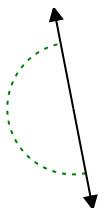
11)



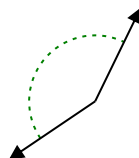
12)



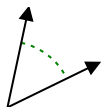
13)



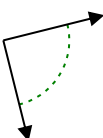
14)



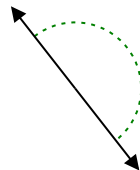
15)



16)



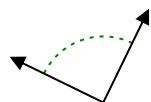
17)



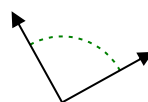
18)



19)



20)



Antworten

Bsp. spitzwinklig

1. _____

2. _____

3. _____

4. _____

5. _____

6. _____

7. _____

8. _____

9. _____

10. _____

11. _____

12. _____

13. _____

14. _____

15. _____

16. _____

17. _____

18. _____

19. _____

20. _____

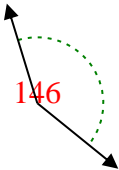


Stelle fest, ob der gezeigte Winkel spitzwinklig, stumpfwinklig, rechtwinklig oder geradwinklig ist.

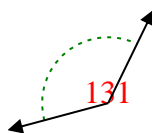
Bsp)



1)



2)



Antworten

Bsp.

spitzwinklig

1. stumpfwinklig

2. stumpfwinklig

3. spitzwinklig

4. stumpfwinklig

5. spitzwinklig

6. stumpfwinklig

7. spitzwinklig

8. stumpfwinklig

9. spitzwinklig

10. spitzwinklig

11. rechtwinklig

12. spitzwinklig

13. gestreckt

14. stumpfwinklig

15. spitzwinklig

16. rechtwinklig

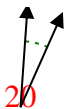
17. gestreckt

18. stumpfwinklig

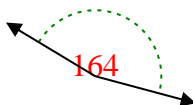
19. rechtwinklig

20. rechtwinklig

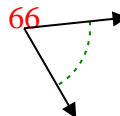
3)



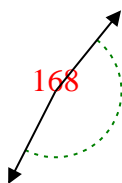
4)



5)



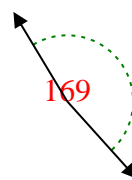
6)



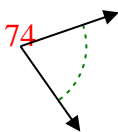
7)



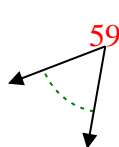
8)



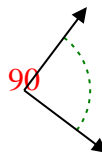
9)



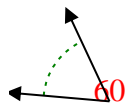
10)



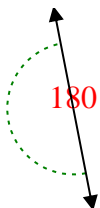
11)



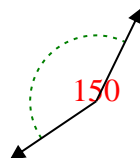
12)



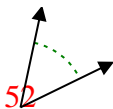
13)



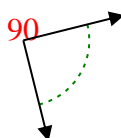
14)



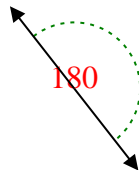
15)



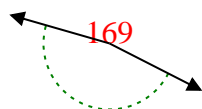
16)



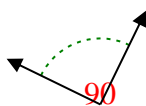
17)



18)



19)



20)

