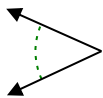


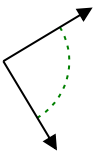


Stelle fest, ob der gezeigte Winkel spitzwinklig, stumpfwinklig, rechtwinklig oder geradwinklig ist.

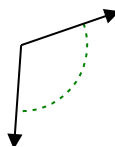
Bsp)



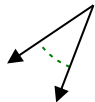
1)



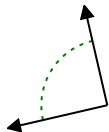
2)



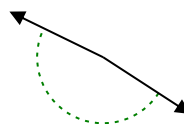
3)



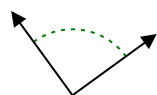
4)



5)



6)



7)



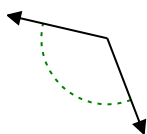
8)



9)



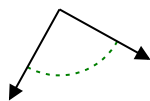
10)



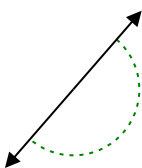
11)



12)



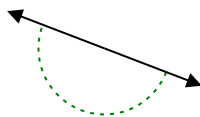
13)



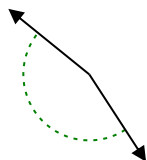
14)



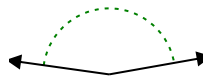
15)



16)



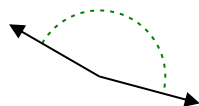
17)



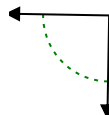
18)



19)



20)



Antworten

Bsp. spitzwinklig

1. _____

2. _____

3. _____

4. _____

5. _____

6. _____

7. _____

8. _____

9. _____

10. _____

11. _____

12. _____

13. _____

14. _____

15. _____

16. _____

17. _____

18. _____

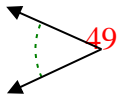
19. _____

20. _____

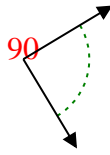


Stelle fest, ob der gezeigte Winkel spitzwinklig, stumpfwinklig, rechtwinklig oder geradwinklig ist.

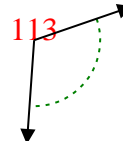
Bsp)



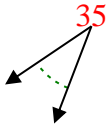
1)



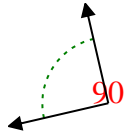
2)



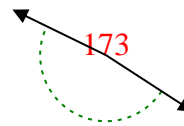
3)



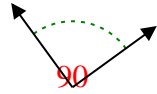
4)



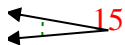
5)



6)



7)



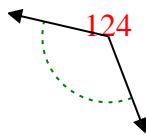
8)



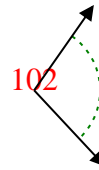
9)



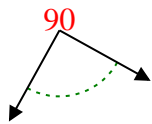
10)



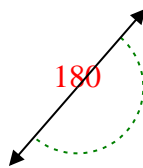
11)



12)



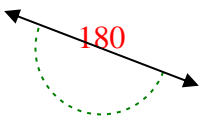
13)



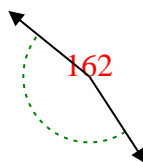
14)



15)



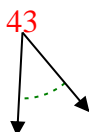
16)



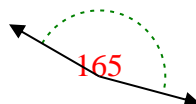
17)



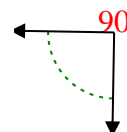
18)



19)



20)



Antworten

Bsp. spitzwinklig

1. rechtwinklig

2. stumpfwinklig

3. spitzwinklig

4. rechtwinklig

5. stumpfwinklig

6. rechtwinklig

7. spitzwinklig

8. spitzwinklig

9. spitzwinklig

10. stumpfwinklig

11. stumpfwinklig

12. rechtwinklig

13. gestreckt

14. spitzwinklig

15. gestreckt

16. stumpfwinklig

17. stumpfwinklig

18. spitzwinklig

19. stumpfwinklig

20. rechtwinklig