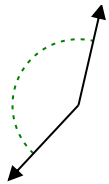


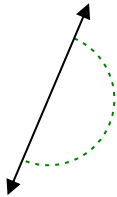


Stelle fest, ob der gezeigte Winkel spitzwinklig, stumpfwinklig oder geradwinklig ist.

Bsp)



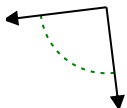
1)



2)



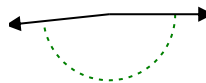
3)



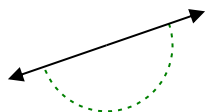
4)



5)



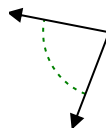
6)



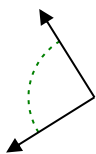
7)



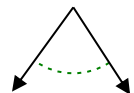
8)



9)



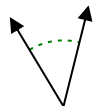
10)



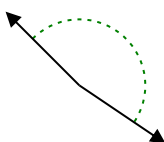
11)



12)



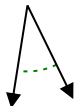
13)



14)



15)



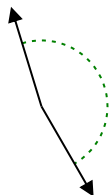
16)



17)



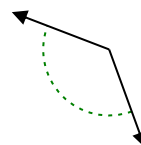
18)



19)



20)



Antworten

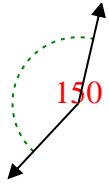
Bsp. stumpfwinklig

- 1. \_\_\_\_\_
- 2. \_\_\_\_\_
- 3. \_\_\_\_\_
- 4. \_\_\_\_\_
- 5. \_\_\_\_\_
- 6. \_\_\_\_\_
- 7. \_\_\_\_\_
- 8. \_\_\_\_\_
- 9. \_\_\_\_\_
- 10. \_\_\_\_\_
- 11. \_\_\_\_\_
- 12. \_\_\_\_\_
- 13. \_\_\_\_\_
- 14. \_\_\_\_\_
- 15. \_\_\_\_\_
- 16. \_\_\_\_\_
- 17. \_\_\_\_\_
- 18. \_\_\_\_\_
- 19. \_\_\_\_\_
- 20. \_\_\_\_\_

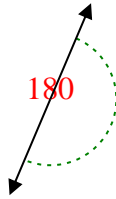


Stelle fest, ob der gezeigte Winkel spitzwinklig, stumpfwinklig, rechtwinklig oder geradwinklig ist.

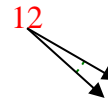
Bsp)



1)



2)

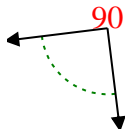


Bsp. stumpfwinklig

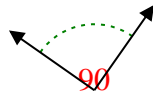
1. gestreckt

2. spitzwinklig

3)



4)



5)

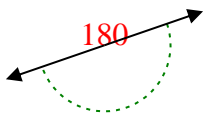


3. rechtwinklig

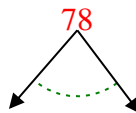
4. rechtwinklig

5. stumpfwinklig

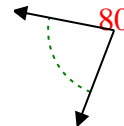
6)



7)



8)

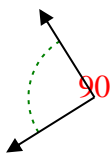


6. gestreckt

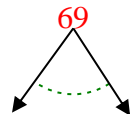
7. spitzwinklig

8. spitzwinklig

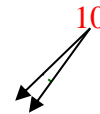
9)



10)



11)

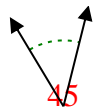


9. rechtwinklig

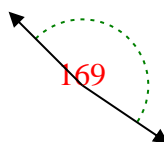
10. spitzwinklig

11. spitzwinklig

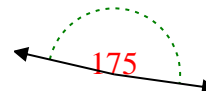
12)



13)



14)



12. spitzwinklig

13. stumpfwinklig

14. stumpfwinklig

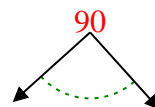
15)



16)



17)

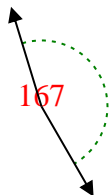


15. spitzwinklig

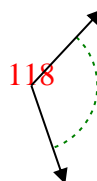
16. spitzwinklig

17. rechtwinklig

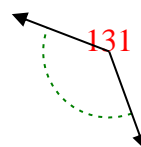
18)



19)



20)



18. stumpfwinklig

19. stumpfwinklig

20. stumpfwinklig