

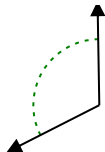


Stelle fest, ob der gezeigte Winkel spitzwinklig, stumpfwinklig, rechtwinklig oder geradwinklig ist.

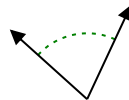
Bsp)



1)



2)



Bsp. rechtwinklig

1. _____

2. _____

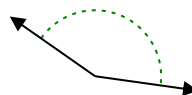
3)



4)



5)

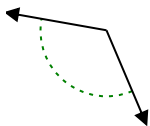


3. _____

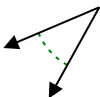
4. _____

5. _____

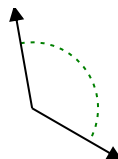
6)



7)



8)



6. _____

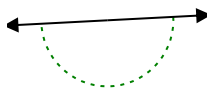
7. _____

8. _____

9)



10)



11)

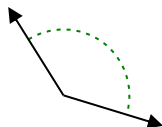


9. _____

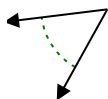
10. _____

11. _____

12)



13)



14)

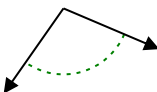


12. _____

13. _____

14. _____

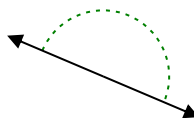
15)



16)



17)

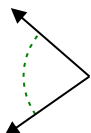


15. _____

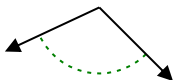
16. _____

17. _____

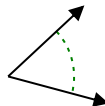
18)



19)



20)



18. _____

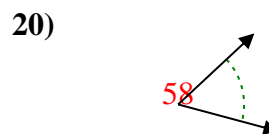
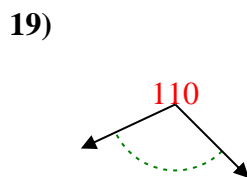
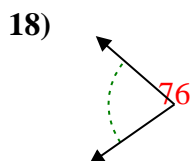
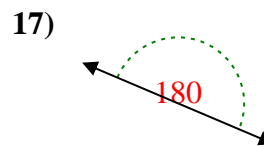
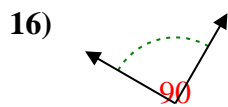
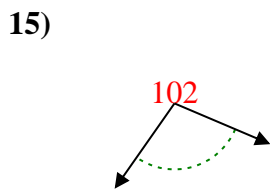
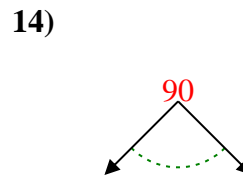
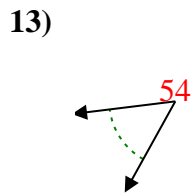
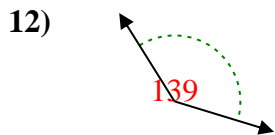
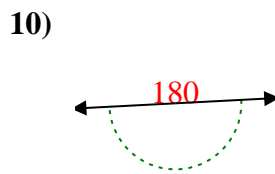
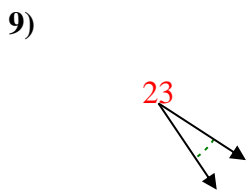
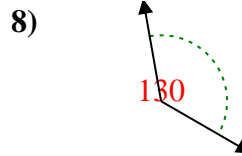
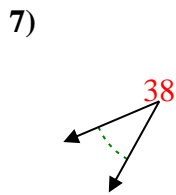
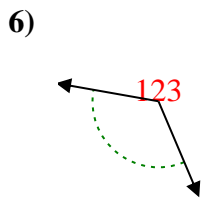
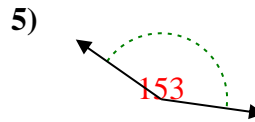
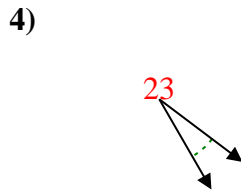
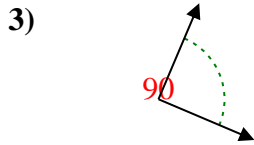
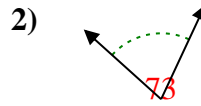
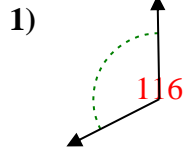
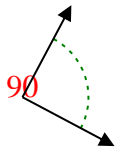
19. _____

20. _____



Stelle fest, ob der gezeigte Winkel spitzwinklig, stumpfwinklig, rechtwinklig oder geradwinklig ist.

Bsp)



Antworten

Bsp. rechtwinklig

1. stumpfwinklig

2. spitzwinklig

3. rechtwinklig

4. spitzwinklig

5. stumpfwinklig

6. stumpfwinklig

7. spitzwinklig

8. stumpfwinklig

9. spitzwinklig

10. gestreckt

11. spitzwinklig

12. stumpfwinklig

13. spitzwinklig

14. rechtwinklig

15. stumpfwinklig

16. rechtwinklig

17. gestreckt

18. spitzwinklig

19. stumpfwinklig

20. spitzwinklig