



Bestimme, ob der gezeigte Winkel 'mehr', 'weniger' oder 'gleich' 90° ist.

Bsp)



1)



2)



Antworten

Bsp. gleich

1. _____

2. _____

3. _____

4. _____

5. _____

6. _____

7. _____

8. _____

9. _____

10. _____

11. _____

12. _____

13. _____

14. _____

15. _____

16. _____

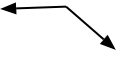
17. _____

18. _____

19. _____

20. _____

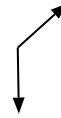
3)



4)



5)



6)



7)



8)



9)



10)



11)



12)



13)



14)



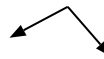
15)



16)



17)



18)



19)



20)





Bestimme, ob der gezeigte Winkel 'mehr', 'weniger' oder 'gleich' 90° ist.

Bsp)



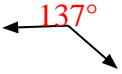
1)



2)

**Antworten**Bsp. gleich1. weniger2. gleich3. mehr4. gleich5. mehr6. gleich7. gleich8. mehr9. mehr10. weniger11. mehr12. mehr13. weniger14. gleich15. gleich16. weniger17. mehr18. gleich19. weniger20. weniger

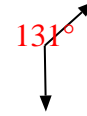
3)



4)



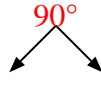
5)




6)



7)



8)



9)



10)



11)



12)



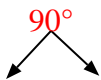
13)



14)



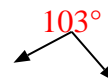
15)



16)



17)



18)



19)



20)

