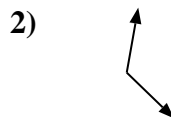
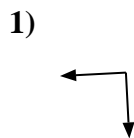




Bestimme, ob der gezeigte Winkel 'mehr', 'weniger' oder 'gleich' 90° ist.



Antworten
Bsp. **weniger**

1. _____

2. _____

3. _____

4. _____

5. _____

6. _____

7. _____

8. _____

9. _____

10. _____

11. _____

12. _____

13. _____

14. _____

15. _____

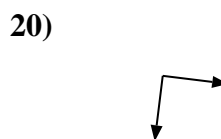
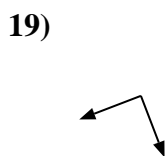
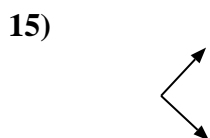
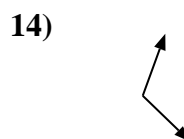
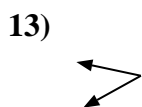
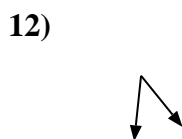
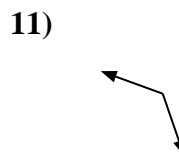
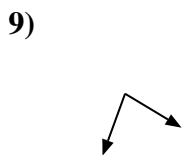
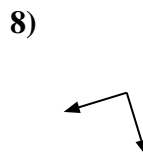
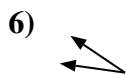
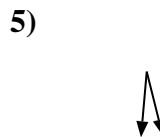
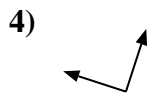
16. _____

17. _____

18. _____

19. _____

20. _____





Bestimme, ob der gezeigte Winkel 'mehr', 'weniger' oder 'gleich' 90° ist.

Bsp)



1)



2)

**Antworten**Bsp. weniger1. gleich2. mehr3. gleich4. gleich5. weniger6. weniger7. mehr8. gleich9. weniger10. mehr11. mehr12. weniger13. weniger14. mehr15. gleich16. weniger17. mehr18. gleich19. gleich20. gleich

3)



4)



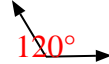
5)



6)



7)



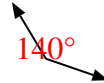
8)



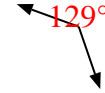
9)



10)



11)



12)



13)



14)



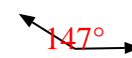
15)



16)



17)



18)



19)



20)

