

**Löse jede Aufgabe.****Antworten**

- 1) Two friends were counting the amount of candy they scored for Halloween. James received 833 pieces and Dan received 597 pieces. To the nearest ten, what is the combined amount they both received?
- 2) For her birthday Laura received 523 dollars from her friends and another 106 dollars from her family. To the nearest ten, how much money would Laura have total?
- 3) In one year a photographer took 789 pictures of animals and 696 pictures of people. To the nearest ten, how many pictures did he take total?
- 4) In a month, a video store rented out 823 action movies and 761 other types of movies. To the nearest hundred, what is the sum of the movies they rented in a month?
- 5) In a math book, there were 341 problems in chapter one and 988 in chapter two. To the nearest ten, how many problems are there in the first 2 chapters?
- 6) A school had 408 red pens and 112 blue pens. To the nearest ten, how many pens did they have total?
- 7) Julian was reading through his favorite book series. The first book he read had 464 pages and the next book had 380 pages. To the nearest ten, how many pages were in both books?
- 8) Leon was playing his favorite video game. In the first round he scored 504 points and in round two he scored 495 points. To the nearest hundred, how many points did he score total?
- 9) At the dog show there were 160 large dogs and 622 small dogs. To the nearest hundred, how many dogs were at the dog show?
- 10) While playing a trivia game, Team A scored 610 points and Team B scored 723 points. To the nearest hundred, how many points were scored total?

1. \_\_\_\_\_
2. \_\_\_\_\_
3. \_\_\_\_\_
4. \_\_\_\_\_
5. \_\_\_\_\_
6. \_\_\_\_\_
7. \_\_\_\_\_
8. \_\_\_\_\_
9. \_\_\_\_\_
10. \_\_\_\_\_

**Löse jede Aufgabe.****Antworten**

1) Two friends were counting the amount of candy they scored for Halloween. James received 833 pieces and Dan received 597 pieces. To the nearest ten, what is the combined amount they both received?	$600 + 830$ 1430	$597 + 833$ $1430 = 1430$	1. <u>1.430</u>
2) For her birthday Laura received 523 dollars from her friends and another 106 dollars from her family. To the nearest ten, how much money would Laura have total?	$520 + 110$ 630	$523 + 106$ $629 = 630$	2. <u>630</u>
3) In one year a photographer took 789 pictures of animals and 696 pictures of people. To the nearest ten, how many pictures did he take total?	$700 + 790$ 1490	$696 + 789$ $1485 = 1490$	3. <u>1.490</u>
4) In a month, a video store rented out 823 action movies and 761 other types of movies. To the nearest hundred, what is the sum of the movies they rented in a month?	$800 + 800$ 1600	$823 + 761$ $1584 = 1600$	4. <u>1.600</u>
5) In a math book, there were 341 problems in chapter one and 988 in chapter two. To the nearest ten, how many problems are there in the first 2 chapters?	$340 + 990$ 1330	$341 + 988$ $1329 = 1330$	5. <u>1.330</u>
6) A school had 408 red pens and 112 blue pens. To the nearest ten, how many pens did they have total?	$410 + 110$ 520	$408 + 112$ $520 = 520$	6. <u>520</u>
7) Julian was reading through his favorite book series. The first book he read had 464 pages and the next book had 380 pages. To the nearest ten, how many pages were in both books?	$460 + 380$ 840	$464 + 380$ $844 = 840$	7. <u>840</u>
8) Leon was playing his favorite video game. In the first round he scored 504 points and in round two he scored 495 points. To the nearest hundred, how many points did he score total?	$500 + 500$ 1000	$504 + 495$ $999 = 1000$	8. <u>1.000</u>
9) At the dog show there were 160 large dogs and 622 small dogs. To the nearest hundred, how many dogs were at the dog show?	$200 + 600$ 800	$160 + 622$ $782 = 800$	9. <u>800</u>
10) While playing a trivia game, Team A scored 610 points and Team B scored 723 points. To the nearest hundred, how many points were scored total?	$600 + 700$ 1300	$610 + 723$ $1333 = 1300$	10. <u>1.300</u>



**Löse jede Aufgabe.**

**Antworten**

1.430	840	630	1.490	1.600
1.000	800	1.300	1.330	520

- 1) Two friends were counting the amount of candy they scored for Halloween. James received 833 pieces and Dan received 597 pieces. To the nearest ten, what is the combined amount they both received?
- 2) For her birthday Laura received 523 dollars from her friends and another 106 dollars from her family. To the nearest ten, how much money would Laura have total?
- 3) In one year a photographer took 789 pictures of animals and 696 pictures of people. To the nearest ten, how many pictures did he take total?
- 4) In a month, a video store rented out 823 action movies and 761 other types of movies. To the nearest hundred, what is the sum of the movies they rented in a month?
- 5) In a math book, there were 341 problems in chapter one and 988 in chapter two. To the nearest ten, how many problems are there in the first 2 chapters?
- 6) A school had 408 red pens and 112 blue pens. To the nearest ten, how many pens did they have total?
- 7) Julian was reading through his favorite book series. The first book he read had 464 pages and the next book had 380 pages. To the nearest ten, how many pages were in both books?
- 8) Leon was playing his favorite video game. In the first round he scored 504 points and in round two he scored 495 points. To the nearest hundred, how many points did he score total?
- 9) At the dog show there were 160 large dogs and 622 small dogs. To the nearest hundred, how many dogs were at the dog show?
- 10) While playing a trivia game, Team A scored 610 points and Team B scored 723 points. To the nearest hundred, how many points were scored total?

1. \_\_\_\_\_
2. \_\_\_\_\_
3. \_\_\_\_\_
4. \_\_\_\_\_
5. \_\_\_\_\_
6. \_\_\_\_\_
7. \_\_\_\_\_
8. \_\_\_\_\_
9. \_\_\_\_\_
10. \_\_\_\_\_

**Löse jede Aufgabe.****Antworten**

- 1) At a hotdog eating contest, in the first round 151 hotdogs were eaten and in round two another 475 were eaten. To the nearest ten, how many hotdogs were eaten total?
- 2) A donation center received 570 cans of corn and 576 cans of peas. To the nearest ten, how many cans did they receive total?
- 3) Two friends were counting the number of texts they sent in a month. Alex sent 333 and Jessie sent 259. To the nearest ten, what is the combined amount of texts they sent?
- 4) In one year a photographer took 101 pictures of animals and 761 pictures of people. To the nearest hundred, how many pictures did he take total?
- 5) While working on his car, Justin spent 885 dollars on a new paint job and 642 dollars on the transmission. To the nearest ten, how much money did he spend total?
- 6) While playing a trivia game, Team A scored 733 points and Team B scored 572 points. To the nearest hundred, how many points were scored total?
- 7) At the bank, a customer turned in 679 dimes and 813 nickels. To the nearest ten, what is the total number of coins the customer turned in?
- 8) Carl and Amy were collecting cans for recycling. Carl collected 593 cans and Amy collected 279. To the nearest ten, what is the total number of cans they collected?
- 9) In a month, a video store rented out 684 action movies and 145 other types of movies. To the nearest hundred, what is the sum of the movies they rented in a month?
- 10) In one day, a mail truck gave out 306 letters and 990 magazines. To the nearest hundred, how many pieces of mail did was delivered total?

1. \_\_\_\_\_
2. \_\_\_\_\_
3. \_\_\_\_\_
4. \_\_\_\_\_
5. \_\_\_\_\_
6. \_\_\_\_\_
7. \_\_\_\_\_
8. \_\_\_\_\_
9. \_\_\_\_\_
10. \_\_\_\_\_

**Löse jede Aufgabe.****Antworten**

1) At a hotdog eating contest, in the first round 151 hotdogs were eaten and in round two another 475 were eaten. To the nearest ten, how many hotdogs were eaten total?	$150 + 480$ 630	$151 + 475$ $626 = 630$	1. <u>630</u>
2) A donation center received 570 cans of corn and 576 cans of peas. To the nearest ten, how many cans did they receive total?	$570 + 580$ 1150	$570 + 576$ $1146 = 1150$	2. <u>1.150</u>
3) Two friends were counting the number of texts they sent in a month. Alex sent 333 and Jessie sent 259. To the nearest ten, what is the combined amount of texts they sent?	$330 + 260$ 590	$333 + 259$ $592 = 590$	3. <u>590</u>
4) In one year a photographer took 101 pictures of animals and 761 pictures of people. To the nearest hundred, how many pictures did he take total?	$800 + 100$ 900	$761 + 101$ $862 = 900$	4. <u>900</u>
5) While working on his car, Justin spent 885 dollars on a new paint job and 642 dollars on the transmission. To the nearest ten, how much money did he spend total?	$890 + 640$ 1530	$885 + 642$ $1527 = 1530$	5. <u>1.530</u>
6) While playing a trivia game, Team A scored 733 points and Team B scored 572 points. To the nearest hundred, how many points were scored total?	$700 + 600$ 1300	$733 + 572$ $1305 = 1300$	6. <u>1.300</u>
7) At the bank, a customer turned in 679 dimes and 813 nickels. To the nearest ten, what is the total number of coins the customer turned in?	$680 + 810$ 1490	$679 + 813$ $1492 = 1490$	7. <u>1.490</u>
8) Carl and Amy were collecting cans for recycling. Carl collected 593 cans and Amy collected 279. To the nearest ten, what is the total number of cans they collected?	$590 + 280$ 870	$593 + 279$ $872 = 870$	8. <u>870</u>
9) In a month, a video store rented out 684 action movies and 145 other types of movies. To the nearest hundred, what is the sum of the movies they rented in a month?	$700 + 100$ 800	$684 + 145$ $829 = 800$	9. <u>800</u>
10) In one day, a mail truck gave out 306 letters and 990 magazines. To the nearest hundred, how many pieces of mail did was delivered total?	$300 + 1000$ 1300	$306 + 990$ $1296 = 1300$	10. <u>1.300</u>



**Löse jede Aufgabe.**

**Antworten**

1.430	840	630	1.490	1.600
1.000	800	1.300	1.330	520

- 1) At a hotdog eating contest, in the first round 151 hotdogs were eaten and in round two another 475 were eaten. To the nearest ten, how many hotdogs were eaten total?
- 2) A donation center received 570 cans of corn and 576 cans of peas. To the nearest ten, how many cans did they receive total?
- 3) Two friends were counting the number of texts they sent in a month. Alex sent 333 and Jessie sent 259. To the nearest ten, what is the combined amount of texts they sent?
- 4) In one year a photographer took 101 pictures of animals and 761 pictures of people. To the nearest hundred, how many pictures did he take total?
- 5) While working on his car, Justin spent 885 dollars on a new paint job and 642 dollars on the transmission. To the nearest ten, how much money did he spend total?
- 6) While playing a trivia game, Team A scored 733 points and Team B scored 572 points. To the nearest hundred, how many points were scored total?
- 7) At the bank, a customer turned in 679 dimes and 813 nickels. To the nearest ten, what is the total number of coins the customer turned in?
- 8) Carl and Amy were collecting cans for recycling. Carl collected 593 cans and Amy collected 279. To the nearest ten, what is the total number of cans they collected?
- 9) In a month, a video store rented out 684 action movies and 145 other types of movies. To the nearest hundred, what is the sum of the movies they rented in a month?
- 10) In one day, a mail truck gave out 306 letters and 990 magazines. To the nearest hundred, how many pieces of mail did was delivered total?

1. \_\_\_\_\_
2. \_\_\_\_\_
3. \_\_\_\_\_
4. \_\_\_\_\_
5. \_\_\_\_\_
6. \_\_\_\_\_
7. \_\_\_\_\_
8. \_\_\_\_\_
9. \_\_\_\_\_
10. \_\_\_\_\_

**Löse jede Aufgabe.****Antworten**

- 1) Julian was reading through his favorite book series. The first book he read had 912 pages and the next book had 379 pages. To the nearest ten, how many pages were in both books?
- 2) In one day, a mail truck gave out 211 letters and 575 magazines. To the nearest hundred, how many pieces of mail did was delivered total?
- 3) A pet store had 819 goldfish and 758 clown fish. To the nearest ten, what is the total number of both types of fish?
- 4) Two friends were counting the number of texts they sent in a month. Alex sent 929 and Jessie sent 120. To the nearest hundred, what is the combined amount of texts they sent?
- 5) During a 'Super Saturday Sale', a shoe store sold 748 pairs of sneakers and 737 pairs of sandals. To the nearest ten, what is the total number of shoes the store sold?
- 6) Katharina was looking through old photo albums. The first had 829 pics and the second had 987. To the nearest ten, how many pictures were there total?
- 7) A chef was buying different soups. She bought 823 cans of chicken soup and 621 cans of mushroom soup. To the nearest ten, how many can of soup did she buy all together?
- 8) While building a house, an architect used 990 nails on the first floor and 272 on the second. To the nearest ten, how many nails did he use on both floors?
- 9) A school had 188 red pens and 867 blue pens. To the nearest hundred, how many pens did they have total?
- 10) A cookie company held a poll asking customers their favorite type of cookie. 201 people said chocolate chip and 669 said oatmeal. To the nearest ten, what is the combined number of votes for both cookies?

1. \_\_\_\_\_
2. \_\_\_\_\_
3. \_\_\_\_\_
4. \_\_\_\_\_
5. \_\_\_\_\_
6. \_\_\_\_\_
7. \_\_\_\_\_
8. \_\_\_\_\_
9. \_\_\_\_\_
10. \_\_\_\_\_

**Löse jede Aufgabe.****Antworten**

- |  |                     |                              |
|--|---------------------|------------------------------|
| 1) Julian was reading through his favorite book series. The first book he read had 912 pages and the next book had 379 pages. To the nearest ten, how many pages were in both books?                             | $910 + 380$<br>1290 | $912 + 379$<br>$1291 = 1290$ |
| 2) In one day, a mail truck gave out 211 letters and 575 magazines. To the nearest hundred, how many pieces of mail did was delivered total?   | $200 + 600$<br>800  | $211 + 575$<br>$786 = 800$   |
| 3) A pet store had 819 goldfish and 758 clown fish. To the nearest ten, what is the total number of both types of fish?  | $820 + 760$<br>1580 | $819 + 758$<br>$1577 = 1580$ |
| 4) Two friends were counting the number of texts they sent in a month. Alex sent 929 and Jessie sent 120. To the nearest hundred, what is the combined amount of texts they sent?                                | $900 + 100$<br>1000 | $929 + 120$<br>$1049 = 1000$ |
| 5) During a 'Super Saturday Sale', a shoe store sold 748 pairs of sneakers and 737 pairs of sandals. To the nearest ten, what is the total number of shoes the store sold?                                       | $750 + 740$<br>1490 | $748 + 737$<br>$1485 = 1490$ |
| 6) Katharina was looking through old photo albums. The first had 829 pics and the second had 987. To the nearest ten, how many pictures were there total?  | $830 + 990$<br>1820 | $829 + 987$<br>$1816 = 1820$ |
| 7) A chef was buying different soups. She bought 823 cans of chicken soup and 621 cans of mushroom soup. To the nearest ten, how many can of soup did she buy all together?                                      | $820 + 620$<br>1440 | $823 + 621$<br>$1444 = 1440$ |
| 8) While building a house, an architect used 990 nails on the first floor and 272 on the second. To the nearest ten, how many nails did he use on both floors?   | $990 + 270$<br>1260 | $990 + 272$<br>$1262 = 1260$ |
| 9) A school had 188 red pens and 867 blue pens. To the nearest hundred, how many pens did they have total?   | $200 + 900$<br>1100 | $188 + 867$<br>$1055 = 1100$ |
| 10) A cookie company held a poll asking customers their favorite type of cookie. 201 people said chocolate chip and 669 said oatmeal. To the nearest ten, what is the combined number of votes for both cookies? | $200 + 670$<br>870  | $201 + 669$<br>$870 = 870$   |

- |     |              |
|-----|--------------|
| 1.  | <u>1.290</u> |
| 2.  | <u>800</u>   |
| 3.  | <u>1.580</u> |
| 4.  | <u>1.000</u> |
| 5.  | <u>1.490</u> |
| 6.  | <u>1.820</u> |
| 7.  | <u>1.440</u> |
| 8.  | <u>1.260</u> |
| 9.  | <u>1.100</u> |
| 10. | <u>870</u>   |





**Löse jede Aufgabe.**

**Antworten**

1.430	840	630	1.490	1.600
1.000	800	1.300	1.330	520

- 1) Julian was reading through his favorite book series. The first book he read had 912 pages and the next book had 379 pages. To the nearest ten, how many pages were in both books?
- 2) In one day, a mail truck gave out 211 letters and 575 magazines. To the nearest hundred, how many pieces of mail did was delivered total?
- 3) A pet store had 819 goldfish and 758 clown fish. To the nearest ten, what is the total number of both types of fish?
- 4) Two friends were counting the number of texts they sent in a month. Alex sent 929 and Jessie sent 120. To the nearest hundred, what is the combined amount of texts they sent?
- 5) During a 'Super Saturday Sale', a shoe store sold 748 pairs of sneakers and 737 pairs of sandals. To the nearest ten, what is the total number of shoes the store sold?
- 6) Katharina was looking through old photo albums. The first had 829 pics and the second had 987. To the nearest ten, how many pictures were there total?
- 7) A chef was buying different soups. She bought 823 cans of chicken soup and 621 cans of mushroom soup. To the nearest ten, how many can of soup did she buy all together?
- 8) While building a house, an architect used 990 nails on the first floor and 272 on the second. To the nearest ten, how many nails did he use on both floors?
- 9) A school had 188 red pens and 867 blue pens. To the nearest hundred, how many pens did they have total?
- 10) A cookie company held a poll asking customers their favorite type of cookie. 201 people said chocolate chip and 669 said oatmeal. To the nearest ten, what is the combined number of votes for both cookies?

1. \_\_\_\_\_

2. \_\_\_\_\_

3. \_\_\_\_\_

4. \_\_\_\_\_

5. \_\_\_\_\_

6. \_\_\_\_\_

7. \_\_\_\_\_

8. \_\_\_\_\_

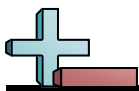
9. \_\_\_\_\_

10. \_\_\_\_\_

**Löse jede Aufgabe.****Antworten**

- 1) An ice cream shop sold 279 chocolate cones and 328 vanilla cones. To the nearest ten, how many cones did the ice cream shop sell all together?
- 2) On Monday a shipping company sent out 952 boxes. On Tuesday they sent out another 665 boxes. To the nearest ten, what is the total number of boxes they sent out?
- 3) A grocery store ordered 789 bottles of regular soda and 841 bottles of diet soda. To the nearest hundred, what is the total number of bottles the store ordered?
- 4) A donation center received 632 cans of corn and 108 cans of peas. To the nearest hundred, how many cans did they receive total?
- 5) At Celina's school there are 252 students in 3rd grade and 736 students in 4th grade. To the nearest ten, how many students were there in both grades?
- 6) In one month a furniture store sold 957 plastic chairs and 746 wooden chairs. To the nearest hundred, how many chairs did they sell total?
- 7) At the bank, a customer turned in 619 dimes and 370 nickels. To the nearest ten, what is the total number of coins the customer turned in?
- 8) Moritz collected 2 rocks from his garden. The first was 139 grams and the second was 294 grams. To the nearest ten, what is the combined weight (in grams) of both rocks?
- 9) A pet store had 431 goldfish and 771 clown fish. To the nearest ten, what is the total number of both types of fish?
- 10) A zoologist was checking the weights of two gorillas. Gorilla A weighed 266 pounds and gorilla B weighed 995 pounds. To the nearest hundred, what is the combined weight of both gorillas?

1. \_\_\_\_\_
2. \_\_\_\_\_
3. \_\_\_\_\_
4. \_\_\_\_\_
5. \_\_\_\_\_
6. \_\_\_\_\_
7. \_\_\_\_\_
8. \_\_\_\_\_
9. \_\_\_\_\_
10. \_\_\_\_\_

**Löse jede Aufgabe.****Antworten**

1) An ice cream shop sold 279 chocolate cones and 328 vanilla cones. To the nearest ten, how many cones did the ice cream shop sell all together?	$280 + 330$ 610	$279 + 328$ $607 = 610$	1. <u>610</u>
2) On Monday a shipping company sent out 952 boxes. On Tuesday they sent out another 665 boxes. To the nearest ten, what is the total number of boxes they sent out?	$950 + 670$ 1620	$952 + 665$ $1617 = 1620$	2. <u>1.620</u>
3) A grocery store ordered 789 bottles of regular soda and 841 bottles of diet soda. To the nearest hundred, what is the total number of bottles the store ordered?	$800 + 800$ 1600	$789 + 841$ $1630 = 1600$	3. <u>1.600</u>
4) A donation center received 632 cans of corn and 108 cans of peas. To the nearest hundred, how many cans did they receive total?	$600 + 100$ 700	$632 + 108$ $740 = 700$	4. <u>700</u>
5) At Celina's school there are 252 students in 3rd grade and 736 students in 4th grade. To the nearest ten, how many students were there in both grades?	$250 + 740$ 990	$252 + 736$ $988 = 990$	5. <u>990</u>
6) In one month a furniture store sold 957 plastic chairs and 746 wooden chairs. To the nearest hundred, how many chairs did they sell total?	$1000 + 700$ 1700	$957 + 746$ $1703 = 1700$	6. <u>1.700</u>
7) At the bank, a customer turned in 619 dimes and 370 nickels. To the nearest ten, what is the total number of coins the customer turned in?	$620 + 370$ 990	$619 + 370$ $989 = 990$	7. <u>990</u>
8) Moritz collected 2 rocks from his garden. The first was 139 grams and the second was 294 grams. To the nearest ten, what is the combined weight (in grams) of both rocks?	$140 + 290$ 430	$139 + 294$ $433 = 430$	8. <u>430</u>
9) A pet store had 431 goldfish and 771 clown fish. To the nearest ten, what is the total number of both types of fish?	$430 + 770$ 1200	$431 + 771$ $1202 = 1200$	9. <u>1.200</u>
10) A zoologist was checking the weights of two gorillas. Gorilla A weighed 266 pounds and gorilla B weighed 995 pounds. To the nearest hundred, what is the combined weight of both gorillas?	$300 + 1000$ 1300	$266 + 995$ $1261 = 1300$	10. <u>1.300</u>

**Löse jede Aufgabe.****Antworten**

1.430

840

630

1.490

1.600

1. \_\_\_\_\_

1.000

800

1.300

1.330

520

2. \_\_\_\_\_

- 1) An ice cream shop sold 279 chocolate cones and 328 vanilla cones. To the nearest ten, how many cones did the ice cream shop sell all together?
- 2) On Monday a shipping company sent out 952 boxes. On Tuesday they sent out another 665 boxes. To the nearest ten, what is the total number of boxes they sent out?
- 3) A grocery store ordered 789 bottles of regular soda and 841 bottles of diet soda. To the nearest hundred, what is the total number of bottles the store ordered?
- 4) A donation center received 632 cans of corn and 108 cans of peas. To the nearest hundred, how many cans did they receive total?
- 5) At Celina's school there are 252 students in 3rd grade and 736 students in 4th grade. To the nearest ten, how many students were there in both grades?
- 6) In one month a furniture store sold 957 plastic chairs and 746 wooden chairs. To the nearest hundred, how many chairs did they sell total?
- 7) At the bank, a customer turned in 619 dimes and 370 nickels. To the nearest ten, what is the total number of coins the customer turned in?
- 8) Moritz collected 2 rocks from his garden. The first was 139 grams and the second was 294 grams. To the nearest ten, what is the combined weight (in grams) of both rocks?
- 9) A pet store had 431 goldfish and 771 clown fish. To the nearest ten, what is the total number of both types of fish?
- 10) A zoologist was checking the weights of two gorillas. Gorilla A weighed 266 pounds and gorilla B weighed 995 pounds. To the nearest hundred, what is the combined weight of both gorillas?

3. \_\_\_\_\_

4. \_\_\_\_\_

5. \_\_\_\_\_

6. \_\_\_\_\_

7. \_\_\_\_\_

8. \_\_\_\_\_

9. \_\_\_\_\_

10. \_\_\_\_\_

**Löse jede Aufgabe.****Antworten**

- 1) Leon was playing games at the arcade. He won 100 tickets from the basketball game and 870 tickets from whack-a-mole. To the nearest hundred, how many tickets did he get total?
- 2) Antonia was looking through old photo albums. The first had 635 pics and the second had 408. To the nearest hundred, how many pictures were there total?
- 3) An apple orchard was split into two sections. The first had 971 trees and the second had 947. To the nearest ten, how many trees were there total in the orchard?
- 4) A chef was buying different soups. She bought 948 cans of chicken soup and 288 cans of mushroom soup. To the nearest ten, how many can of soup did she buy all together?
- 5) A cookie company held a poll asking customers their favorite type of cookie. 421 people said chocolate chip and 984 said oatmeal. To the nearest hundred, what is the combined number of votes for both cookies?
- 6) For lunch, 382 students selected chocolate milk and 895 selected regular milk. To the nearest ten, how many milks were taken total?
- 7) At the bank, a customer turned in 526 dimes and 349 nickels. To the nearest ten, what is the total number of coins the customer turned in?
- 8) Emma was downloading apps to her phone. The first app she downloaded was 181 kb and the second was 132 kb. To the nearest hundred, what was the total size (in kb) of all the apps she downloaded?
- 9) In one year a photographer took 634 pictures of animals and 579 pictures of people. To the nearest hundred, how many pictures did he take total?
- 10) The classes in the fourth grade were counting the fundraiser money they earned. Mr. Smith's Class earned 124 dollars and Mrs. White's class earned 858 dollars. To the nearest hundred, how much did they earn total?

1. \_\_\_\_\_
2. \_\_\_\_\_
3. \_\_\_\_\_
4. \_\_\_\_\_
5. \_\_\_\_\_
6. \_\_\_\_\_
7. \_\_\_\_\_
8. \_\_\_\_\_
9. \_\_\_\_\_
10. \_\_\_\_\_

**Löse jede Aufgabe.****Antworten**

- |   |                      |                              |
|---|----------------------|------------------------------|
| 1) Leon was playing games at the arcade. He won 100 tickets from the basketball game and 870 tickets from whack-a-mole. To the nearest hundred, how many tickets did he get total?  | $100 + 900$<br>1000  | $100 + 870$<br>$970 = 1000$  |
| 2) Antonia was looking through old photo albums. The first had 635 pics and the second had 408. To the nearest hundred, how many pictures were there total?   | $600 + 400$<br>1000  | $635 + 408$<br>$1043 = 1000$ |
| 3) An apple orchard was split into two sections. The first had 971 trees and the second had 947. To the nearest ten, how many trees were there total in the orchard?  | $970 + 950$<br>1920  | $971 + 947$<br>$1918 = 1920$ |
| 4) A chef was buying different soups. She bought 948 cans of chicken soup and 288 cans of mushroom soup. To the nearest ten, how many can of soup did she buy all together?   | $950 + 290$<br>1240  | $948 + 288$<br>$1236 = 1240$ |
| 5) A cookie company held a poll asking customers their favorite type of cookie. 421 people said chocolate chip and 984 said oatmeal. To the nearest hundred, what is the combined number of votes for both cookies?       | $400 + 1000$<br>1400 | $421 + 984$<br>$1405 = 1400$ |
| 6) For lunch, 382 students selected chocolate milk and 895 selected regular milk. To the nearest ten, how many milks were taken total?  | $380 + 900$<br>1280  | $382 + 895$<br>$1277 = 1280$ |
| 7) At the bank, a customer turned in 526 dimes and 349 nickels. To the nearest ten, what is the total number of coins the customer turned in?   | $530 + 350$<br>880   | $526 + 349$<br>$875 = 880$   |
| 8) Emma was downloading apps to her phone. The first app she downloaded was 181 kb and the second was 132 kb. To the nearest hundred, what was the total size (in kb) of all the apps she downloaded?                     | $200 + 100$<br>300   | $181 + 132$<br>$313 = 300$   |
| 9) In one year a photographer took 634 pictures of animals and 579 pictures of people. To the nearest hundred, how many pictures did he take total?   | $600 + 600$<br>1200  | $579 + 634$<br>$1213 = 1200$ |
| 10) The classes in the fourth grade were counting the fundraiser money they earned. Mr. Smith's Class earned 124 dollars and Mrs. White's class earned 858 dollars. To the nearest hundred, how much did they earn total? | $100 + 900$<br>1000  | $124 + 858$<br>$982 = 1000$  |

- |     |              |
|-----|--------------|
| 1.  | <u>1.000</u> |
| 2.  | <u>1.000</u> |
| 3.  | <u>1.920</u> |
| 4.  | <u>1.240</u> |
| 5.  | <u>1.400</u> |
| 6.  | <u>1.280</u> |
| 7.  | <u>880</u>   |
| 8.  | <u>300</u>   |
| 9.  | <u>1.200</u> |
| 10. | <u>1.000</u> |



**Löse jede Aufgabe.**

**Antworten**

1.430	840	630	1.490	1.600
1.000	800	1.300	1.330	520

- Leon was playing games at the arcade. He won 100 tickets from the basketball game and 870 tickets from whack-a-mole. To the nearest hundred, how many tickets did he get total?
- Antonia was looking through old photo albums. The first had 635 pics and the second had 408. To the nearest hundred, how many pictures were there total?
- An apple orchard was split into two sections. The first had 971 trees and the second had 947. To the nearest ten, how many trees were there total in the orchard?
- A chef was buying different soups. She bought 948 cans of chicken soup and 288 cans of mushroom soup. To the nearest ten, how many can of soup did she buy all together?
- A cookie company held a poll asking customers their favorite type of cookie. 421 people said chocolate chip and 984 said oatmeal. To the nearest hundred, what is the combined number of votes for both cookies?
- For lunch, 382 students selected chocolate milk and 895 selected regular milk. To the nearest ten, how many milks were taken total?
- At the bank, a customer turned in 526 dimes and 349 nickels. To the nearest ten, what is the total number of coins the customer turned in?
- Emma was downloading apps to her phone. The first app she downloaded was 181 kb and the second was 132 kb. To the nearest hundred, what was the total size (in kb) of all the apps she downloaded?
- In one year a photographer took 634 pictures of animals and 579 pictures of people. To the nearest hundred, how many pictures did he take total?
- The classes in the fourth grade were counting the fundraiser money they earned. Mr. Smith's Class earned 124 dollars and Mrs. White's class earned 858 dollars. To the nearest hundred, how much did they earn total?

1. \_\_\_\_\_

2. \_\_\_\_\_

3. \_\_\_\_\_

4. \_\_\_\_\_

5. \_\_\_\_\_

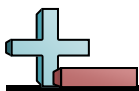
6. \_\_\_\_\_

7. \_\_\_\_\_

8. \_\_\_\_\_

9. \_\_\_\_\_

10. \_\_\_\_\_

**Löse jede Aufgabe.****Antworten**

- 1) At Pauline's school there are 118 students in 3rd grade and 258 students in 4th grade. To the nearest ten, how many students were there in both grades?
- 2) A pet store had 326 goldfish and 564 clown fish. To the nearest hundred, what is the total number of both types of fish?
- 3) A grocery store ordered 482 bottles of regular soda and 902 bottles of diet soda. To the nearest hundred, what is the total number of bottles the store ordered?
- 4) Two friends were counting the number of texts they sent in a month. Alex sent 893 and Jessie sent 768. To the nearest hundred, what is the combined amount of texts they sent?
- 5) While building a house, an architect used 494 nails on the first floor and 646 on the second. To the nearest ten, how many nails did he use on both floors?
- 6) The classes in the fourth grade were counting the fundraiser money they earned. Mr. Smith's Class earned 373 dollars and Mrs. White's class earned 514 dollars. To the nearest hundred, how much did they earn total?
- 7) An apple orchard was split into two sections. The first had 829 trees and the second had 316. To the nearest ten, how many trees were there total in the orchard?
- 8) Vanessa was downloading apps to her phone. The first app she downloaded was 360 kb and the second was 490 kb. To the nearest ten, what was the total size (in kb) of all the apps she downloaded?
- 9) A zoologist was checking the weights of two gorillas. Gorilla A weighed 761 pounds and gorilla B weighed 246 pounds. To the nearest hundred, what is the combined weight of both gorillas?
- 10) While organizing her files, Antonia deleted 505 pictures and 661 songs. To the nearest hundred, what is the total number of files she deleted?

1. \_\_\_\_\_
2. \_\_\_\_\_
3. \_\_\_\_\_
4. \_\_\_\_\_
5. \_\_\_\_\_
6. \_\_\_\_\_
7. \_\_\_\_\_
8. \_\_\_\_\_
9. \_\_\_\_\_
10. \_\_\_\_\_



**Löse jede Aufgabe.****Antworten**

1) At Pauline's school there are 118 students in 3rd grade and 258 students in 4th grade. To the nearest ten, how many students were there in both grades?	$120 + 260$ 380	$118 + 258$ $376 = 380$	1. <u>380</u>
2) A pet store had 326 goldfish and 564 clown fish. To the nearest hundred, what is the total number of both types of fish?	$300 + 600$ 900	$326 + 564$ $890 = 900$	2. <u>900</u>
3) A grocery store ordered 482 bottles of regular soda and 902 bottles of diet soda. To the nearest hundred, what is the total number of bottles the store ordered?	$500 + 900$ 1400	$482 + 902$ $1384 = 1400$	3. <u>1.400</u>
4) Two friends were counting the number of texts they sent in a month. Alex sent 893 and Jessie sent 768. To the nearest hundred, what is the combined amount of texts they sent?	$900 + 800$ 1700	$893 + 768$ $1661 = 1700$	4. <u>1.700</u>
5) While building a house, an architect used 494 nails on the first floor and 646 on the second. To the nearest ten, how many nails did he use on both floors?	$490 + 650$ 1140	$494 + 646$ $1140 = 1140$	5. <u>1.140</u>
6) The classes in the fourth grade were counting the fundraiser money they earned. Mr. Smith's Class earned 373 dollars and Mrs. White's class earned 514 dollars. To the nearest hundred, how much did they earn total?	$400 + 500$ 900	$373 + 514$ $887 = 900$	6. <u>900</u>
7) An apple orchard was split into two sections. The first had 829 trees and the second had 316. To the nearest ten, how many trees were there total in the orchard?	$830 + 320$ 1150	$829 + 316$ $1145 = 1150$	7. <u>1.150</u>
8) Vanessa was downloading apps to her phone. The first app she downloaded was 360 kb and the second was 490 kb. To the nearest ten, what was the total size (in kb) of all the apps she downloaded?	$360 + 490$ 850	$360 + 490$ $850 = 850$	8. <u>850</u>
9) A zoologist was checking the weights of two gorillas. Gorilla A weighed 761 pounds and gorilla B weighed 246 pounds. To the nearest hundred, what is the combined weight of both gorillas?	$800 + 200$ 1000	$761 + 246$ $1007 = 1000$	9. <u>1.000</u>
10) While organizing her files, Antonia deleted 505 pictures and 661 songs. To the nearest hundred, what is the total number of files she deleted?	$500 + 700$ 1200	$505 + 661$ $1166 = 1200$	10. <u>1.200</u>

**Löse jede Aufgabe.****Antworten**

1.430

840

630

1.490

1.600

1. \_\_\_\_\_

1.000

800

1.300

1.330

520

2. \_\_\_\_\_

- 1) At Pauline's school there are 118 students in 3rd grade and 258 students in 4th grade. To the nearest ten, how many students were there in both grades?
- 2) A pet store had 326 goldfish and 564 clown fish. To the nearest hundred, what is the total number of both types of fish?
- 3) A grocery store ordered 482 bottles of regular soda and 902 bottles of diet soda. To the nearest hundred, what is the total number of bottles the store ordered?
- 4) Two friends were counting the number of texts they sent in a month. Alex sent 893 and Jessie sent 768. To the nearest hundred, what is the combined amount of texts they sent?
- 5) While building a house, an architect used 494 nails on the first floor and 646 on the second. To the nearest ten, how many nails did he use on both floors?
- 6) The classes in the fourth grade were counting the fundraiser money they earned. Mr. Smith's Class earned 373 dollars and Mrs. White's class earned 514 dollars. To the nearest hundred, how much did they earn total?
- 7) An apple orchard was split into two sections. The first had 829 trees and the second had 316. To the nearest ten, how many trees were there total in the orchard?
- 8) Vanessa was downloading apps to her phone. The first app she downloaded was 360 kb and the second was 490 kb. To the nearest ten, what was the total size (in kb) of all the apps she downloaded?
- 9) A zoologist was checking the weights of two gorillas. Gorilla A weighed 761 pounds and gorilla B weighed 246 pounds. To the nearest hundred, what is the combined weight of both gorillas?
- 10) While organizing her files, Antonia deleted 505 pictures and 661 songs. To the nearest hundred, what is the total number of files she deleted?

3. \_\_\_\_\_

4. \_\_\_\_\_

5. \_\_\_\_\_

6. \_\_\_\_\_

7. \_\_\_\_\_

8. \_\_\_\_\_

9. \_\_\_\_\_

10. \_\_\_\_\_

**Löse jede Aufgabe.****Antworten**

- 1) Over the summer Jannik earned 791 dollars mowing lawns and another 455 dollars trimming weeds. To the nearest ten, how much money did Jannik make total?
- 2) Jonas was playing games at the arcade. He won 940 tickets from the basketball game and 713 tickets from whack-a-mole. To the nearest ten, how many tickets did he get total?
- 3) Finn was reading through his favorite book series. The first book he read had 187 pages and the next book had 904 pages. To the nearest hundred, how many pages were in both books?
- 4) A chef was buying different soups. She bought 320 cans of chicken soup and 957 cans of mushroom soup. To the nearest ten, how many can of soup did she buy all together?
- 5) Two friends were counting the amount of candy they scored for Halloween. James received 798 pieces and Dan received 699 pieces. To the nearest ten, what is the combined amount they both received?
- 6) At a hotdog eating contest, in the first round 852 hotdogs were eaten and in round two another 601 were eaten. To the nearest ten, how many hotdogs were eaten total?
- 7) While organizing her files, Hanna deleted 994 pictures and 827 songs. To the nearest hundred, what is the total number of files she deleted?
- 8) A cookie company held a poll asking customers their favorite type of cookie. 927 people said chocolate chip and 829 said oatmeal. To the nearest ten, what is the combined number of votes for both cookies?
- 9) An apple orchard was split into two sections. The first had 455 trees and the second had 442. To the nearest ten, how many trees were there total in the orchard?
- 10) On Monday a shipping company sent out 321 boxes. On Tuesday they sent out another 515 boxes. To the nearest hundred, what is the total number of boxes they sent out?

1. \_\_\_\_\_
2. \_\_\_\_\_
3. \_\_\_\_\_
4. \_\_\_\_\_
5. \_\_\_\_\_
6. \_\_\_\_\_
7. \_\_\_\_\_
8. \_\_\_\_\_
9. \_\_\_\_\_
10. \_\_\_\_\_

**Löse jede Aufgabe.****Antworten**

1) Over the summer Jannik earned 791 dollars mowing lawns and another 455 dollars trimming weeds. To the nearest ten, how much money did Jannik make total?	$790 + 460$ 1250	$791 + 455$ $1246 = 1250$	1. <u>1.250</u>
2) Jonas was playing games at the arcade. He won 940 tickets from the basketball game and 713 tickets from whack-a-mole. To the nearest ten, how many tickets did he get total?	$940 + 710$ 1650	$940 + 713$ $1653 = 1650$	2. <u>1.650</u>
3) Finn was reading through his favorite book series. The first book he read had 187 pages and the next book had 904 pages. To the nearest hundred, how many pages were in both books?	$200 + 900$ 1100	$187 + 904$ $1091 = 1100$	3. <u>1.100</u>
4) A chef was buying different soups. She bought 320 cans of chicken soup and 957 cans of mushroom soup. To the nearest ten, how many can of soup did she buy all together?	$320 + 960$ 1280	$320 + 957$ $1277 = 1280$	4. <u>1.280</u>
5) Two friends were counting the amount of candy they scored for Halloween. James received 798 pieces and Dan received 699 pieces. To the nearest ten, what is the combined amount they both received?	$700 + 800$ 1500	$699 + 798$ $1497 = 1500$	5. <u>1.500</u>
6) At a hotdog eating contest, in the first round 852 hotdogs were eaten and in round two another 601 were eaten. To the nearest ten, how many hotdogs were eaten total?	$850 + 600$ 1450	$852 + 601$ $1453 = 1450$	6. <u>1.450</u>
7) While organizing her files, Hanna deleted 994 pictures and 827 songs. To the nearest hundred, what is the total number of files she deleted?	$1000 + 800$ 1800	$994 + 827$ $1821 = 1800$	7. <u>1.800</u>
8) A cookie company held a poll asking customers their favorite type of cookie. 927 people said chocolate chip and 829 said oatmeal. To the nearest ten, what is the combined number of votes for both cookies?	$930 + 830$ 1760	$927 + 829$ $1756 = 1760$	8. <u>1.760</u>
9) An apple orchard was split into two sections. The first had 455 trees and the second had 442. To the nearest ten, how many trees were there total in the orchard?	$460 + 440$ 900	$455 + 442$ $897 = 900$	9. <u>900</u>
10) On Monday a shipping company sent out 321 boxes. On Tuesday they sent out another 515 boxes. To the nearest hundred, what is the total number of boxes they sent out?	$300 + 500$ 800	$321 + 515$ $836 = 800$	10. <u>800</u>

**Löse jede Aufgabe.****Antworten**

1.430

840

630

1.490

1.600

1. \_\_\_\_\_

1.000

800

1.300

1.330

520

2. \_\_\_\_\_

- 1) Over the summer Jannik earned 791 dollars mowing lawns and another 455 dollars trimming weeds. To the nearest ten, how much money did Jannik make total?
- 2) Jonas was playing games at the arcade. He won 940 tickets from the basketball game and 713 tickets from whack-a-mole. To the nearest ten, how many tickets did he get total?
- 3) Finn was reading through his favorite book series. The first book he read had 187 pages and the next book had 904 pages. To the nearest hundred, how many pages were in both books?
- 4) A chef was buying different soups. She bought 320 cans of chicken soup and 957 cans of mushroom soup. To the nearest ten, how many can of soup did she buy all together?
- 5) Two friends were counting the amount of candy they scored for Halloween. James received 798 pieces and Dan received 699 pieces. To the nearest ten, what is the combined amount they both received?
- 6) At a hotdog eating contest, in the first round 852 hotdogs were eaten and in round two another 601 were eaten. To the nearest ten, how many hotdogs were eaten total?
- 7) While organizing her files, Hanna deleted 994 pictures and 827 songs. To the nearest hundred, what is the total number of files she deleted?
- 8) A cookie company held a poll asking customers their favorite type of cookie. 927 people said chocolate chip and 829 said oatmeal. To the nearest ten, what is the combined number of votes for both cookies?
- 9) An apple orchard was split into two sections. The first had 455 trees and the second had 442. To the nearest ten, how many trees were there total in the orchard?
- 10) On Monday a shipping company sent out 321 boxes. On Tuesday they sent out another 515 boxes. To the nearest hundred, what is the total number of boxes they sent out?

3. \_\_\_\_\_

4. \_\_\_\_\_

5. \_\_\_\_\_

6. \_\_\_\_\_

7. \_\_\_\_\_

8. \_\_\_\_\_

9. \_\_\_\_\_

10. \_\_\_\_\_

**Löse jede Aufgabe.****Antworten**

- 1) A cookie company held a poll asking customers their favorite type of cookie. 877 people said chocolate chip and 204 said oatmeal. To the nearest ten, what is the combined number of votes for both cookies?
- 2) A school had 618 red pens and 781 blue pens. To the nearest hundred, how many pens did they have total?
- 3) In a month, a video store rented out 314 action movies and 471 other types of movies. To the nearest hundred, what is the sum of the movies they rented in a month?
- 4) At the bank, a customer turned in 830 dimes and 310 nickels. To the nearest ten, what is the total number of coins the customer turned in?
- 5) Tim collected 2 rocks from his garden. The first was 992 grams and the second was 286 grams. To the nearest hundred, what is the combined weight (in grams) of both rocks?
- 6) Two friends were counting the number of texts they sent in a month. Alex sent 136 and Jessie sent 342. To the nearest ten, what is the combined amount of texts they sent?
- 7) While building a house, an architect used 185 nails on the first floor and 567 on the second. To the nearest hundred, how many nails did he use on both floors?
- 8) While organizing her files, Sarah deleted 290 pictures and 166 songs. To the nearest hundred, what is the total number of files she deleted?
- 9) A donation center received 632 cans of corn and 317 cans of peas. To the nearest ten, how many cans did they receive total?
- 10) For lunch, 473 students selected chocolate milk and 927 selected regular milk. To the nearest ten, how many milks were taken total?

1. \_\_\_\_\_
2. \_\_\_\_\_
3. \_\_\_\_\_
4. \_\_\_\_\_
5. \_\_\_\_\_
6. \_\_\_\_\_
7. \_\_\_\_\_
8. \_\_\_\_\_
9. \_\_\_\_\_
10. \_\_\_\_\_

**Löse jede Aufgabe.****Antworten**

- |   |                      |                              |
|---|----------------------|------------------------------|
| 1) A cookie company held a poll asking customers their favorite type of cookie. 877 people said chocolate chip and 204 said oatmeal. To the nearest ten, what is the combined number of votes for both cookies? | $880 + 200$<br>1080  | $877 + 204$<br>$1081 = 1080$ |
| 2) A school had 618 red pens and 781 blue pens. To the nearest hundred, how many pens did they have total?  | $600 + 800$<br>1400  | $618 + 781$<br>$1399 = 1400$ |
| 3) In a month, a video store rented out 314 action movies and 471 other types of movies. To the nearest hundred, what is the sum of the movies they rented in a month?  | $300 + 500$<br>800   | $314 + 471$<br>$785 = 800$   |
| 4) At the bank, a customer turned in 830 dimes and 310 nickels. To the nearest ten, what is the total number of coins the customer turned in?   | $830 + 310$<br>1140  | $830 + 310$<br>$1140 = 1140$ |
| 5) Tim collected 2 rocks from his garden. The first was 992 grams and the second was 286 grams. To the nearest hundred, what is the combined weight (in grams) of both rocks?                                   | $1000 + 300$<br>1300 | $992 + 286$<br>$1278 = 1300$ |
| 6) Two friends were counting the number of texts they sent in a month. Alex sent 136 and Jessie sent 342. To the nearest ten, what is the combined amount of texts they sent?                                   | $140 + 340$<br>480   | $136 + 342$<br>$478 = 480$   |
| 7) While building a house, an architect used 185 nails on the first floor and 567 on the second. To the nearest hundred, how many nails did he use on both floors?  | $200 + 600$<br>800   | $185 + 567$<br>$752 = 800$   |
| 8) While organizing her files, Sarah deleted 290 pictures and 166 songs. To the nearest hundred, what is the total number of files she deleted?   | $300 + 200$<br>500   | $290 + 166$<br>$456 = 500$   |
| 9) A donation center received 632 cans of corn and 317 cans of peas. To the nearest ten, how many cans did they receive total?  | $630 + 320$<br>950   | $632 + 317$<br>$949 = 950$   |
| 10) For lunch, 473 students selected chocolate milk and 927 selected regular milk. To the nearest ten, how many milks were taken total?   | $470 + 930$<br>1400  | $473 + 927$<br>$1400 = 1400$ |

- |     |              |
|-----|--------------|
| 1.  | <u>1.080</u> |
| 2.  | <u>1.400</u> |
| 3.  | <u>800</u>   |
| 4.  | <u>1.140</u> |
| 5.  | <u>1.300</u> |
| 6.  | <u>480</u>   |
| 7.  | <u>800</u>   |
| 8.  | <u>500</u>   |
| 9.  | <u>950</u>   |
| 10. | <u>1.400</u> |

**Löse jede Aufgabe.****Antworten**

1.430

840

630

1.490

1.600

1. \_\_\_\_\_

1.000

800

1.300

1.330

520

2. \_\_\_\_\_

- 1) A cookie company held a poll asking customers their favorite type of cookie. 877 people said chocolate chip and 204 said oatmeal. To the nearest ten, what is the combined number of votes for both cookies?
- 2) A school had 618 red pens and 781 blue pens. To the nearest hundred, how many pens did they have total?
- 3) In a month, a video store rented out 314 action movies and 471 other types of movies. To the nearest hundred, what is the sum of the movies they rented in a month?
- 4) At the bank, a customer turned in 830 dimes and 310 nickels. To the nearest ten, what is the total number of coins the customer turned in?
- 5) Tim collected 2 rocks from his garden. The first was 992 grams and the second was 286 grams. To the nearest hundred, what is the combined weight (in grams) of both rocks?
- 6) Two friends were counting the number of texts they sent in a month. Alex sent 136 and Jessie sent 342. To the nearest ten, what is the combined amount of texts they sent?
- 7) While building a house, an architect used 185 nails on the first floor and 567 on the second. To the nearest hundred, how many nails did he use on both floors?
- 8) While organizing her files, Sarah deleted 290 pictures and 166 songs. To the nearest hundred, what is the total number of files she deleted?
- 9) A donation center received 632 cans of corn and 317 cans of peas. To the nearest ten, how many cans did they receive total?
- 10) For lunch, 473 students selected chocolate milk and 927 selected regular milk. To the nearest ten, how many milks were taken total?

3. \_\_\_\_\_

4. \_\_\_\_\_

5. \_\_\_\_\_

6. \_\_\_\_\_

7. \_\_\_\_\_

8. \_\_\_\_\_

9. \_\_\_\_\_

10. \_\_\_\_\_



**Löse jede Aufgabe.****Antworten**

- 1) For lunch, 171 students selected chocolate milk and 257 selected regular milk. To the nearest ten, how many milks were taken total?
- 2) Julia was downloading apps to her phone. The first app she downloaded was 527 kb and the second was 343 kb. To the nearest ten, what was the total size (in kb) of all the apps she downloaded?
- 3) During a 'Super Saturday Sale', a shoe store sold 813 pairs of sneakers and 829 pairs of sandals. To the nearest ten, what is the total number of shoes the store sold?
- 4) The classes in the fourth grade were counting the fundraiser money they earned. Mr. Smith's Class earned 854 dollars and Mrs. White's class earned 730 dollars. To the nearest ten, how much did they earn total?
- 5) A donation center received 704 cans of corn and 764 cans of peas. To the nearest hundred, how many cans did they receive total?
- 6) A candy company sells 697 boxes of sugar candy and 612 boxes of chocolate candy every day. To the nearest hundred, what is the sum of the boxes of candy they sell?
- 7) Two friends were counting the number of texts they sent in a month. Alex sent 299 and Jessie sent 338. To the nearest hundred, what is the combined amount of texts they sent?
- 8) A cookie company held a poll asking customers their favorite type of cookie. 445 people said chocolate chip and 301 said oatmeal. To the nearest ten, what is the combined number of votes for both cookies?
- 9) A grocery store ordered 141 bottles of regular soda and 485 bottles of diet soda. To the nearest hundred, what is the total number of bottles the store ordered?
- 10) While working on his car, Finn spent 749 dollars on a new paint job and 351 dollars on the transmission. To the nearest hundred, how much money did he spend total?

1. \_\_\_\_\_
2. \_\_\_\_\_
3. \_\_\_\_\_
4. \_\_\_\_\_
5. \_\_\_\_\_
6. \_\_\_\_\_
7. \_\_\_\_\_
8. \_\_\_\_\_
9. \_\_\_\_\_
10. \_\_\_\_\_

**Löse jede Aufgabe.****Antworten**

1) For lunch, 171 students selected chocolate milk and 257 selected regular milk. To the nearest ten, how many milks were taken total?	$170 + 260$ 430	$171 + 257$ $428 = 430$	1. <u>430</u>
2) Julia was downloading apps to her phone. The first app she downloaded was 527 kb and the second was 343 kb. To the nearest ten, what was the total size (in kb) of all the apps she downloaded?	$530 + 340$ 870	$527 + 343$ $870 = 870$	2. <u>870</u>
3) During a 'Super Saturday Sale', a shoe store sold 813 pairs of sneakers and 829 pairs of sandals. To the nearest ten, what is the total number of shoes the store sold?	$810 + 830$ 1640	$813 + 829$ $1642 = 1640$	3. <u>1.640</u>
4) The classes in the fourth grade were counting the fundraiser money they earned. Mr. Smith's Class earned 854 dollars and Mrs. White's class earned 730 dollars. To the nearest ten, how much did they earn total?	$850 + 730$ 1580	$854 + 730$ $1584 = 1580$	4. <u>1.580</u>
5) A donation center received 704 cans of corn and 764 cans of peas. To the nearest hundred, how many cans did they receive total?	$700 + 800$ 1500	$704 + 764$ $1468 = 1500$	5. <u>1.500</u>
6) A candy company sells 697 boxes of sugar candy and 612 boxes of chocolate candy every day. To the nearest hundred, what is the sum of the boxes of candy they sell?	$700 + 600$ 1300	$697 + 612$ $1309 = 1300$	6. <u>1.300</u>
7) Two friends were counting the number of texts they sent in a month. Alex sent 299 and Jessie sent 338. To the nearest hundred, what is the combined amount of texts they sent?	$300 + 300$ 600	$299 + 338$ $637 = 600$	7. <u>600</u>
8) A cookie company held a poll asking customers their favorite type of cookie. 445 people said chocolate chip and 301 said oatmeal. To the nearest ten, what is the combined number of votes for both cookies?	$450 + 300$ 750	$445 + 301$ $746 = 750$	8. <u>750</u>
9) A grocery store ordered 141 bottles of regular soda and 485 bottles of diet soda. To the nearest hundred, what is the total number of bottles the store ordered?	$100 + 500$ 600	$141 + 485$ $626 = 600$	9. <u>600</u>
10) While working on his car, Finn spent 749 dollars on a new paint job and 351 dollars on the transmission. To the nearest hundred, how much money did he spend total?	$700 + 400$ 1100	$749 + 351$ $1100 = 1100$	10. <u>1.100</u>

**Löse jede Aufgabe.****Antworten**

1.430

840

630

1.490

1.600

1. \_\_\_\_\_

1.000

800

1.300

1.330

520

2. \_\_\_\_\_

- 1) For lunch, 171 students selected chocolate milk and 257 selected regular milk. To the nearest ten, how many milks were taken total?
- 2) Julia was downloading apps to her phone. The first app she downloaded was 527 kb and the second was 343 kb. To the nearest ten, what was the total size (in kb) of all the apps she downloaded?
- 3) During a 'Super Saturday Sale', a shoe store sold 813 pairs of sneakers and 829 pairs of sandals. To the nearest ten, what is the total number of shoes the store sold?
- 4) The classes in the fourth grade were counting the fundraiser money they earned. Mr. Smith's Class earned 854 dollars and Mrs. White's class earned 730 dollars. To the nearest ten, how much did they earn total?
- 5) A donation center received 704 cans of corn and 764 cans of peas. To the nearest hundred, how many cans did they receive total?
- 6) A candy company sells 697 boxes of sugar candy and 612 boxes of chocolate candy every day. To the nearest hundred, what is the sum of the boxes of candy they sell?
- 7) Two friends were counting the number of texts they sent in a month. Alex sent 299 and Jessie sent 338. To the nearest hundred, what is the combined amount of texts they sent?
- 8) A cookie company held a poll asking customers their favorite type of cookie. 445 people said chocolate chip and 301 said oatmeal. To the nearest ten, what is the combined number of votes for both cookies?
- 9) A grocery store ordered 141 bottles of regular soda and 485 bottles of diet soda. To the nearest hundred, what is the total number of bottles the store ordered?
- 10) While working on his car, Finn spent 749 dollars on a new paint job and 351 dollars on the transmission. To the nearest hundred, how much money did he spend total?

3. \_\_\_\_\_

4. \_\_\_\_\_

5. \_\_\_\_\_

6. \_\_\_\_\_

7. \_\_\_\_\_

8. \_\_\_\_\_

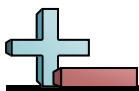
9. \_\_\_\_\_

10. \_\_\_\_\_

**Löse jede Aufgabe.****Antworten**

- 1) An ice cream shop sold 572 chocolate cones and 419 vanilla cones. To the nearest hundred, how many cones did the ice cream shop sell all together?
- 2) On Monday a shipping company sent out 178 boxes. On Tuesday they sent out another 732 boxes. To the nearest hundred, what is the total number of boxes they sent out?
- 3) A zoologist was checking the weights of two gorillas. Gorilla A weighed 760 pounds and gorilla B weighed 424 pounds. To the nearest ten, what is the combined weight of both gorillas?
- 4) For a new year's party 238 red balloons and 681 green balloons were used. To the nearest ten, what is the total number of balloons used?
- 5) At a hotdog eating contest, in the first round 222 hotdogs were eaten and in round two another 382 were eaten. To the nearest ten, how many hotdogs were eaten total?
- 6) Luca was playing his favorite video game. In the first round he scored 902 points and in round two he scored 675 points. To the nearest hundred, how many points did he score total?
- 7) A school had 398 red pens and 122 blue pens. To the nearest ten, how many pens did they have total?
- 8) Over the summer Jakob earned 643 dollars mowing lawns and another 155 dollars trimming weeds. To the nearest ten, how much money did Jakob make total?
- 9) For lunch, 407 students selected chocolate milk and 929 selected regular milk. To the nearest ten, how many milks were taken total?
- 10) In a math book, there were 981 problems in chapter one and 677 in chapter two. To the nearest hundred, how many problems are there in the first 2 chapters?

1. \_\_\_\_\_
2. \_\_\_\_\_
3. \_\_\_\_\_
4. \_\_\_\_\_
5. \_\_\_\_\_
6. \_\_\_\_\_
7. \_\_\_\_\_
8. \_\_\_\_\_
9. \_\_\_\_\_
10. \_\_\_\_\_

**Löse jede Aufgabe.****Antworten**

1) An ice cream shop sold 572 chocolate cones and 419 vanilla cones. To the nearest hundred, how many cones did the ice cream shop sell all together?	$600 + 400$ 1000	$572 + 419$ $991 = 1000$	1. <u>1.000</u>
2) On Monday a shipping company sent out 178 boxes. On Tuesday they sent out another 732 boxes. To the nearest hundred, what is the total number of boxes they sent out?	$200 + 700$ 900	$178 + 732$ $910 = 900$	2. <u>900</u>
3) A zoologist was checking the weights of two gorillas. Gorilla A weighed 760 pounds and gorilla B weighed 424 pounds. To the nearest ten, what is the combined weight of both gorillas?	$760 + 420$ 1180	$760 + 424$ $1184 = 1180$	3. <u>1.180</u>
4) For a new year's party 238 red balloons and 681 green balloons were used. To the nearest ten, what is the total number of balloons used?	$240 + 680$ 920	$238 + 681$ $919 = 920$	4. <u>920</u>
5) At a hotdog eating contest, in the first round 222 hotdogs were eaten and in round two another 382 were eaten. To the nearest ten, how many hotdogs were eaten total?	$220 + 380$ 600	$222 + 382$ $604 = 600$	5. <u>600</u>
6) Luca was playing his favorite video game. In the first round he scored 902 points and in round two he scored 675 points. To the nearest hundred, how many points did he score total?	$900 + 700$ 1600	$902 + 675$ $1577 = 1600$	6. <u>1.600</u>
7) A school had 398 red pens and 122 blue pens. To the nearest ten, how many pens did they have total?	$400 + 120$ 520	$398 + 122$ $520 = 520$	7. <u>520</u>
8) Over the summer Jakob earned 643 dollars mowing lawns and another 155 dollars trimming weeds. To the nearest ten, how much money did Jakob make total?	$640 + 160$ 800	$643 + 155$ $798 = 800$	8. <u>800</u>
9) For lunch, 407 students selected chocolate milk and 929 selected regular milk. To the nearest ten, how many milks were taken total?	$410 + 930$ 1340	$407 + 929$ $1336 = 1340$	9. <u>1.340</u>
10) In a math book, there were 981 problems in chapter one and 677 in chapter two. To the nearest hundred, how many problems are there in the first 2 chapters?	$1000 + 700$ 1700	$981 + 677$ $1658 = 1700$	10. <u>1.700</u>



**Löse jede Aufgabe.**

**Antworten**

1.430	840	630	1.490	1.600
1.000	800	1.300	1.330	520

- 1) An ice cream shop sold 572 chocolate cones and 419 vanilla cones. To the nearest hundred, how many cones did the ice cream shop sell all together?
- 2) On Monday a shipping company sent out 178 boxes. On Tuesday they sent out another 732 boxes. To the nearest hundred, what is the total number of boxes they sent out?
- 3) A zoologist was checking the weights of two gorillas. Gorilla A weighed 760 pounds and gorilla B weighed 424 pounds. To the nearest ten, what is the combined weight of both gorillas?
- 4) For a new year's party 238 red balloons and 681 green balloons were used. To the nearest ten, what is the total number of balloons used?
- 5) At a hotdog eating contest, in the first round 222 hotdogs were eaten and in round two another 382 were eaten. To the nearest ten, how many hotdogs were eaten total?
- 6) Luca was playing his favorite video game. In the first round he scored 902 points and in round two he scored 675 points. To the nearest hundred, how many points did he score total?
- 7) A school had 398 red pens and 122 blue pens. To the nearest ten, how many pens did they have total?
- 8) Over the summer Jakob earned 643 dollars mowing lawns and another 155 dollars trimming weeds. To the nearest ten, how much money did Jakob make total?
- 9) For lunch, 407 students selected chocolate milk and 929 selected regular milk. To the nearest ten, how many milks were taken total?
- 10) In a math book, there were 981 problems in chapter one and 677 in chapter two. To the nearest hundred, how many problems are there in the first 2 chapters?

1. \_\_\_\_\_
2. \_\_\_\_\_
3. \_\_\_\_\_
4. \_\_\_\_\_
5. \_\_\_\_\_
6. \_\_\_\_\_
7. \_\_\_\_\_
8. \_\_\_\_\_
9. \_\_\_\_\_
10. \_\_\_\_\_