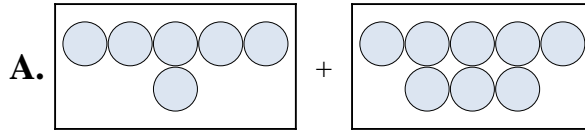




Ordne jeder Additionsgleichung den bildlichen Gegenwert zu.

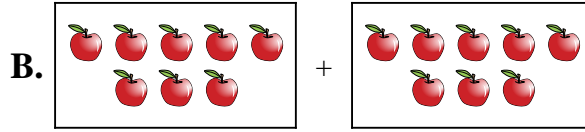
**Antworten**

1)  $6 + 8$



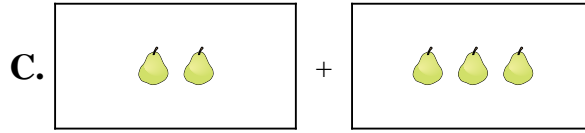
1. \_\_\_\_\_

2)  $8 + 8$




2. \_\_\_\_\_

3)  $4 + 6$



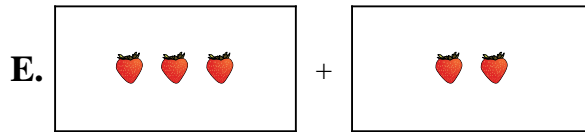
3. \_\_\_\_\_

4)  $2 + 3$



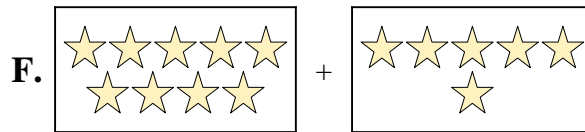
4. \_\_\_\_\_

5)  $10 + 9$



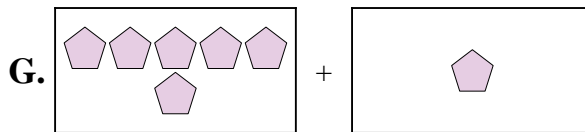
5. \_\_\_\_\_

6)  $8 + 5$



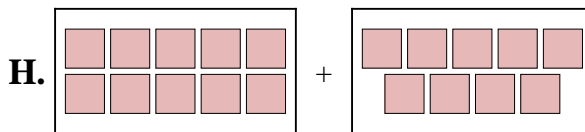
6. \_\_\_\_\_

7)  $6 + 1$



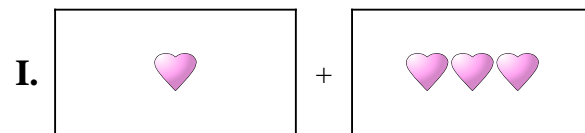
7. \_\_\_\_\_

8)  $3 + 2$



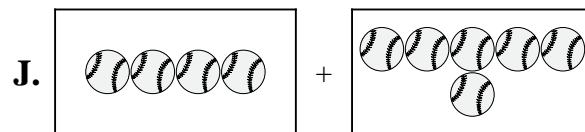
8. \_\_\_\_\_

9)  $1 + 3$



9. \_\_\_\_\_

10)  $9 + 6$

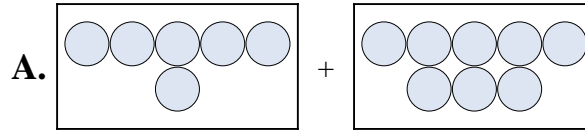


10. \_\_\_\_\_

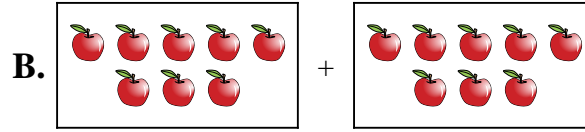


Ordne jeder Additionsgleichung den bildlichen Gegenwert zu.

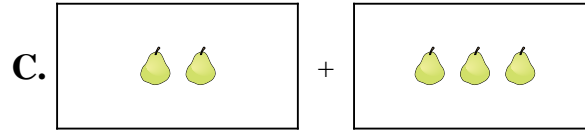
1)  $6 + 8$




2)  $8 + 8$



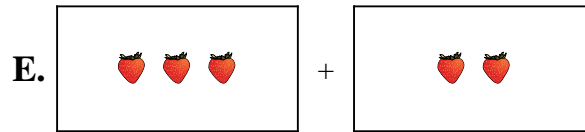
3)  $4 + 6$



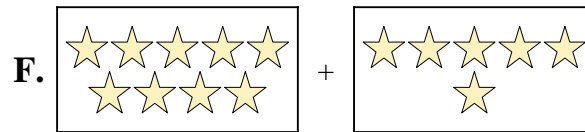
4)  $2 + 3$



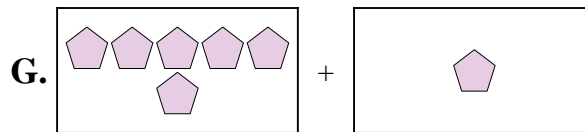
5)  $10 + 9$



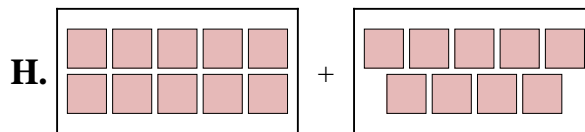
6)  $8 + 5$



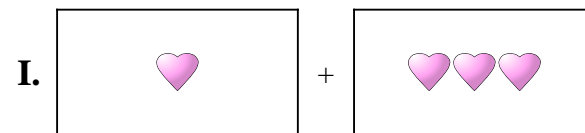
7)  $6 + 1$



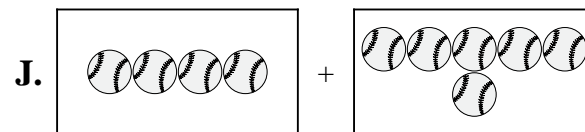
8)  $3 + 2$



9)  $1 + 3$



10)  $9 + 6$



**Antworten**

1.   **A**  

2.   **B**  

3.   **J**  

4.   **C**  

5.   **H**  

6.   **D**  

7.   **G**  

8.   **E**  

9.   **I**  

10.   **F**