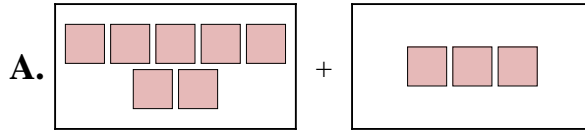




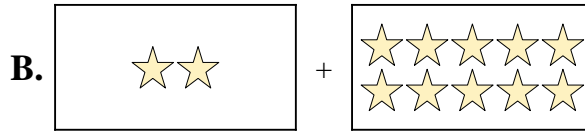
Ordne jeder Additionsgleichung den bildlichen Gegenwert zu.

**Antworten**


1)  $6 + 9$



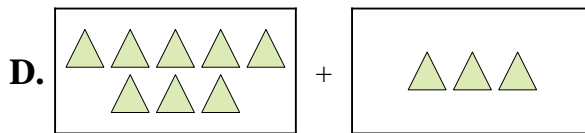
2)  $2 + 10$



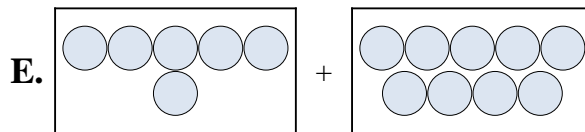
3)  $7 + 1$



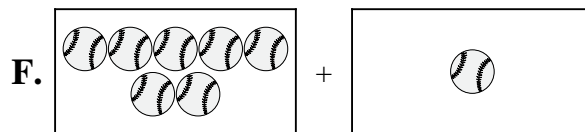
4)  $8 + 3$



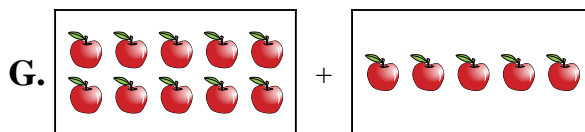
5)  $1 + 3$



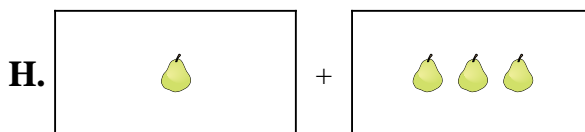
6)  $6 + 4$



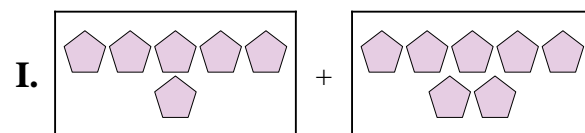
7)  $7 + 3$



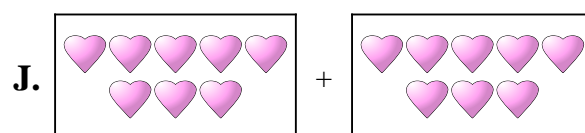
8)  $8 + 8$



9)  $10 + 5$



10)  $6 + 7$

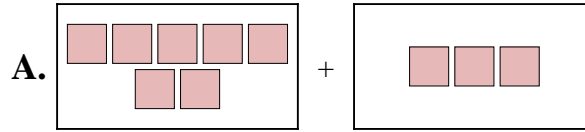


1. \_\_\_\_\_
2. \_\_\_\_\_
3. \_\_\_\_\_
4. \_\_\_\_\_
5. \_\_\_\_\_
6. \_\_\_\_\_
7. \_\_\_\_\_
8. \_\_\_\_\_
9. \_\_\_\_\_
10. \_\_\_\_\_

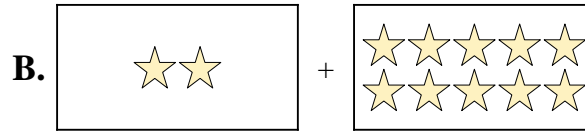


Ordne jeder Additionsgleichung den bildlichen Gegenwert zu.


1)  $6 + 9$



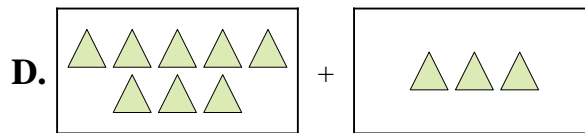
2)  $2 + 10$



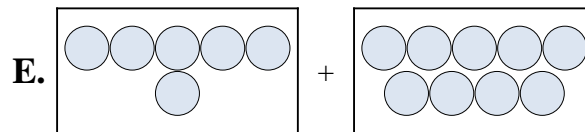
3)  $7 + 1$



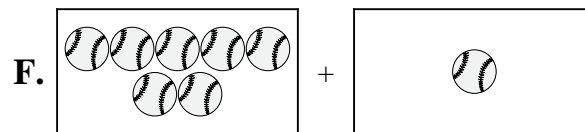
4)  $8 + 3$



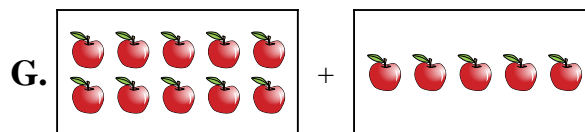
5)  $1 + 3$



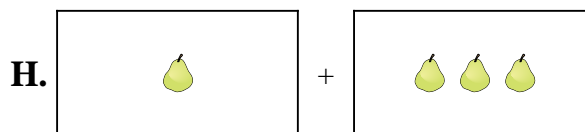
6)  $6 + 4$



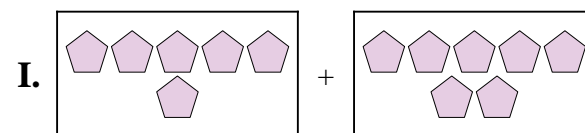
7)  $7 + 3$



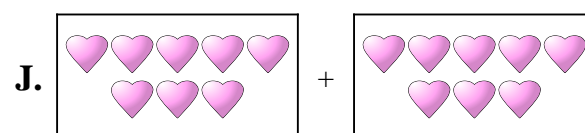
8)  $8 + 8$



9)  $10 + 5$



10)  $6 + 7$



**Antworten**

1.   **E**  

2.   **B**  

3.   **F**  

4.   **D**  

5.   **H**  

6.   **C**  

7.   **A**  

8.   **J**  

9.   **G**  

10.   **I**