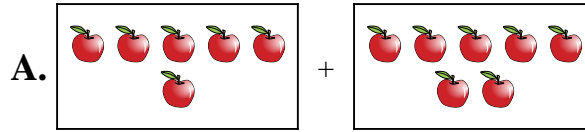




Ordne jeder Additionsgleichung den bildlichen Gegenwert zu.

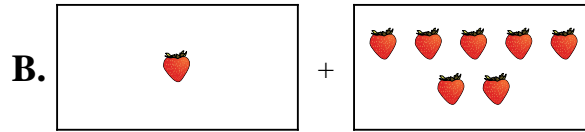
Antworten

1) $6 + 2$



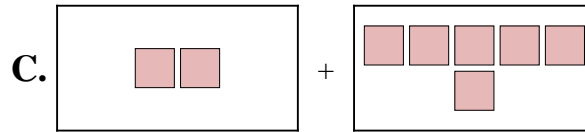
1. _____

2) $5 + 7$



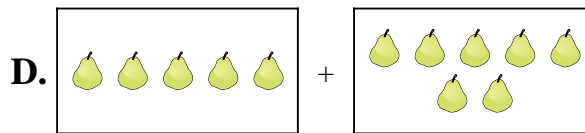
2. _____

3) $4 + 6$



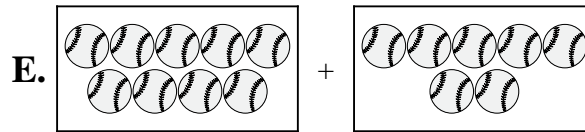
3. _____

4) $4 + 1$



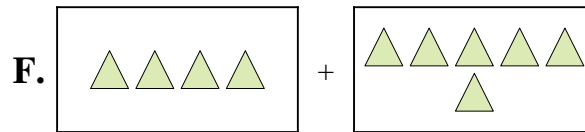
4. _____

5) $2 + 6$



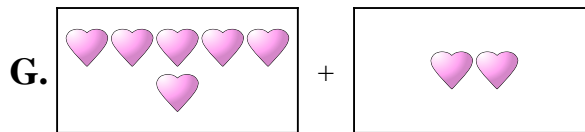
5. _____

6) $1 + 7$



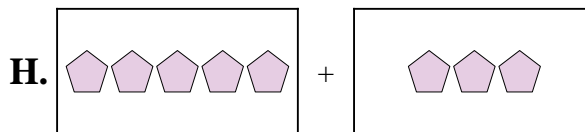
6. _____

7) $6 + 7$



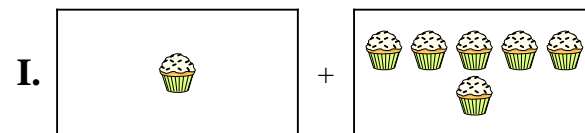
7. _____

8) $1 + 6$



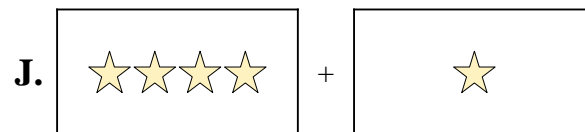
8. _____

9) $9 + 7$



9. _____

10) $5 + 3$

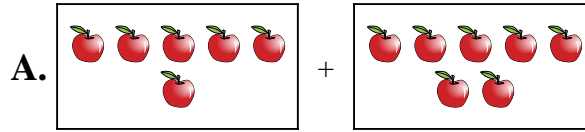


10. _____

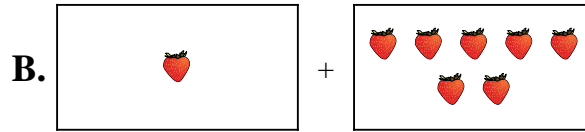


Ordne jeder Additions Gleichung den bildlichen Gegenwert zu.

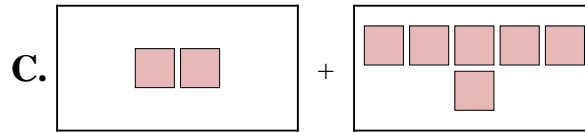
1) $6 + 2$



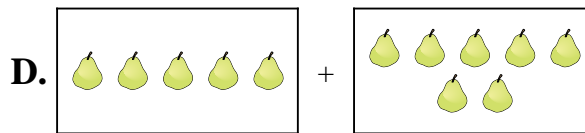
2) $5 + 7$



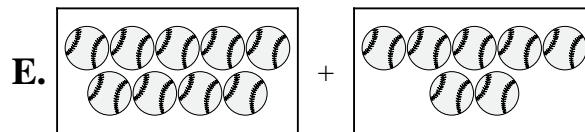
3) $4 + 6$



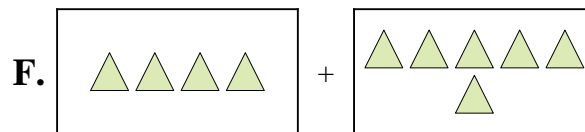
4) $4 + 1$



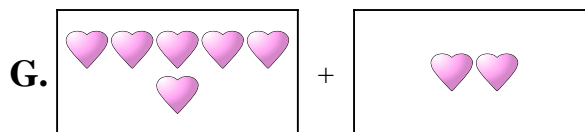
5) $2 + 6$



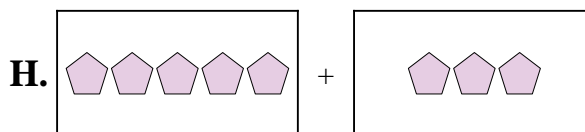
6) $1 + 7$



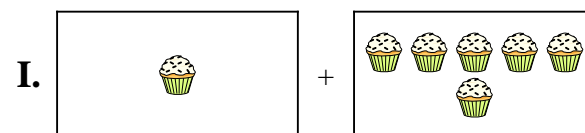
7) $6 + 7$



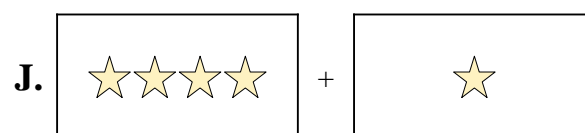
8) $1 + 6$



9) $9 + 7$



10) $5 + 3$



Antworten

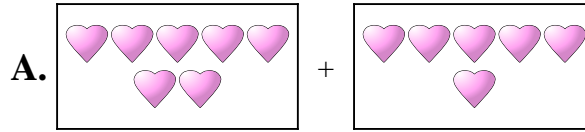
1. **G**
2. **D**
3. **F**
4. **J**
5. **C**
6. **B**
7. **A**
8. **I**
9. **E**
10. **H**



Ordne jeder Additionsgleichung den bildlichen Gegenwert zu.

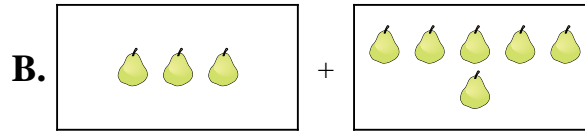
Antworten

1) $6 + 4$




1. _____

2) $3 + 1$



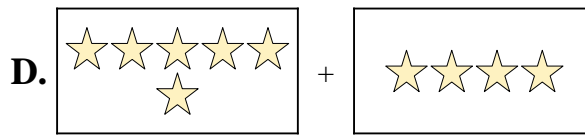
2. _____

3) $10 + 7$



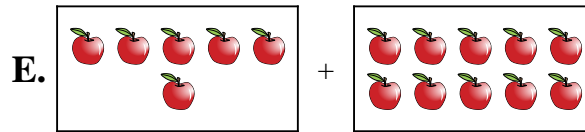
3. _____

4) $9 + 2$



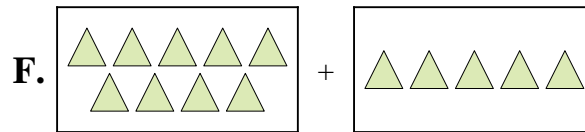
4. _____

5) $7 + 6$




5. _____

6) $10 + 5$



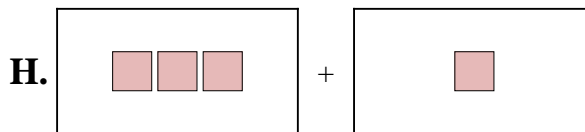
6. _____

7) $6 + 10$



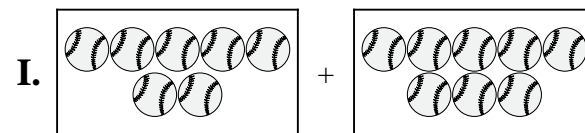
7. _____

8) $3 + 6$



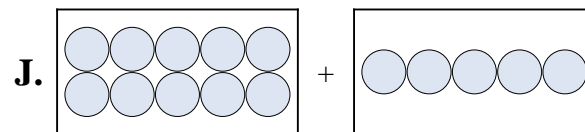
8. _____

9) $9 + 5$



9. _____

10) $7 + 8$

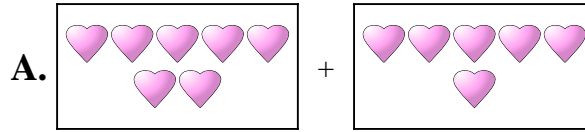


10. _____

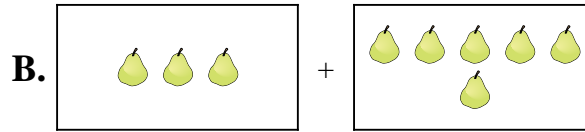


Ordne jeder Additions Gleichung den bildlichen Gegenwert zu.


1) $6 + 4$



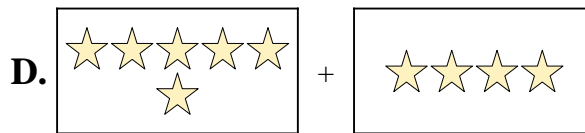
2) $3 + 1$



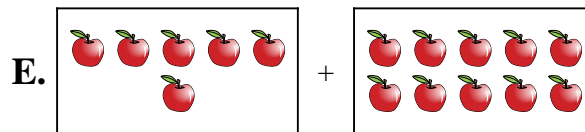
3) $10 + 7$



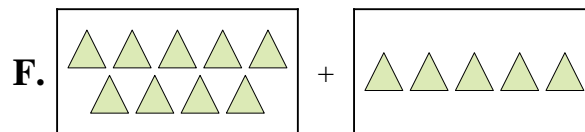
4) $9 + 2$




5) $7 + 6$



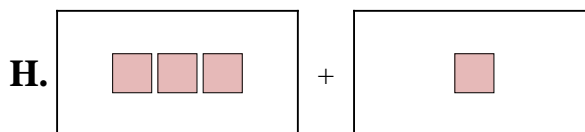
6) $10 + 5$



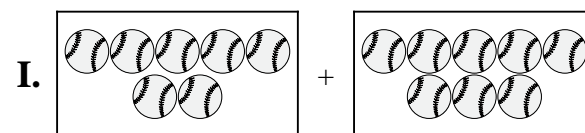
7) $6 + 10$



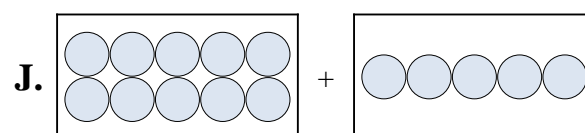
8) $3 + 6$



9) $9 + 5$



10) $7 + 8$



Antworten

1. **D**

2. **H**

3. **C**

4. **G**

5. **A**

6. **J**

7. **E**

8. **B**

9. **F**

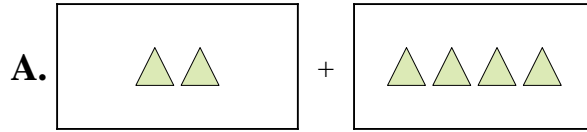
10. **I**



Ordne jeder Additionsgleichung den bildlichen Gegenwert zu.

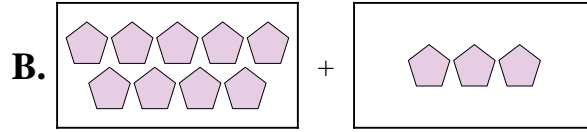
Antworten

1) $2 + 4$



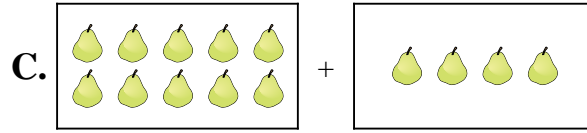
1. _____

2) $7 + 1$



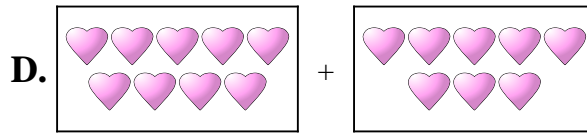
2. _____

3) $9 + 8$




3. _____

4) $4 + 6$



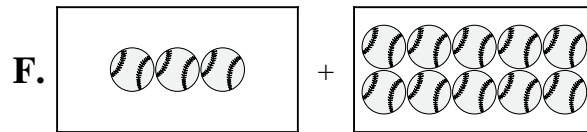
4. _____

5) $2 + 3$



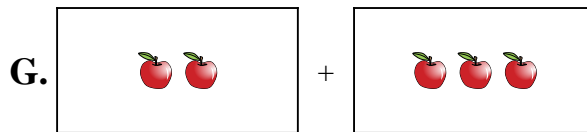
5. _____

6) $2 + 8$



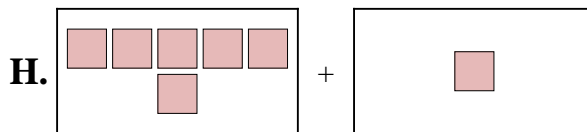
6. _____

7) $9 + 3$



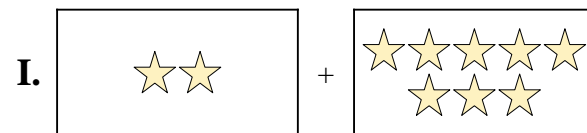
7. _____

8) $3 + 10$



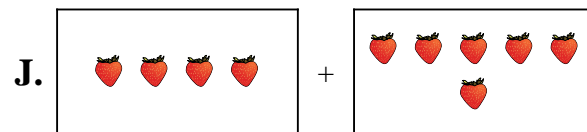
8. _____

9) $6 + 1$



9. _____

10) $10 + 4$



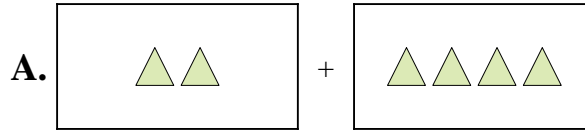
10. _____



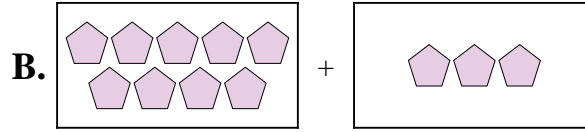
Ordne jeder Additionsgleichung den bildlichen Gegenwert zu.

Antworten

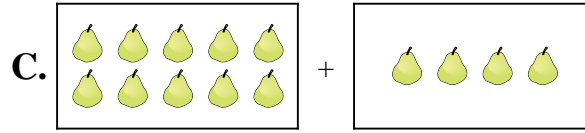
1) $2 + 4$



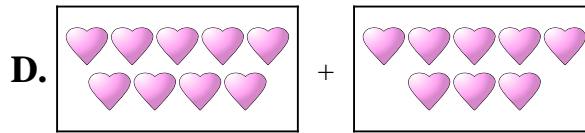
2) $7 + 1$




3) $9 + 8$



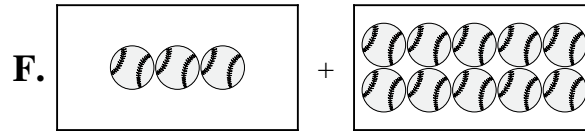
4) $4 + 6$



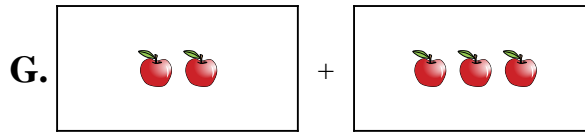
5) $2 + 3$



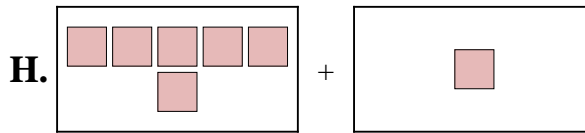
6) $2 + 8$



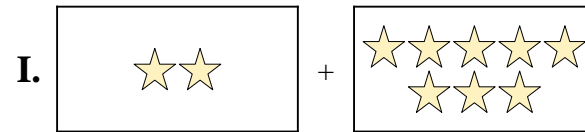
7) $9 + 3$



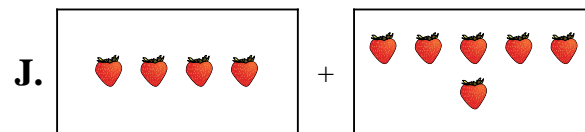
8) $3 + 10$



9) $6 + 1$



10) $10 + 4$




- 1. **A**
- 2. **E**
- 3. **D**
- 4. **J**
- 5. **G**
- 6. **I**
- 7. **B**
- 8. **F**
- 9. **H**
- 10. **C**



Ordne jeder Additionsgleichung den bildlichen Gegenwert zu.

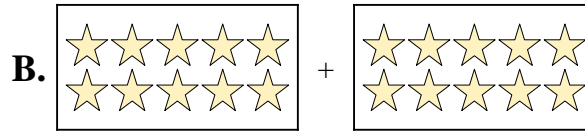
Antworten

1) $5 + 7$



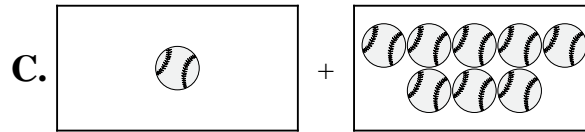
1. _____

2) $3 + 8$



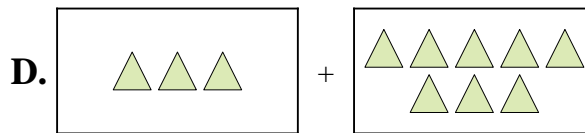
2. _____

3) $1 + 8$



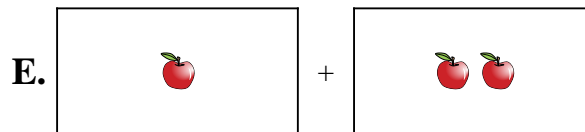
3. _____

4) $2 + 9$



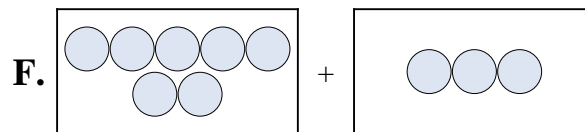
4. _____

5) $4 + 4$



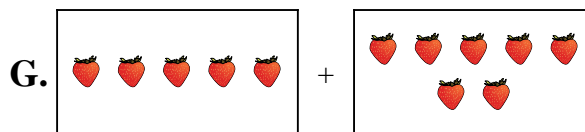
5. _____

6) $5 + 3$



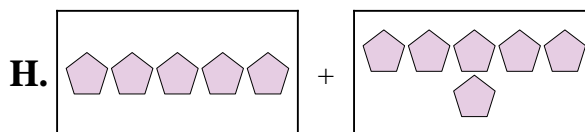
6. _____

7) $10 + 10$



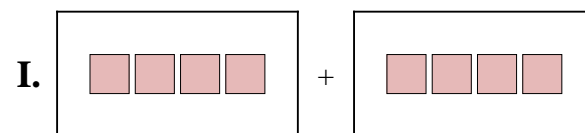
7. _____

8) $1 + 2$



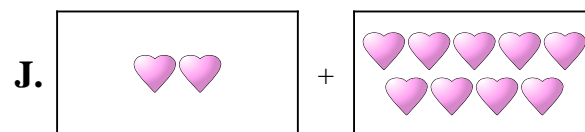
8. _____

9) $5 + 6$



9. _____

10) $7 + 3$




10. _____

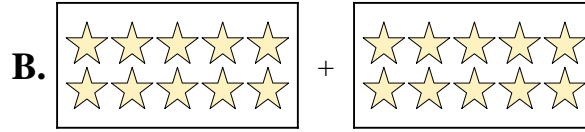


Ordne jeder Additions Gleichung den bildlichen Gegenwert zu.

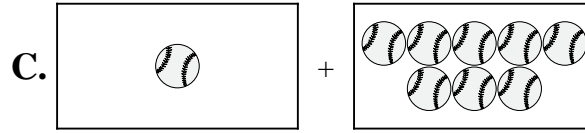
1) $5 + 7$



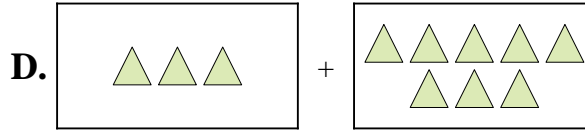
2) $3 + 8$



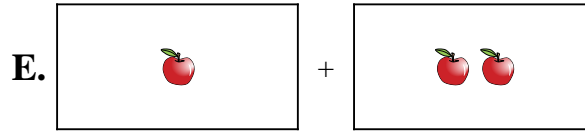
3) $1 + 8$



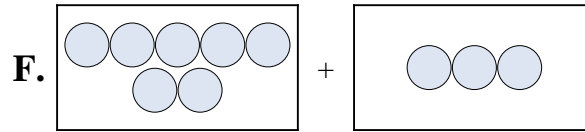
4) $2 + 9$



5) $4 + 4$



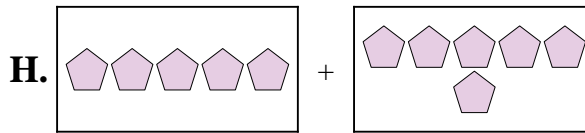
6) $5 + 3$



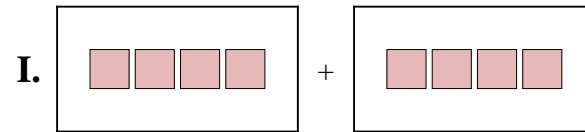
7) $10 + 10$



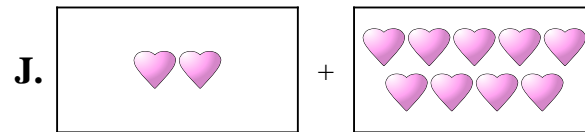
8) $1 + 2$



9) $5 + 6$



10) $7 + 3$



Antworten

1. **G**

2. **D**

3. **C**

4. **J**

5. **I**

6. **A**

7. **B**

8. **E**

9. **H**


10. **F**



Ordne jeder Additionsgleichung den bildlichen Gegenwert zu.

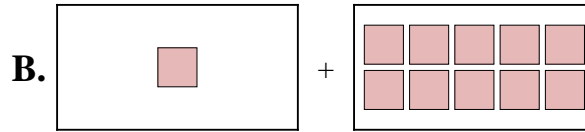
Antworten

1) $3 + 10$




1. _____

2) $8 + 10$



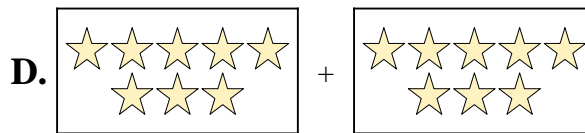
2. _____

3) $5 + 3$



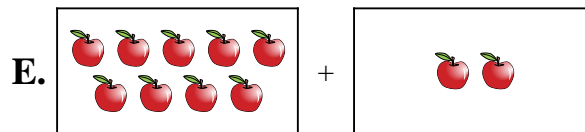
3. _____

4) $8 + 1$



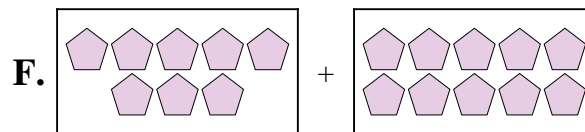
4. _____

5) $9 + 2$



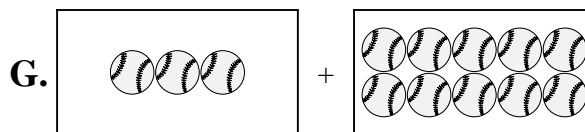
5. _____

6) $7 + 6$



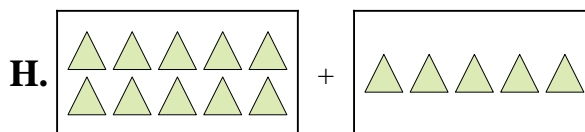
6. _____

7) $10 + 5$



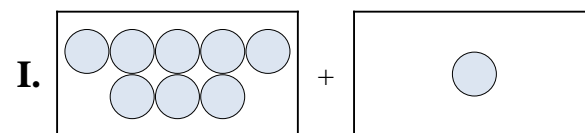
7. _____

8) $8 + 8$



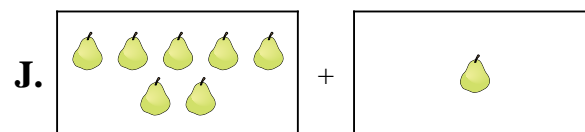
8. _____

9) $1 + 10$



9. _____

10) $7 + 1$




10. _____

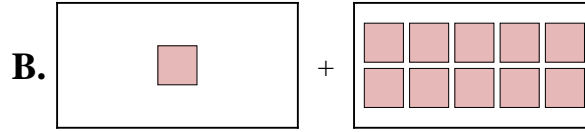


Ordne jeder Additionsgleichung den bildlichen Gegenwert zu.


1) $3 + 10$



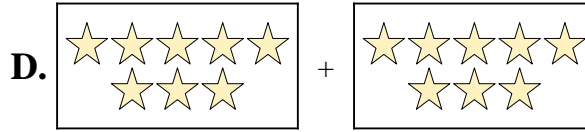
2) $8 + 10$



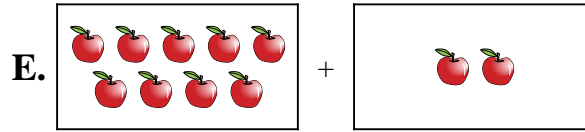
3) $5 + 3$



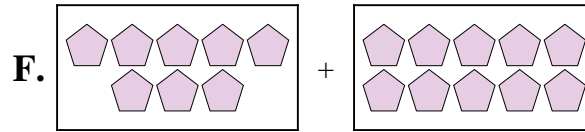
4) $8 + 1$



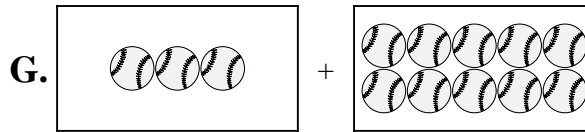
5) $9 + 2$



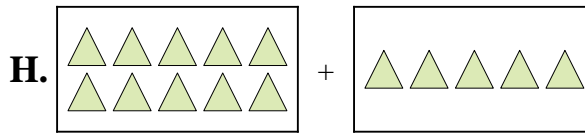
6) $7 + 6$



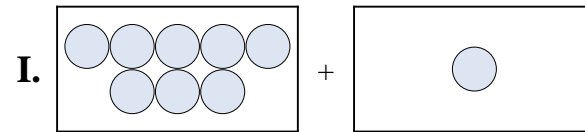
7) $10 + 5$



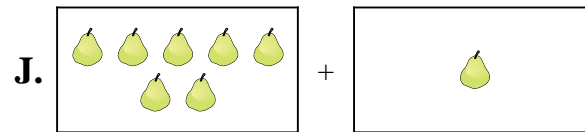
8) $8 + 8$



9) $1 + 10$



10) $7 + 1$



Antworten

1. **G**

2. **F**

3. **A**

4. **I**

5. **E**

6. **C**

7. **H**

8. **D**

9. **B**

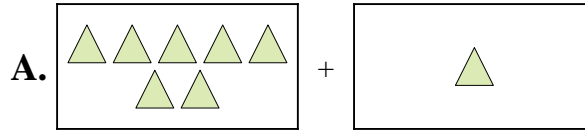
10. **J**



Ordne jeder Additions Gleichung den bildlichen Gegenwert zu.

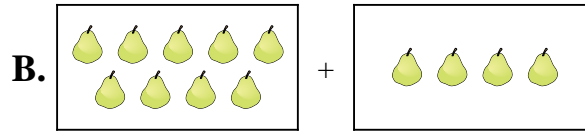
Antworten

1) $7 + 7$



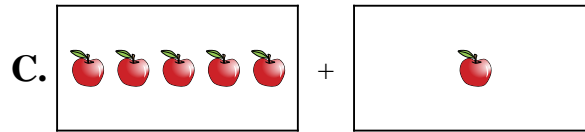
1. _____

2) $7 + 1$




2. _____

3) $10 + 4$




3. _____

4) $3 + 6$



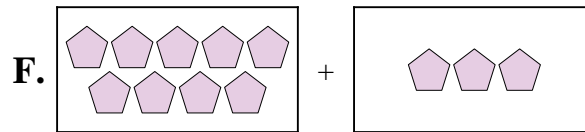
4. _____

5) $1 + 10$



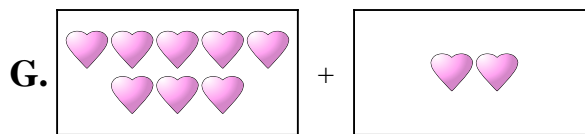
5. _____

6) $5 + 1$



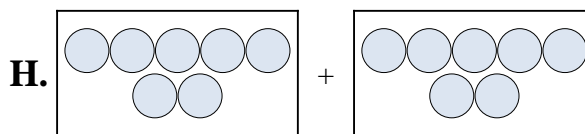
6. _____

7) $9 + 4$



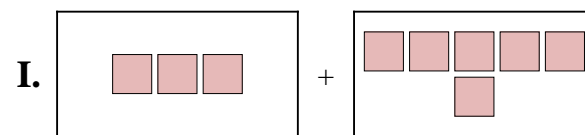
7. _____

8) $9 + 3$



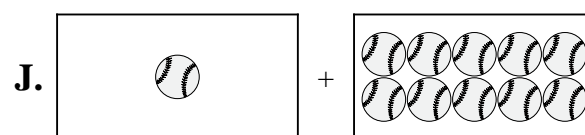
8. _____

9) $8 + 2$



9. _____

10) $5 + 4$

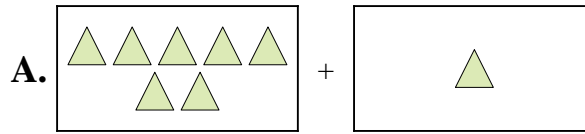


10. _____

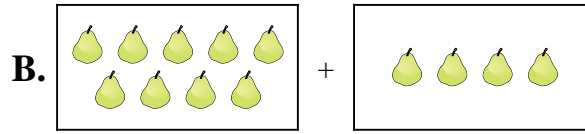


Ordne jeder Additions Gleichung den bildlichen Gegenwert zu.

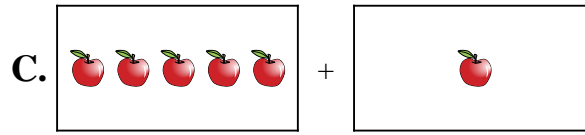
1) $7 + 7$




2) $7 + 1$




3) $10 + 4$



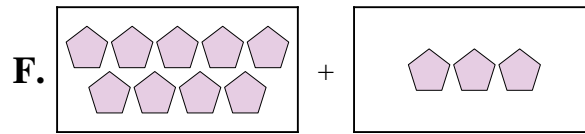
4) $3 + 6$



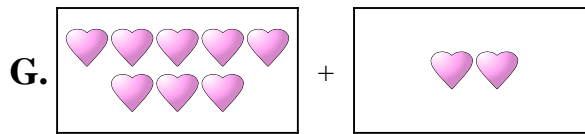
5) $1 + 10$



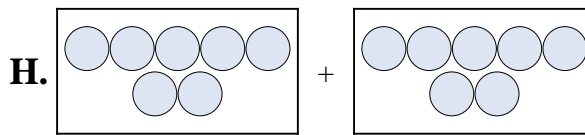
6) $5 + 1$



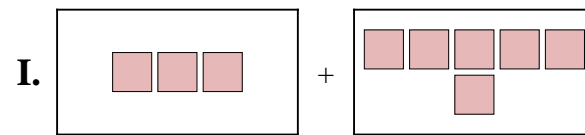
7) $9 + 4$



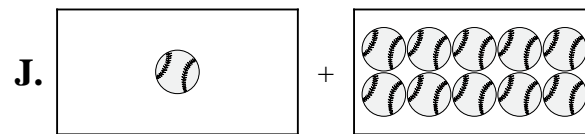
8) $9 + 3$



9) $8 + 2$



10) $5 + 4$



Antworten

1. **H**

2. **A**

3. **D**

4. **I**

5. **J**

6. **C**

7. **B**

8. **F**

9. **G**

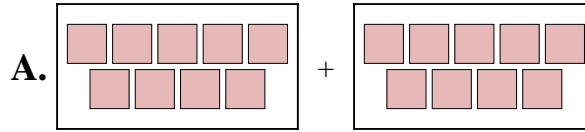
10. **E**



Ordne jeder Additionsgleichung den bildlichen Gegenwert zu.


Antworten

1) $1 + 7$



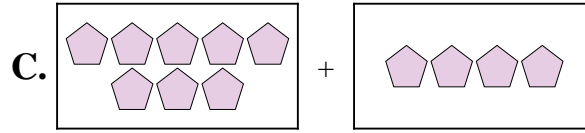
1. _____

2) $1 + 1$



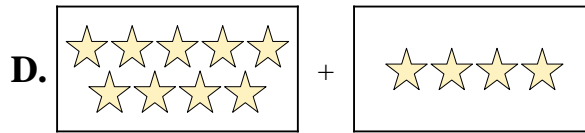
2. _____

3) $10 + 7$



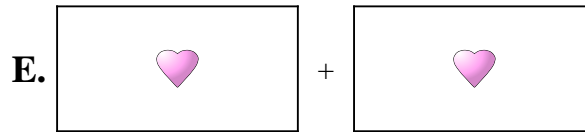
3. _____

4) $1 + 3$



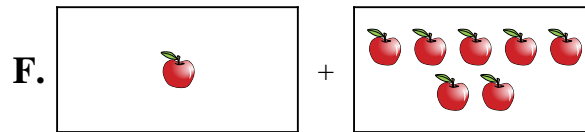
4. _____

5) $9 + 8$



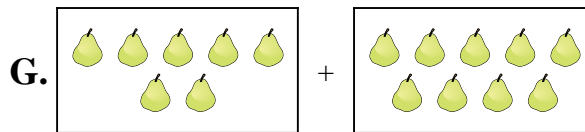
5. _____

6) $7 + 9$



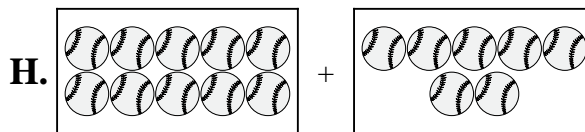
6. _____

7) $9 + 4$



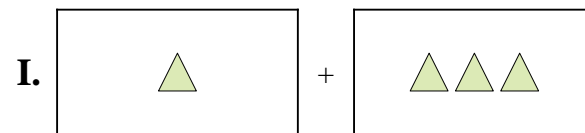
7. _____

8) $9 + 9$




8. _____

9) $8 + 4$



9. _____

10) $7 + 7$

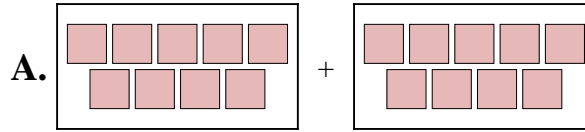


10. _____




Ordne jeder Additions Gleichung den bildlichen Gegenwert zu.

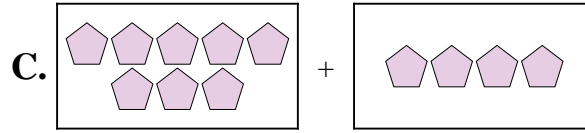
1) $1 + 7$



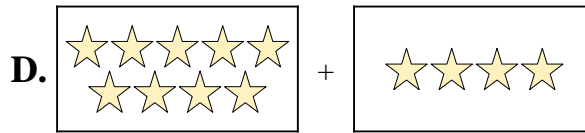
2) $1 + 1$



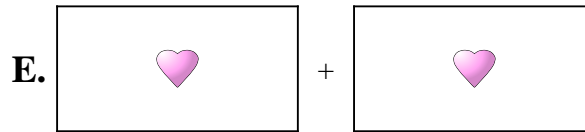
3) $10 + 7$



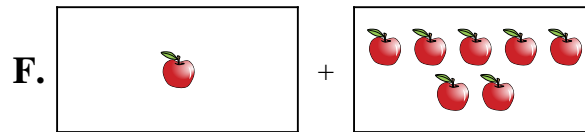
4) $1 + 3$



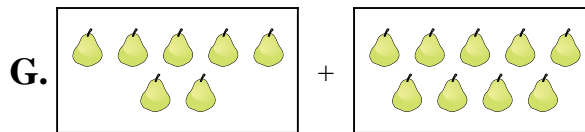
5) $9 + 8$



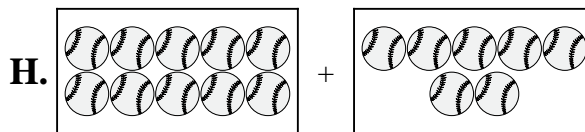
6) $7 + 9$



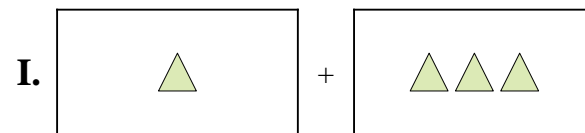
7) $9 + 4$




8) $9 + 9$



9) $8 + 4$



10) $7 + 7$



Antworten

1. **F**

2. **E**

3. **H**

4. **I**

5. **J**

6. **G**

7. **D**

8. **A**

9. **C**

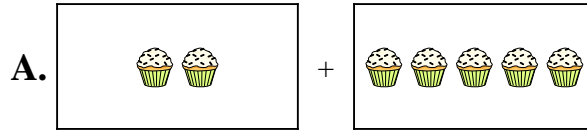
10. **B**



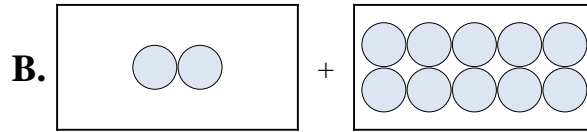
Ordne jeder Additionsgleichung den bildlichen Gegenwert zu.

Antworten

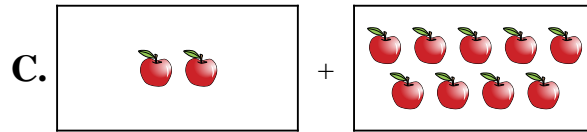
1) $6 + 5$



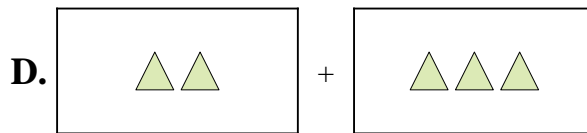
2) $2 + 10$



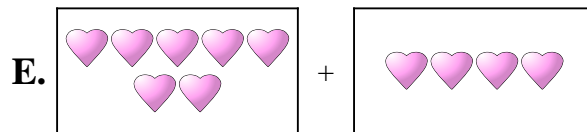
3) $7 + 4$



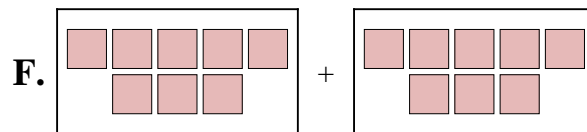
4) $6 + 3$



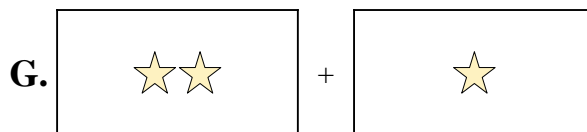
5) $2 + 5$



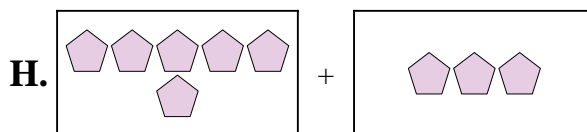
6) $8 + 8$



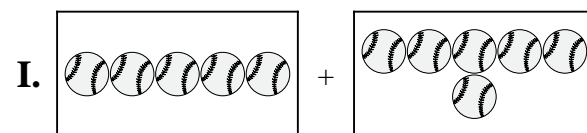
7) $2 + 9$



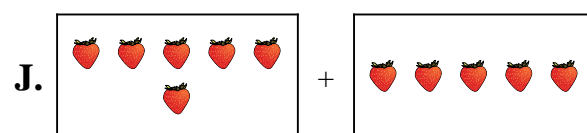
8) $5 + 6$



9) $2 + 3$



10) $2 + 1$



1. _____

2. _____

3. _____

4. _____

5. _____

6. _____

7. _____

8. _____

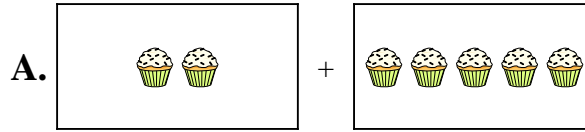
9. _____

10. _____

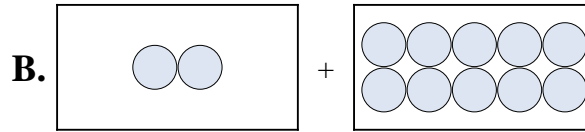


Ordne jeder Additionsgleichung den bildlichen Gegenwert zu.

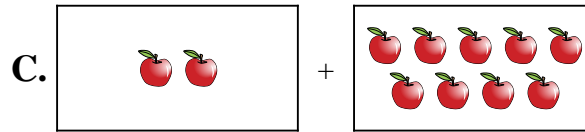
1) $6 + 5$



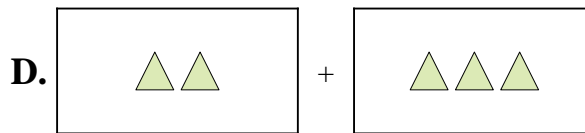
2) $2 + 10$



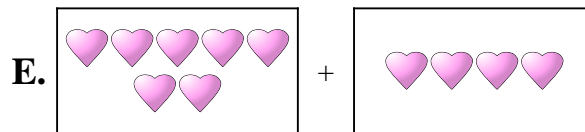
3) $7 + 4$



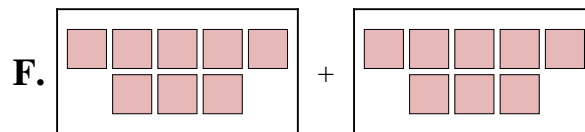
4) $6 + 3$



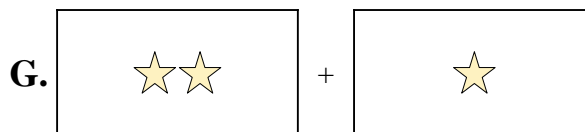
5) $2 + 5$



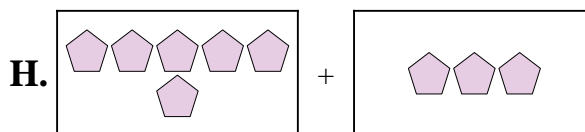
6) $8 + 8$



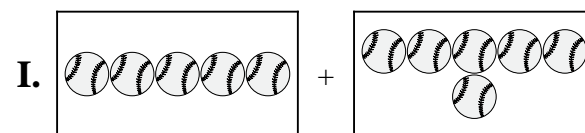
7) $2 + 9$




8) $5 + 6$



9) $2 + 3$



10) $2 + 1$



Antworten

1. **J**

2. **B**

3. **E**

4. **H**

5. **A**

6. **F**

7. **C**

8. **I**

9. **D**

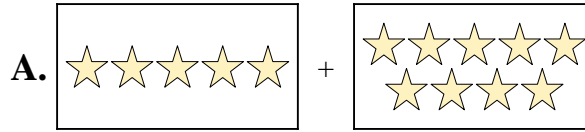
10. **G**



Ordne jeder Additionsleichung den bildlichen Gegenwert zu.

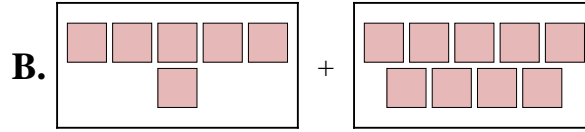
Antworten

1) $7 + 3$




1. _____

2) $6 + 9$



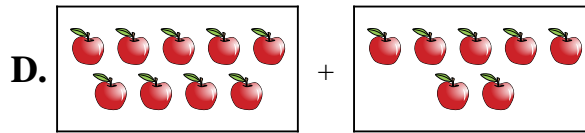
2. _____

3) $10 + 6$



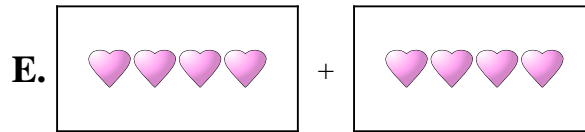
3. _____

4) $4 + 6$



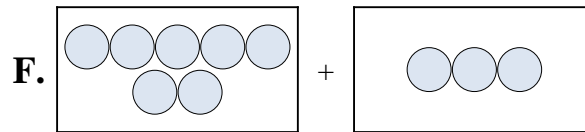
4. _____

5) $9 + 7$



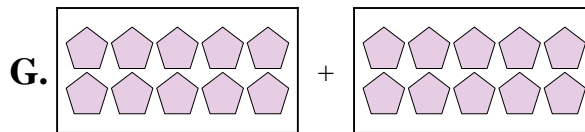
5. _____

6) $8 + 6$




6. _____

7) $10 + 10$



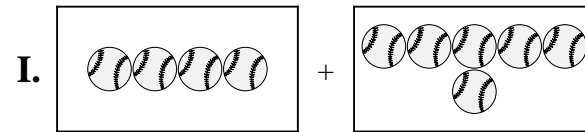
7. _____

8) $1 + 10$



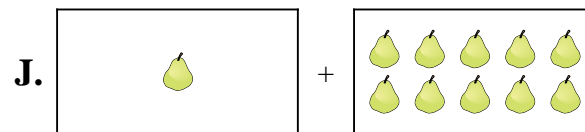
8. _____

9) $4 + 4$



9. _____

10) $5 + 9$

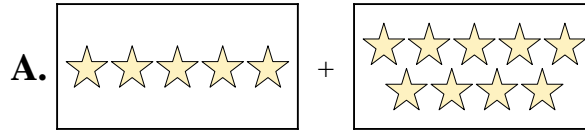


10. _____

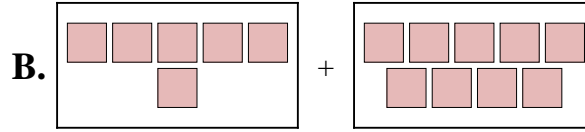


Ordne jeder Additions Gleichung den bildlichen Gegenwert zu.


1) $7 + 3$



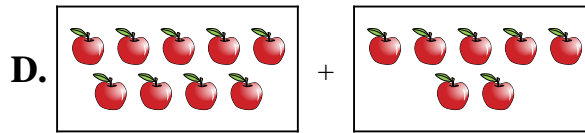
2) $6 + 9$



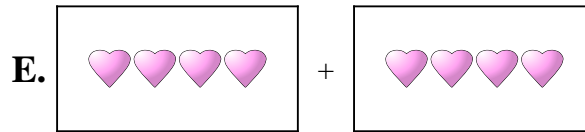
3) $10 + 6$



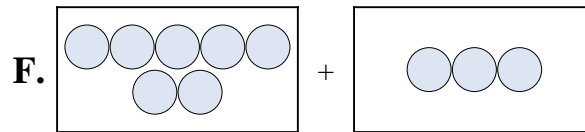
4) $4 + 6$



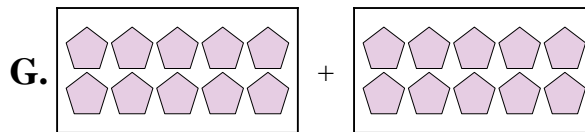
5) $9 + 7$




6) $8 + 6$



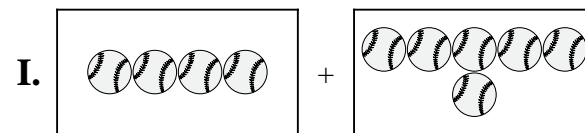
7) $10 + 10$



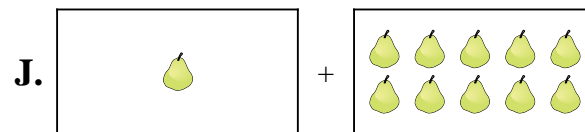
8) $1 + 10$



9) $4 + 4$



10) $5 + 9$



Antworten

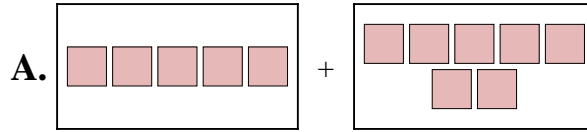
- 1. **F**
- 2. **B**
- 3. **H**
- 4. **I**
- 5. **D**
- 6. **C**
- 7. **G**
- 8. **J**
- 9. **E**
- 10. **A**



Ordne jeder Additionsgleichung den bildlichen Gegenwert zu.

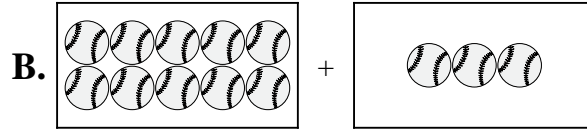
Antworten

1) $5 + 7$



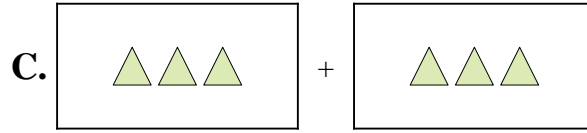
1. _____

2) $3 + 9$



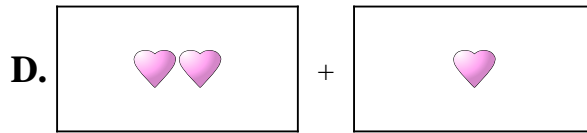
2. _____

3) $5 + 6$



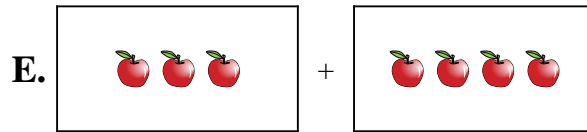
3. _____

4) $2 + 10$



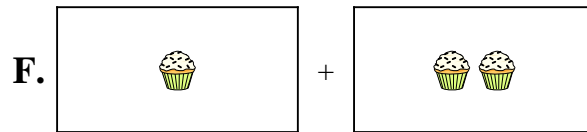
4. _____

5) $1 + 2$



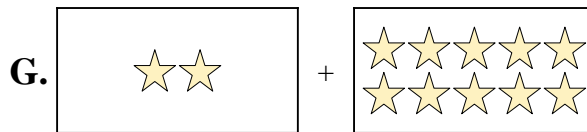
5. _____

6) $3 + 4$



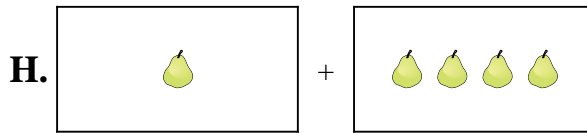
6. _____

7) $10 + 3$



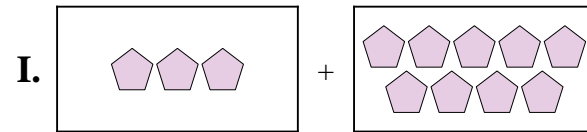
7. _____

8) $1 + 4$




8. _____

9) $2 + 1$



9. _____

10) $3 + 3$

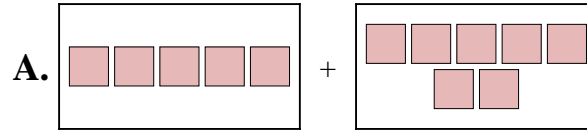


10. _____

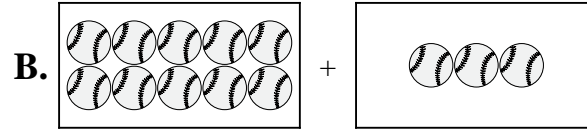


Ordne jeder Additions Gleichung den bildlichen Gegenwert zu.

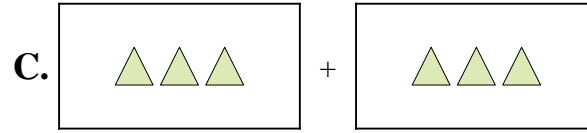
1) $5 + 7$



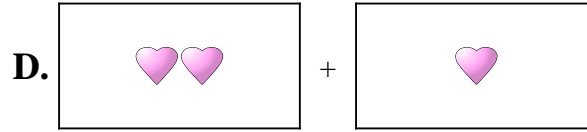
2) $3 + 9$



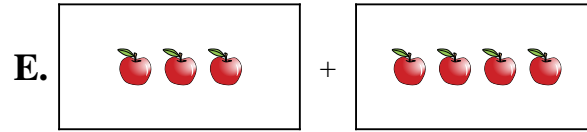
3) $5 + 6$



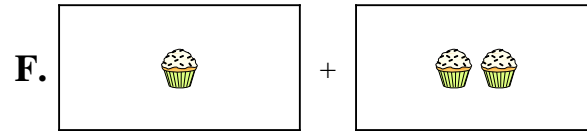
4) $2 + 10$



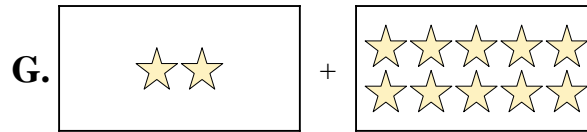
5) $1 + 2$



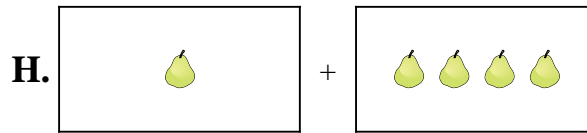
6) $3 + 4$



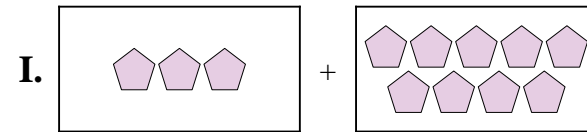
7) $10 + 3$



8) $1 + 4$



9) $2 + 1$



10) $3 + 3$



Antworten

1. **A**
2. **I**
3. **J**
4. **G**
5. **F**
6. **E**
7. **B**
8. **H**
9. **D**
10. **C**