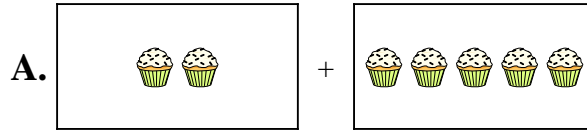




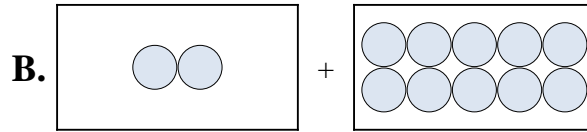
Ordne jeder Additionsleichung den bildlichen Gegenwert zu.

**Antworten**

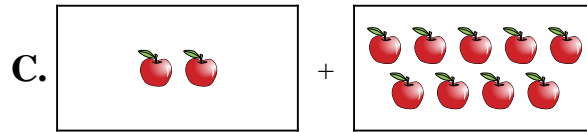
1)  $6 + 5$



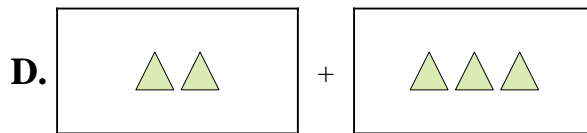
2)  $2 + 10$



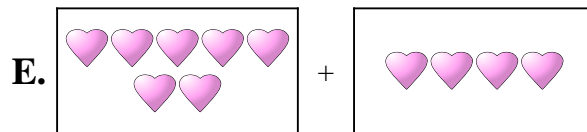
3)  $7 + 4$



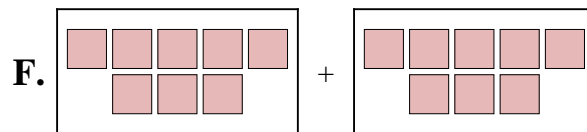
4)  $6 + 3$



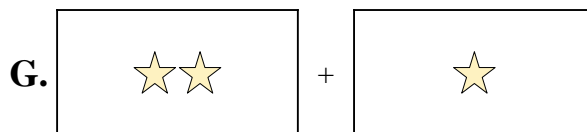
5)  $2 + 5$



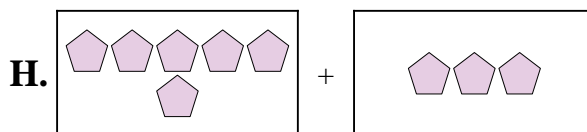
6)  $8 + 8$



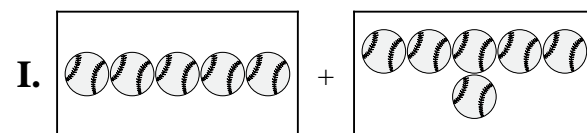
7)  $2 + 9$



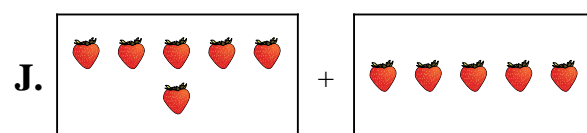
8)  $5 + 6$



9)  $2 + 3$



10)  $2 + 1$



1. \_\_\_\_\_

2. \_\_\_\_\_

3. \_\_\_\_\_

4. \_\_\_\_\_

5. \_\_\_\_\_

6. \_\_\_\_\_

7. \_\_\_\_\_

8. \_\_\_\_\_

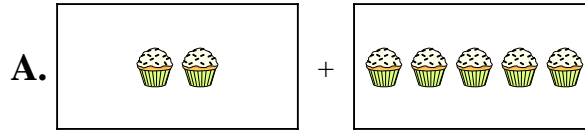
9. \_\_\_\_\_

10. \_\_\_\_\_

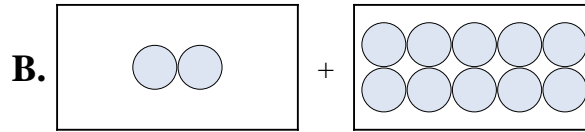


Ordne jeder Additionsgleichung den bildlichen Gegenwert zu.

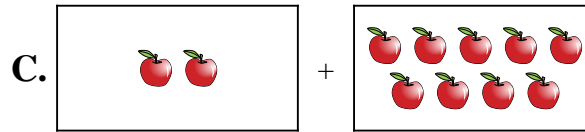
1)  $6 + 5$



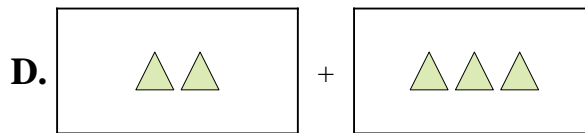
2)  $2 + 10$



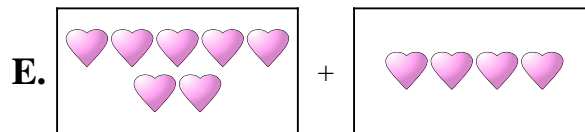
3)  $7 + 4$



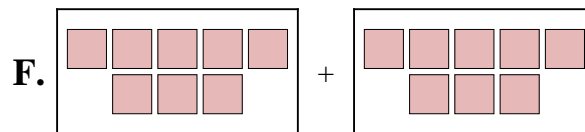
4)  $6 + 3$



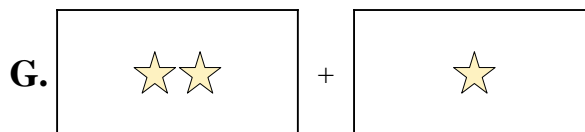
5)  $2 + 5$



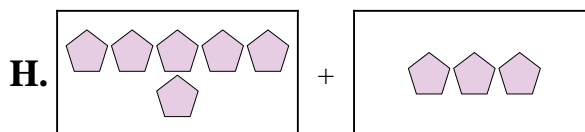
6)  $8 + 8$



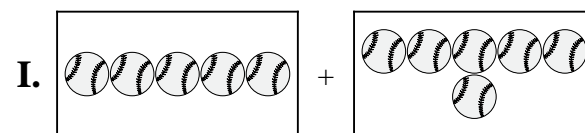
7)  $2 + 9$



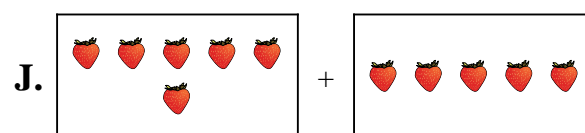
8)  $5 + 6$



9)  $2 + 3$



10)  $2 + 1$



**Antworten**

1. **J**

2. **B**

3. **E**

4. **H**

5. **A**

6. **F**

7. **C**

8. **I**

9. **D**

10. **G**