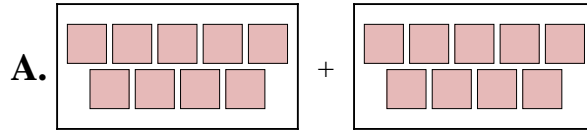




Ordne jeder Additionsgleichung den bildlichen Gegenwert zu.


**Antworten**

1)  $1 + 7$



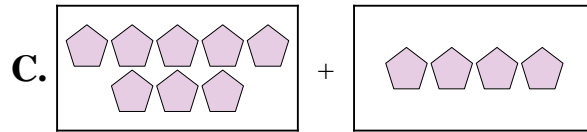
1. \_\_\_\_\_

2)  $1 + 1$



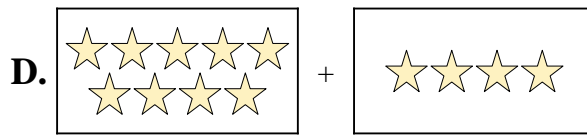
2. \_\_\_\_\_

3)  $10 + 7$



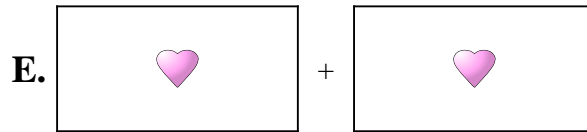
3. \_\_\_\_\_

4)  $1 + 3$



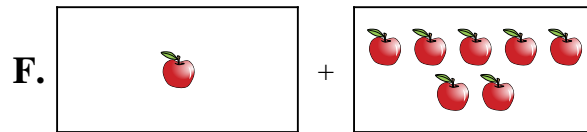
4. \_\_\_\_\_

5)  $9 + 8$



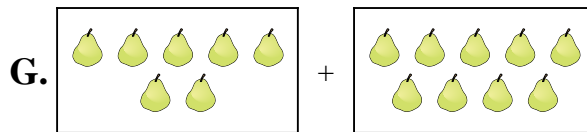
5. \_\_\_\_\_

6)  $7 + 9$



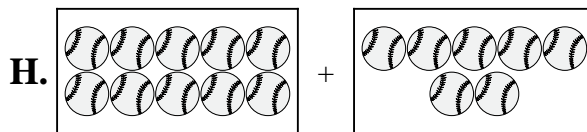
6. \_\_\_\_\_

7)  $9 + 4$



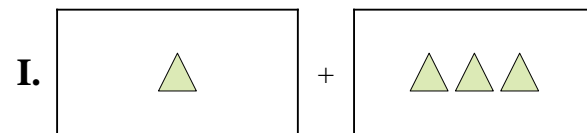
7. \_\_\_\_\_

8)  $9 + 9$




8. \_\_\_\_\_

9)  $8 + 4$



9. \_\_\_\_\_

10)  $7 + 7$

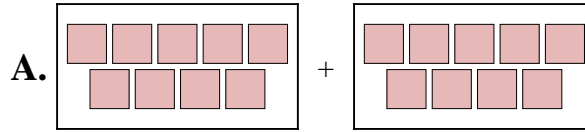


10. \_\_\_\_\_




Ordne jeder Additionsgleichung den bildlichen Gegenwert zu.

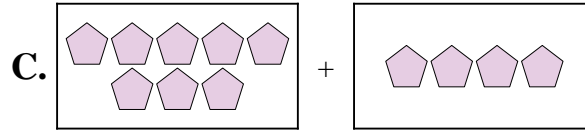
1)  $1 + 7$



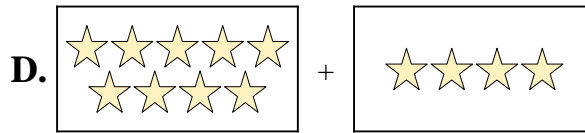
2)  $1 + 1$



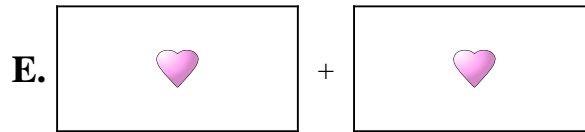
3)  $10 + 7$



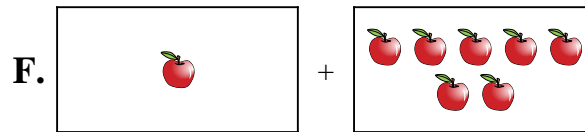
4)  $1 + 3$



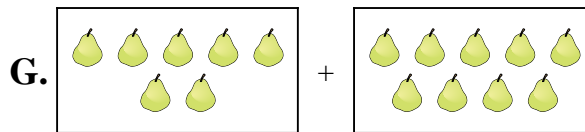
5)  $9 + 8$



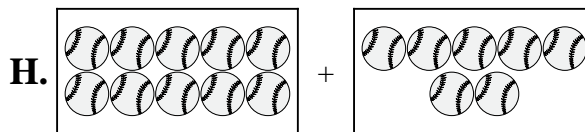
6)  $7 + 9$



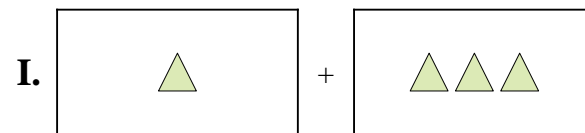
7)  $9 + 4$




8)  $9 + 9$



9)  $8 + 4$



10)  $7 + 7$



**Antworten**

1.     **F**    

2.     **E**    

3.     **H**    

4.     **I**    

5.     **J**    

6.     **G**    

7.     **D**    

8.     **A**    

9.     **C**    

10.     **B**