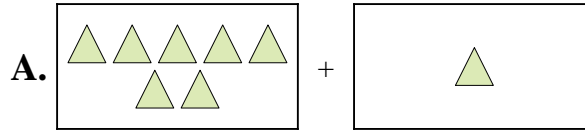




Ordne jeder Additions Gleichung den bildlichen Gegenwert zu.

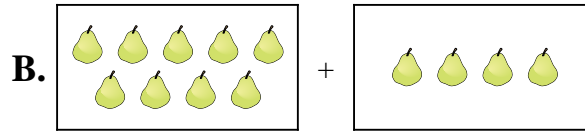
**Antworten**

1)  $7 + 7$



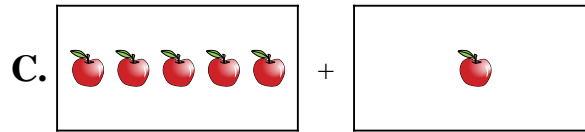
1. \_\_\_\_\_

2)  $7 + 1$




2. \_\_\_\_\_

3)  $10 + 4$




3. \_\_\_\_\_

4)  $3 + 6$



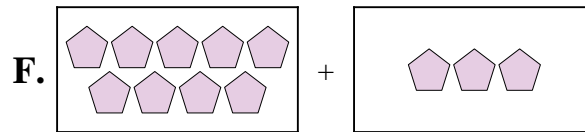
4. \_\_\_\_\_

5)  $1 + 10$



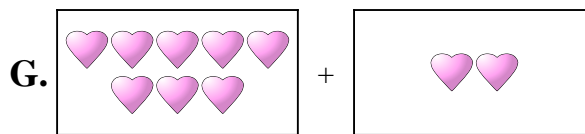
5. \_\_\_\_\_

6)  $5 + 1$



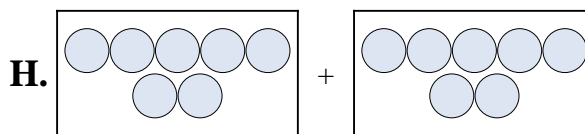
6. \_\_\_\_\_

7)  $9 + 4$



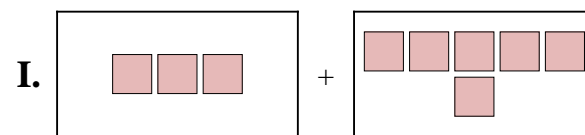
7. \_\_\_\_\_

8)  $9 + 3$



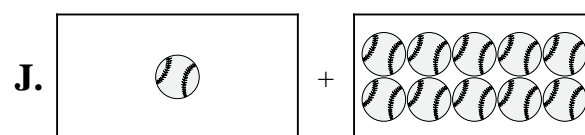
8. \_\_\_\_\_

9)  $8 + 2$



9. \_\_\_\_\_

10)  $5 + 4$

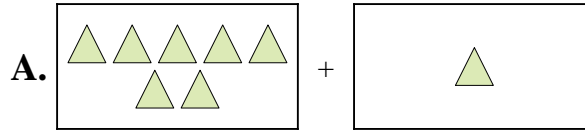


10. \_\_\_\_\_

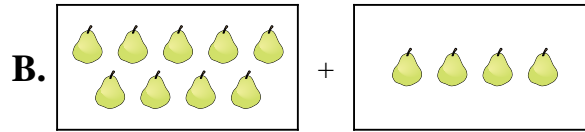


Ordne jeder Additions Gleichung den bildlichen Gegenwert zu.

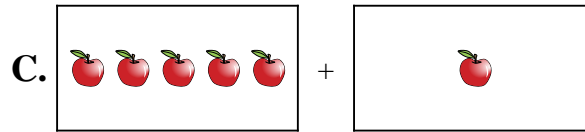
1)  $7 + 7$




2)  $7 + 1$




3)  $10 + 4$



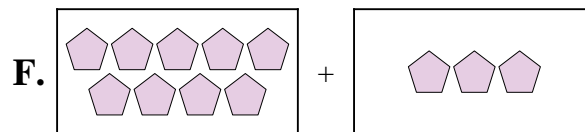
4)  $3 + 6$



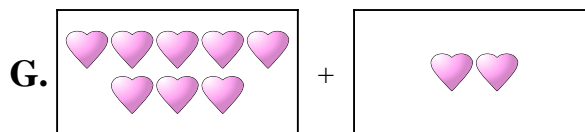
5)  $1 + 10$



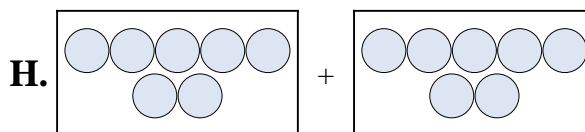
6)  $5 + 1$



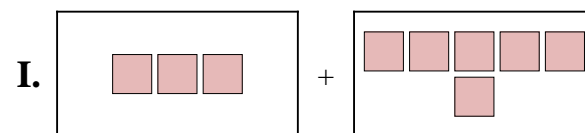
7)  $9 + 4$



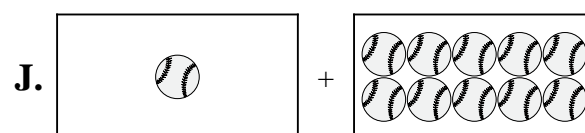
8)  $9 + 3$



9)  $8 + 2$



10)  $5 + 4$



**Antworten**

1.   **H**  

2.   **A**  

3.   **D**  

4.   **I**  

5.   **J**  

6.   **C**  

7.   **B**  

8.   **F**  

9.   **G**  

10.   **E**