




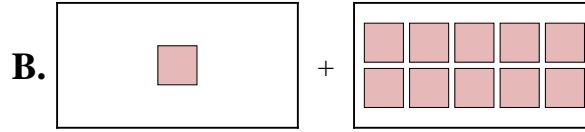
Ordne jeder Additionsgleichung den bildlichen Gegenwert zu.

Antworten


1) $3 + 10$



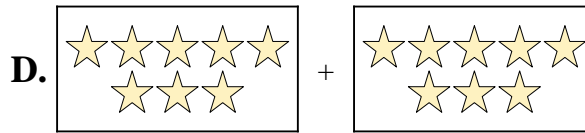
2) $8 + 10$



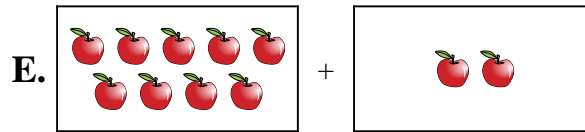
3) $5 + 3$



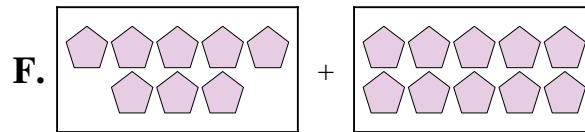
4) $8 + 1$



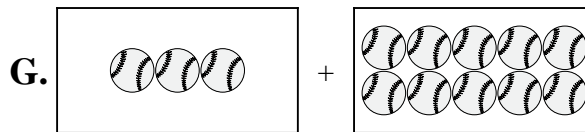
5) $9 + 2$



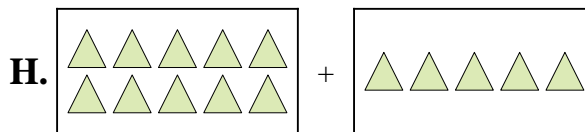
6) $7 + 6$



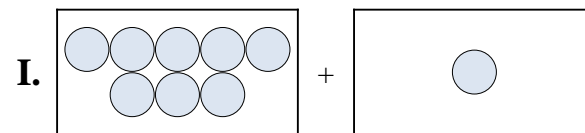
7) $10 + 5$



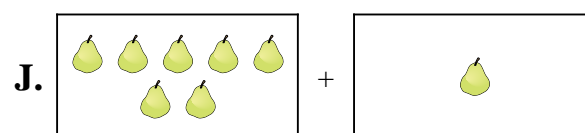
8) $8 + 8$



9) $1 + 10$



10) $7 + 1$




1. _____
2. _____
3. _____
4. _____
5. _____
6. _____
7. _____
8. _____
9. _____
10. _____

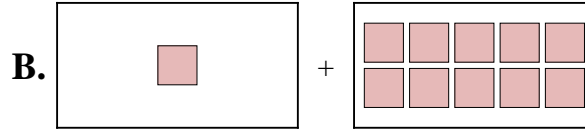


Ordne jeder Additionsgleichung den bildlichen Gegenwert zu.


1) $3 + 10$



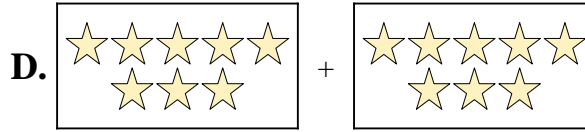
2) $8 + 10$



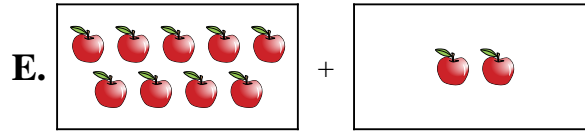
3) $5 + 3$



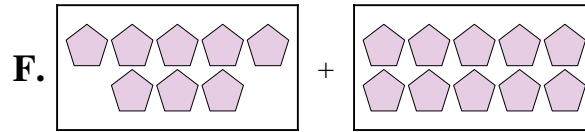
4) $8 + 1$



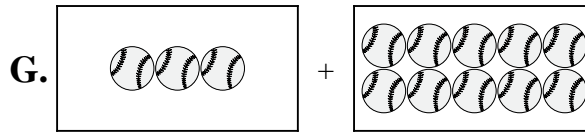
5) $9 + 2$



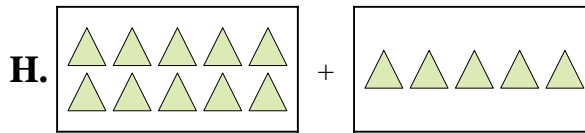
6) $7 + 6$



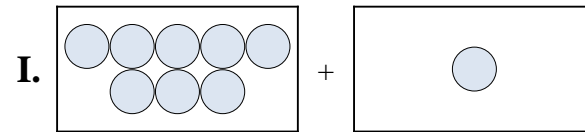
7) $10 + 5$



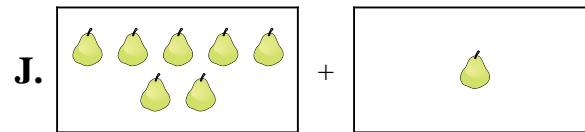
8) $8 + 8$



9) $1 + 10$



10) $7 + 1$



Antworten

1. **G**

2. **F**

3. **A**

4. **I**

5. **E**

6. **C**

7. **H**

8. **D**

9. **B**

10. **J**