




Ordne jeder Additionsleichung den bildlichen Gegenwert zu.

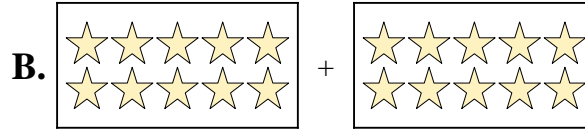
Antworten

1) $5 + 7$



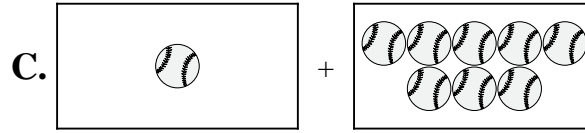
1. _____

2) $3 + 8$



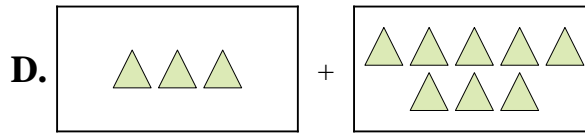
2. _____

3) $1 + 8$



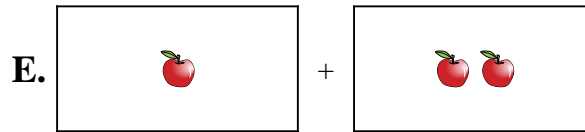
3. _____

4) $2 + 9$



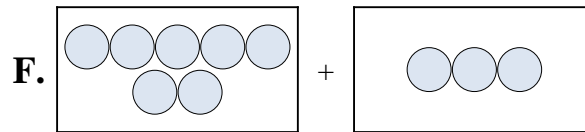
4. _____

5) $4 + 4$




5. _____

6) $5 + 3$



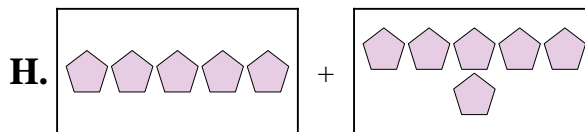
6. _____

7) $10 + 10$



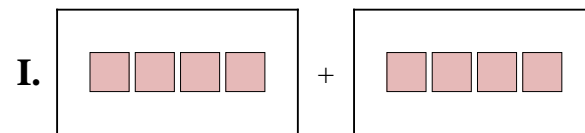
7. _____

8) $1 + 2$



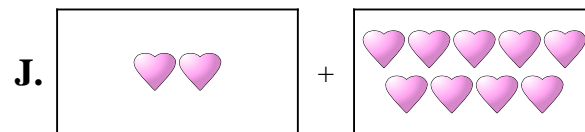
8. _____

9) $5 + 6$



9. _____

10) $7 + 3$




10. _____

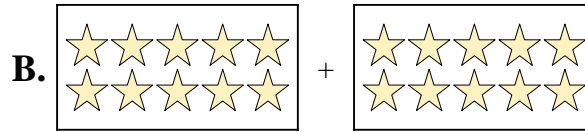


Ordne jeder Additionsgleichung den bildlichen Gegenwert zu.

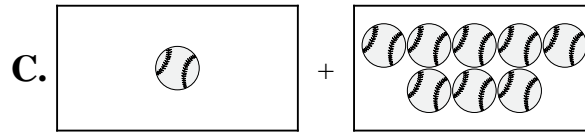
1) $5 + 7$



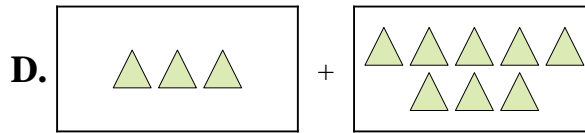
2) $3 + 8$



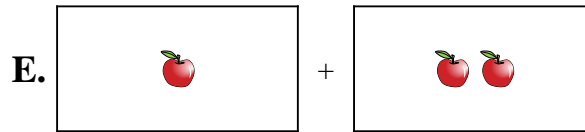
3) $1 + 8$



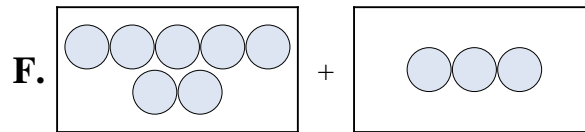
4) $2 + 9$




5) $4 + 4$



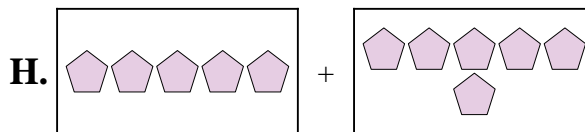
6) $5 + 3$



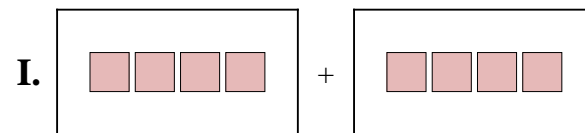
7) $10 + 10$



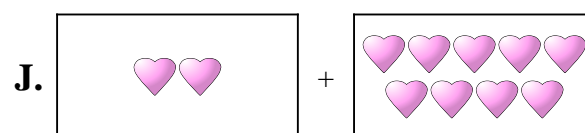
8) $1 + 2$



9) $5 + 6$



10) $7 + 3$



Antworten

- 1. **G**
- 2. **D**
- 3. **C**
- 4. **J**
- 5. **I**
- 6. **A**
- 7. **B**
- 8. **E**
- 9. **H**
- 10. **F**