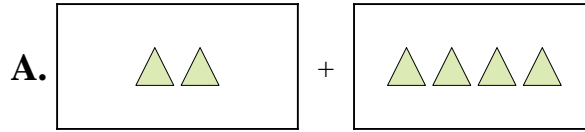




Ordne jeder Additionsgleichung den bildlichen Gegenwert zu.

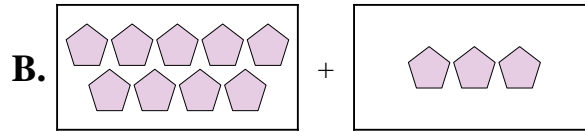
Antworten

1) $2 + 4$



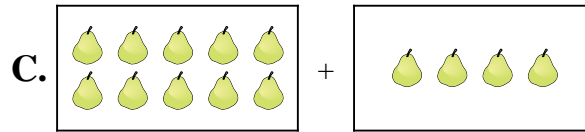
1. _____

2) $7 + 1$



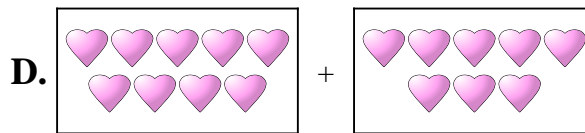
2. _____

3) $9 + 8$




3. _____

4) $4 + 6$



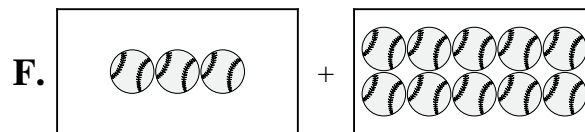
4. _____

5) $2 + 3$



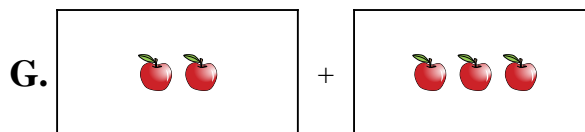
5. _____

6) $2 + 8$



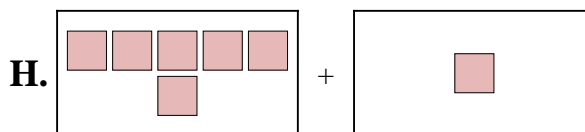
6. _____

7) $9 + 3$



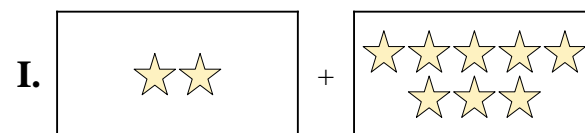
7. _____

8) $3 + 10$



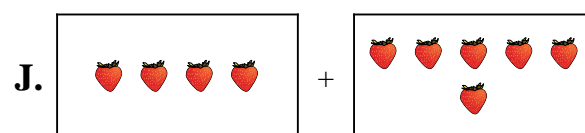
8. _____

9) $6 + 1$



9. _____

10) $10 + 4$

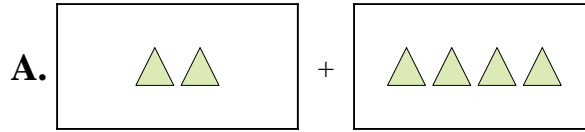


10. _____

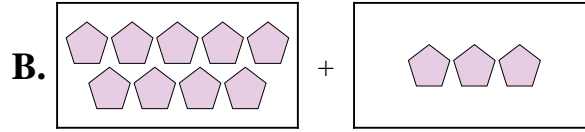


Ordne jeder Additions Gleichung den bildlichen Gegenwert zu.

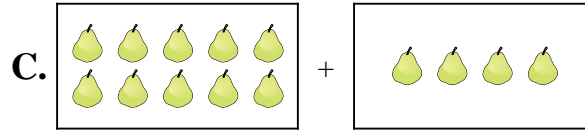
1) $2 + 4$



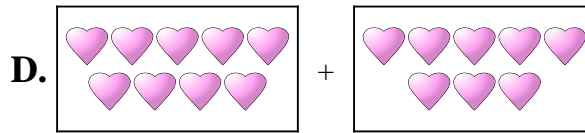
2) $7 + 1$




3) $9 + 8$



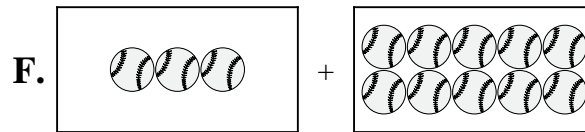
4) $4 + 6$



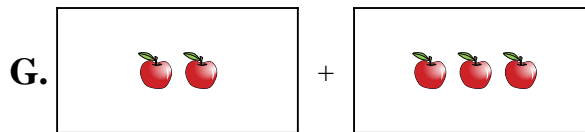
5) $2 + 3$



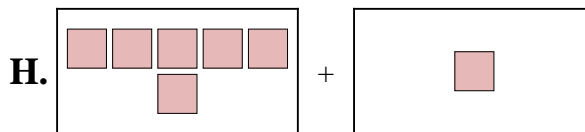
6) $2 + 8$



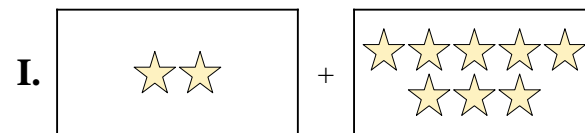
7) $9 + 3$



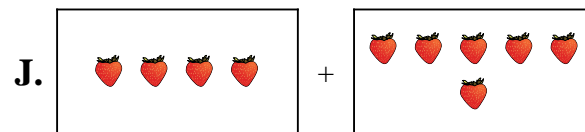
8) $3 + 10$



9) $6 + 1$



10) $10 + 4$



Antworten

1. **A**

2. **E**

3. **D**

4. **J**

5. **G**

6. **I**

7. **B**

8. **F**

9. **H**

10. **C**