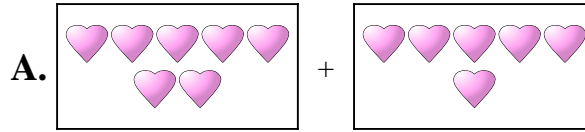




Ordne jeder Additionsgleichung den bildlichen Gegenwert zu.

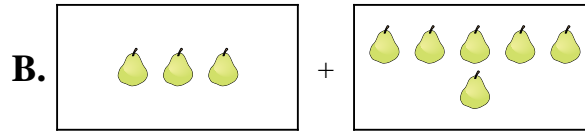
Antworten

1) $6 + 4$




1. _____

2) $3 + 1$



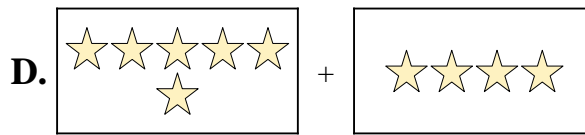
2. _____

3) $10 + 7$



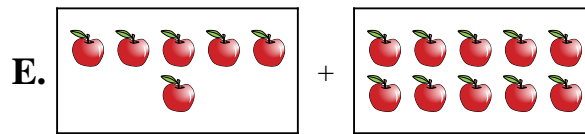
3. _____

4) $9 + 2$



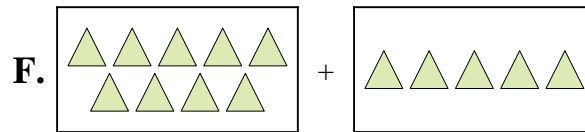
4. _____

5) $7 + 6$




5. _____

6) $10 + 5$



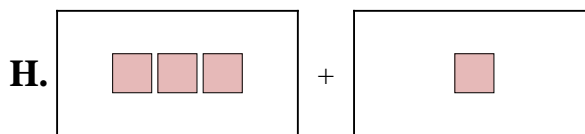
6. _____

7) $6 + 10$



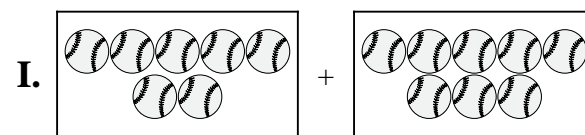
7. _____

8) $3 + 6$



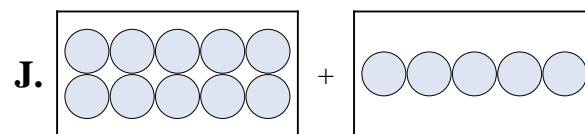
8. _____

9) $9 + 5$



9. _____

10) $7 + 8$

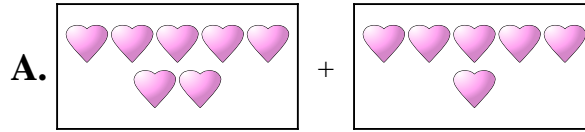


10. _____

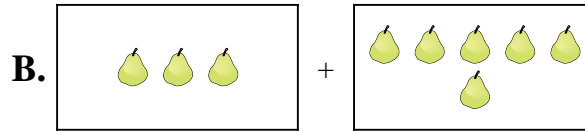


Ordne jeder Additions Gleichung den bildlichen Gegenwert zu.


1) $6 + 4$



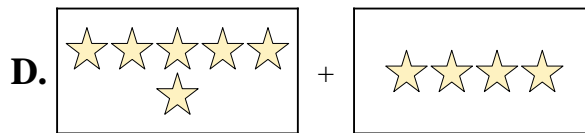
2) $3 + 1$



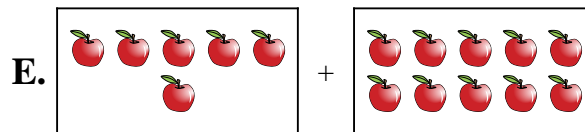
3) $10 + 7$



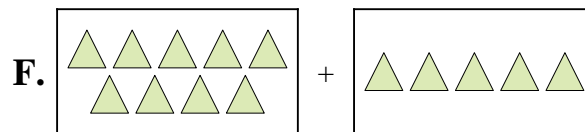
4) $9 + 2$




5) $7 + 6$



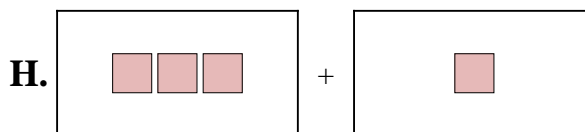
6) $10 + 5$



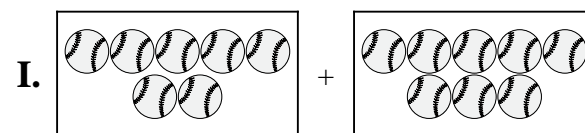
7) $6 + 10$



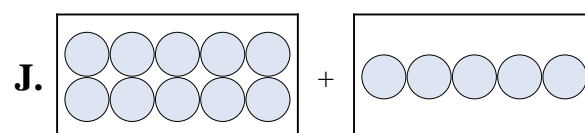
8) $3 + 6$



9) $9 + 5$



10) $7 + 8$



Antworten

1. **D**

2. **H**

3. **C**

4. **G**

5. **A**

6. **J**

7. **E**

8. **B**

9. **F**

10. **I**