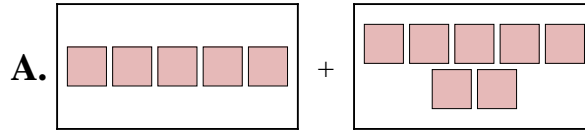




Ordne jeder Additionsgleichung den bildlichen Gegenwert zu.

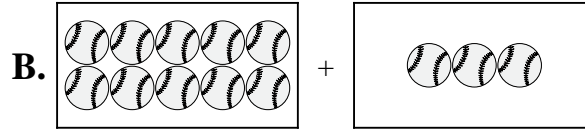
Antworten

1) $5 + 7$



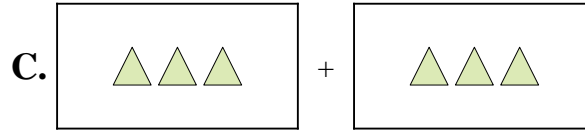
1. _____

2) $3 + 9$



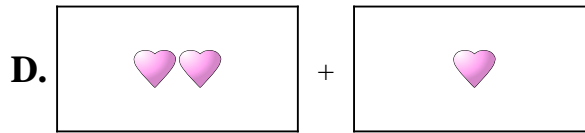
2. _____

3) $5 + 6$



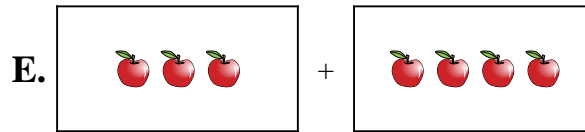
3. _____

4) $2 + 10$



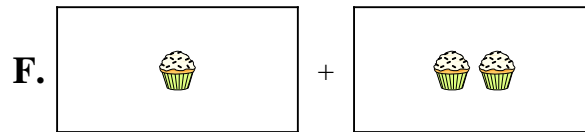
4. _____

5) $1 + 2$



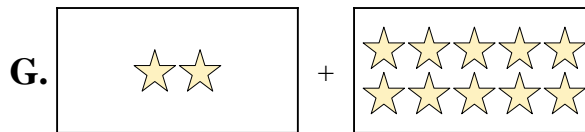
5. _____

6) $3 + 4$



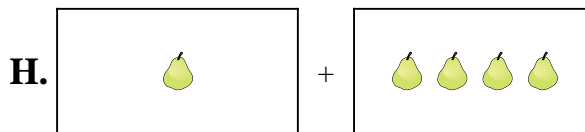
6. _____

7) $10 + 3$



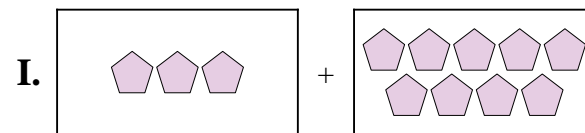
7. _____

8) $1 + 4$




8. _____

9) $2 + 1$



9. _____

10) $3 + 3$

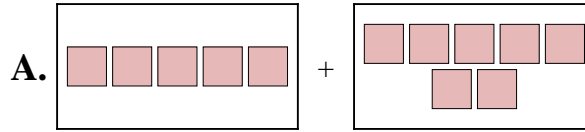


10. _____

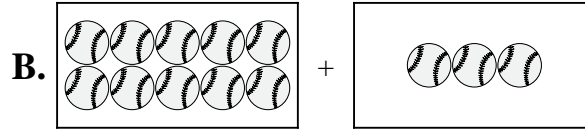


Ordne jeder Additionsgleichung den bildlichen Gegenwert zu.

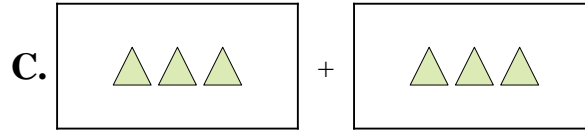
1) $5 + 7$



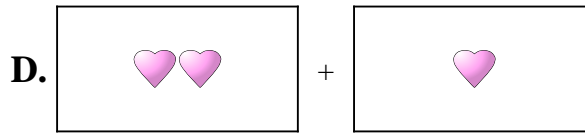
2) $3 + 9$



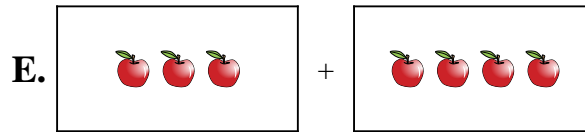
3) $5 + 6$



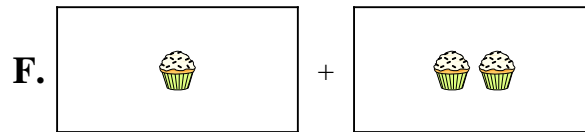
4) $2 + 10$



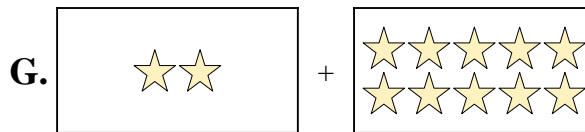
5) $1 + 2$



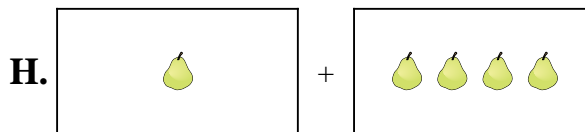
6) $3 + 4$



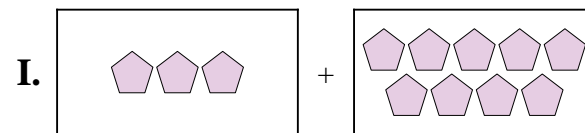
7) $10 + 3$




8) $1 + 4$



9) $2 + 1$



10) $3 + 3$



Antworten

- 1. **A**
- 2. **I**
- 3. **J**
- 4. **G**
- 5. **F**
- 6. **E**
- 7. **B**
- 8. **H**
- 9. **D**
- 10. **C**