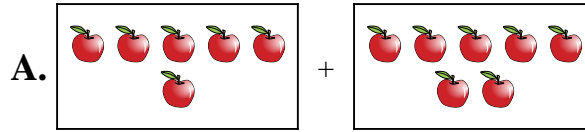




Ordne jeder Additions Gleichung den bildlichen Gegenwert zu.

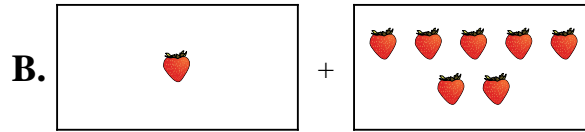
Antworten

1) $6 + 2$



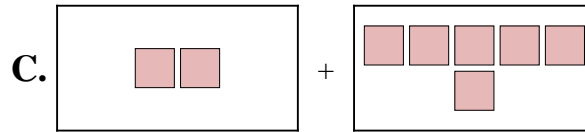
1. _____

2) $5 + 7$



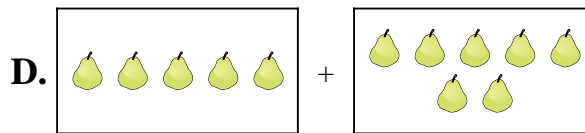
2. _____

3) $4 + 6$



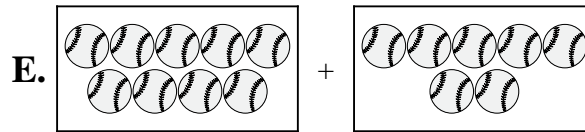
3. _____

4) $4 + 1$



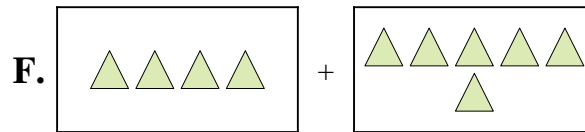
4. _____

5) $2 + 6$



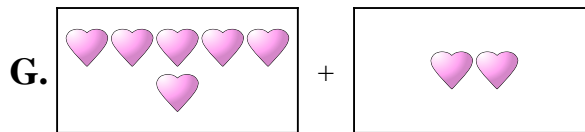
5. _____

6) $1 + 7$



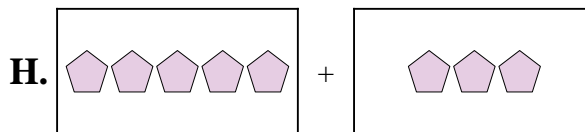
6. _____

7) $6 + 7$



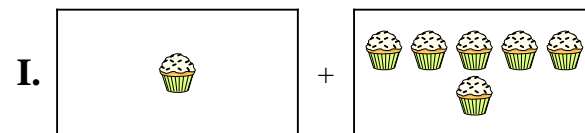
7. _____

8) $1 + 6$



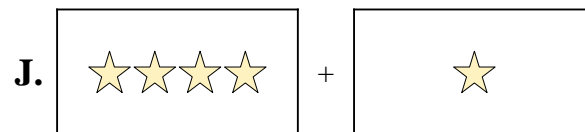
8. _____

9) $9 + 7$



9. _____

10) $5 + 3$

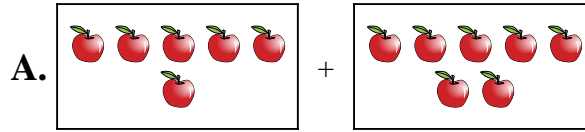


10. _____

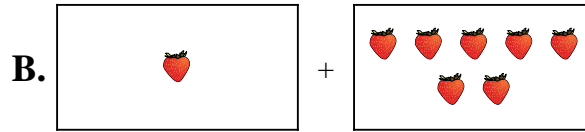


Ordne jeder Additions Gleichung den bildlichen Gegenwert zu.

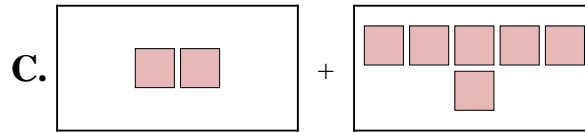
1) $6 + 2$



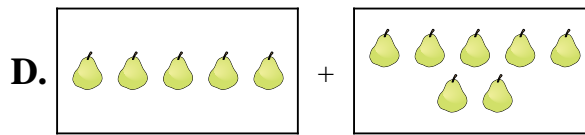
2) $5 + 7$



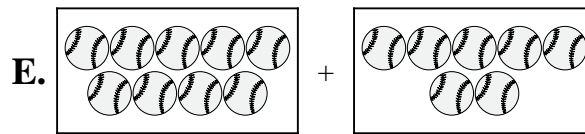
3) $4 + 6$



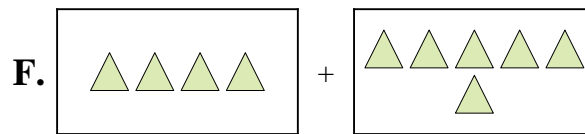
4) $4 + 1$



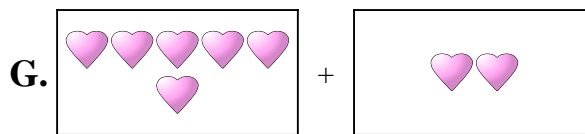
5) $2 + 6$



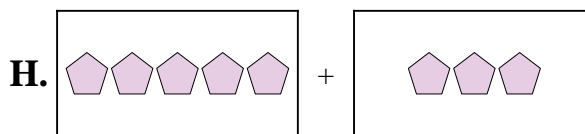
6) $1 + 7$



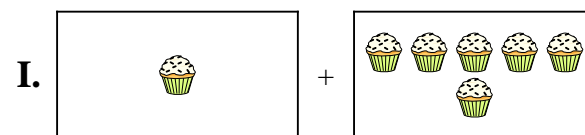
7) $6 + 7$



8) $1 + 6$



9) $9 + 7$



10) $5 + 3$



Antworten

1. **G**

2. **D**

3. **F**

4. **J**

5. **C**

6. **B**

7. **A**

8. **I**

9. **E**

10. **H**