



Löse jede Aufgabe.

1) $3 + 0 = \underline{\quad}$

2) $1 + 0 = \underline{\quad}$

3) $2 + 2 = \underline{\quad}$

4) $1 + 4 = \underline{\quad}$

5) $1 + 3 = \underline{\quad}$

6) $3 + 1 = \underline{\quad}$

7) $1 + 2 = \underline{\quad}$

8) $4 + 0 = \underline{\quad}$

9) $4 - 4 = \underline{\quad}$

10) $4 - 3 = \underline{\quad}$

11) $4 - 1 = \underline{\quad}$

12) $2 - 1 = \underline{\quad}$

13) $5 - 5 = \underline{\quad}$

14) $3 - 2 = \underline{\quad}$

15) $1 - 0 = \underline{\quad}$

16) $3 - 1 = \underline{\quad}$

Antworten

1. _____

2. _____

3. _____

4. _____

5. _____

6. _____

7. _____

8. _____

9. _____

10. _____

11. _____

12. _____

13. _____

14. _____

15. _____

16. _____



Löse jede Aufgabe.

1) $3 + 0 = \underline{3}$

2) $1 + 0 = \underline{1}$

3) $2 + 2 = \underline{4}$

4) $1 + 4 = \underline{5}$

5) $1 + 3 = \underline{4}$

6) $3 + 1 = \underline{4}$

7) $1 + 2 = \underline{3}$

8) $4 + 0 = \underline{4}$

9) $4 - 4 = \underline{0}$

10) $4 - 3 = \underline{1}$

11) $4 - 1 = \underline{3}$

12) $2 - 1 = \underline{1}$

13) $5 - 5 = \underline{0}$

14) $3 - 2 = \underline{1}$


15) $1 - 0 = \underline{1}$


16) $3 - 1 = \underline{2}$



Antworten1. 32. 13. 44. 55. 46. 47. 38. 49. 010. 111. 312. 113. 014. 115. 116. 2







Löse jede Aufgabe.



1) $3 + 0 = \underline{\quad}$




2) $1 + 0 = \underline{\quad}$



3) $2 + 2 = \underline{\quad}$
 + 


4) $1 + 4 = \underline{\quad}$
 + 



5) $1 + 3 = \underline{\quad}$
 + 



6) $3 + 1 = \underline{\quad}$
 + 



7) $1 + 2 = \underline{\quad}$
 + 



8) $4 + 0 = \underline{\quad}$




9) $4 - 4 = \underline{\quad}$
 - 


10) $4 - 3 = \underline{\quad}$
 - 


11) $4 - 1 = \underline{\quad}$
 - 

12) $2 - 1 = \underline{\quad}$
 - 

13) $5 - 5 = \underline{\quad}$
 - 

14) $3 - 2 = \underline{\quad}$
 - 

15) $1 - 0 = \underline{\quad}$


16) $3 - 1 = \underline{\quad}$


Antworten

1. _____

2. _____

3. _____

4. _____

5. _____

6. _____

7. _____

8. _____

9. _____

10. _____

11. _____

12. _____

13. _____

14. _____

15. _____

16. _____