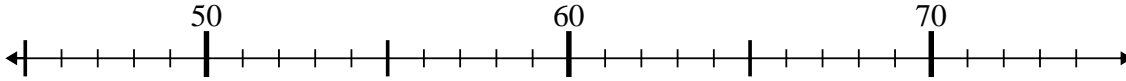




Benutze den Zahlenstrahl um jede Aufgabe zu lösen.

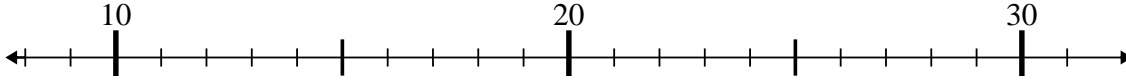
**Antworten**

1)  $50 - 3 = ?$



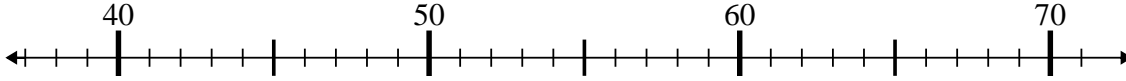
1. \_\_\_\_\_

2)  $21 - 4 = ?$



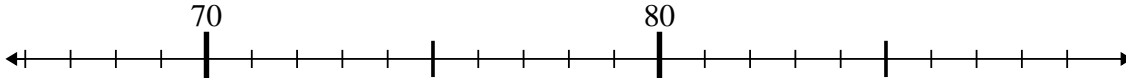
2. \_\_\_\_\_

3)  $63 + 7 = ?$



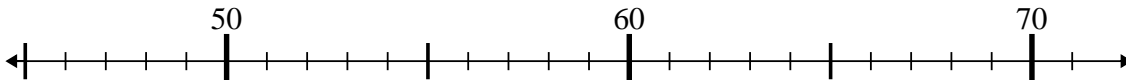
3. \_\_\_\_\_

4)  $87 - 8 = ?$



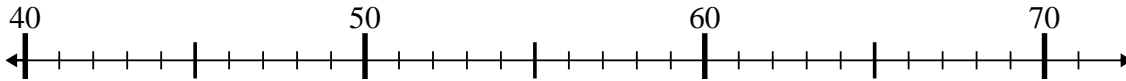
4. \_\_\_\_\_

5)  $47 + 5 = ?$



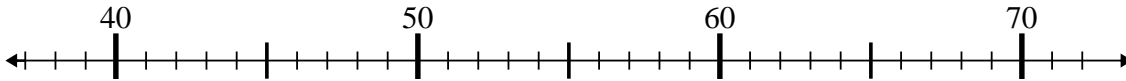
5. \_\_\_\_\_

6)  $40 + 11 = ?$



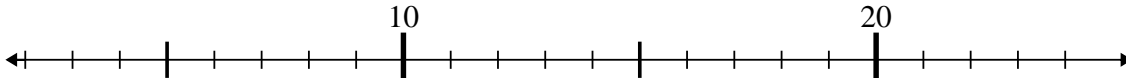
6. \_\_\_\_\_

7)  $51 - 2 = ?$



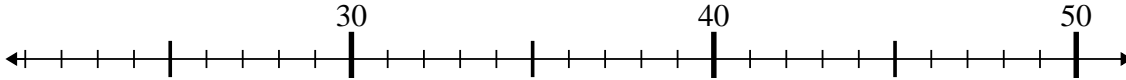
7. \_\_\_\_\_

8)  $7 - 2 = ?$



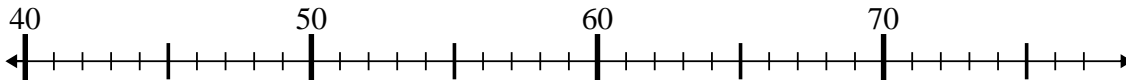
8. \_\_\_\_\_

9)  $32 - 6 = ?$



9. \_\_\_\_\_

10)  $67 + 9 = ?$



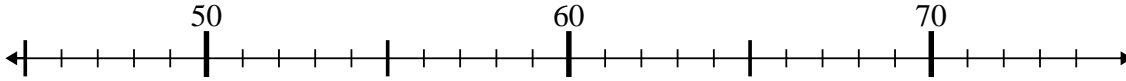
10. \_\_\_\_\_



Benutze den Zahlenstrahl um jede Aufgabe zu lösen.

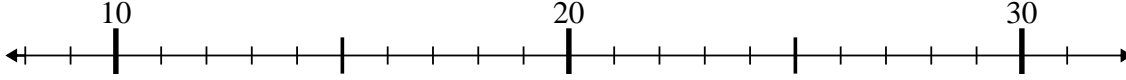
**Antworten**

1)  $50 - 3 = ?$



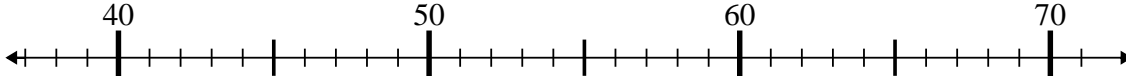
1. 47

2)  $21 - 4 = ?$



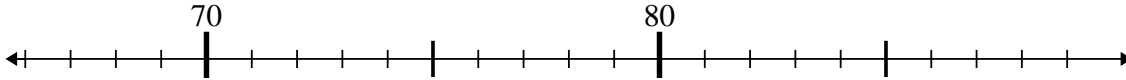
2. 17

3)  $63 + 7 = ?$



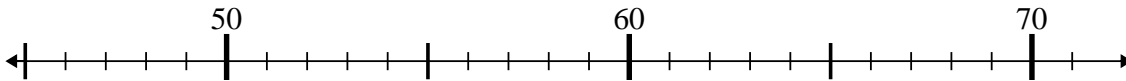
3. 70

4)  $87 - 8 = ?$



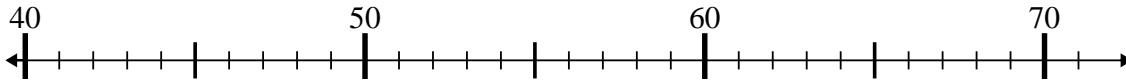
4. 79

5)  $47 + 5 = ?$



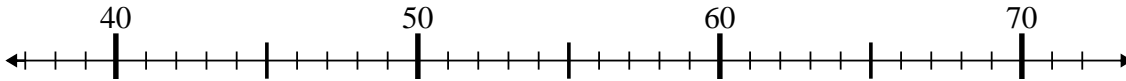
5. 52

6)  $40 + 11 = ?$



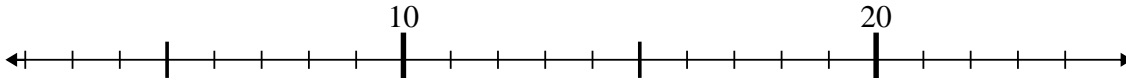
6. 51

7)  $51 - 2 = ?$



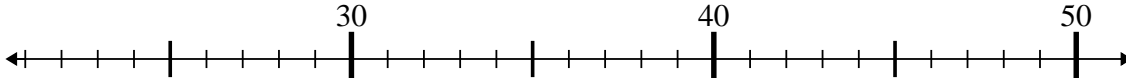
7. 49

8)  $7 - 2 = ?$



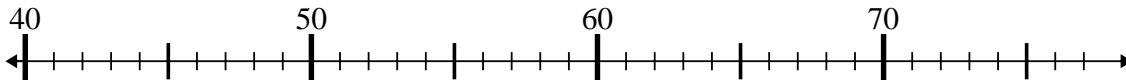
8. 5

9)  $32 - 6 = ?$



9. 26

10)  $67 + 9 = ?$



10. 76