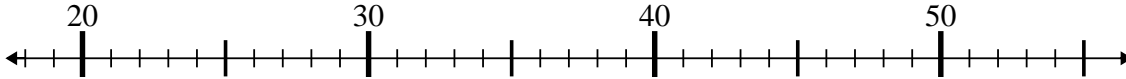




Benutze den Zahlenstrahl um jede Aufgabe zu lösen.

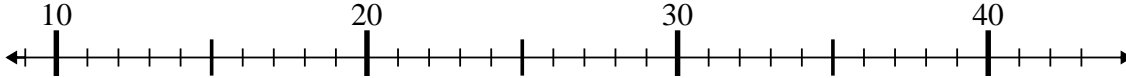
Antworten

1) $45 - 23 = ?$



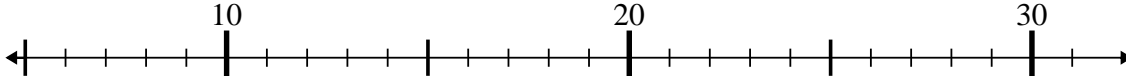
1. _____

2) $16 + 5 = ?$



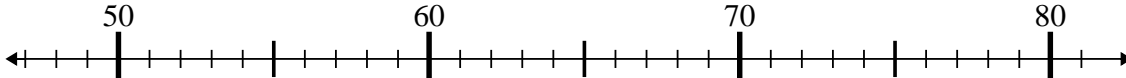
2. _____

3) $29 - 5 = ?$



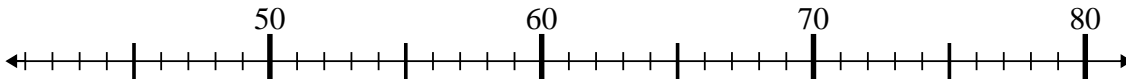
3. _____

4) $81 - 26 = ?$



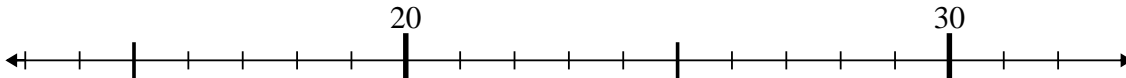
4. _____

5) $63 - 17 = ?$



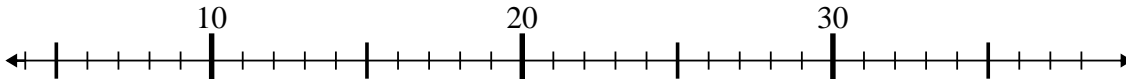
5. _____

6) $20 - 6 = ?$



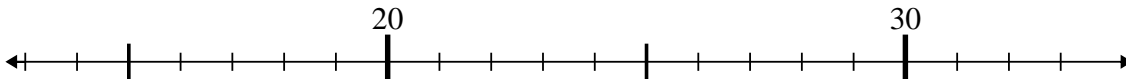
6. _____

7) $35 - 18 = ?$



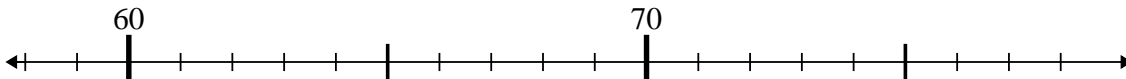
7. _____

8) $17 + 7 = ?$



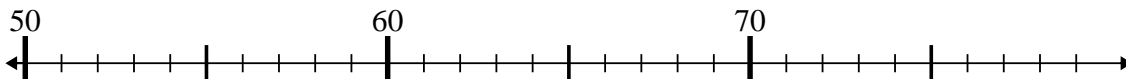
8. _____

9) $76 - 0 = ?$



9. _____

10) $55 + 5 = ?$



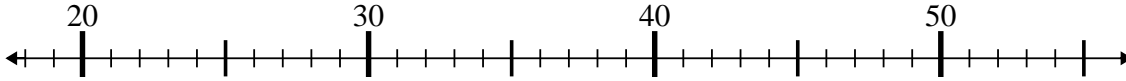
10. _____



Benutze den Zahlenstrahl um jede Aufgabe zu lösen.

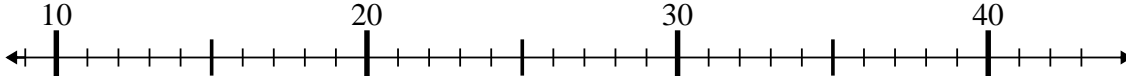
Antworten

1) $45 - 23 = ?$



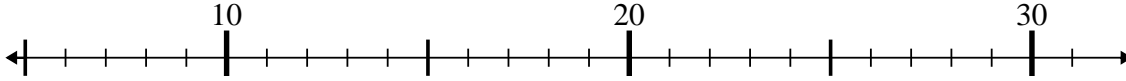
1. 22

2) $16 + 5 = ?$



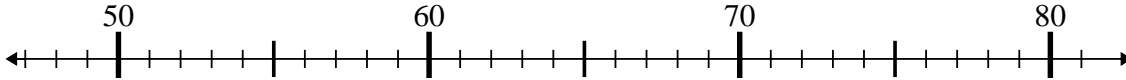
2. 21

3) $29 - 5 = ?$



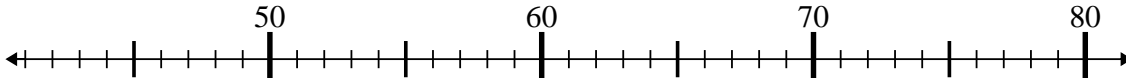
3. 24

4) $81 - 26 = ?$



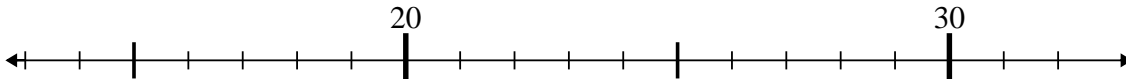
4. 55

5) $63 - 17 = ?$



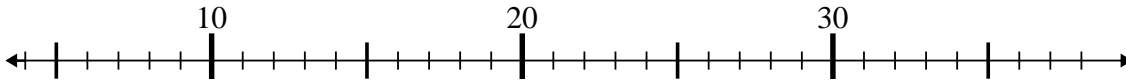
5. 46

6) $20 - 6 = ?$



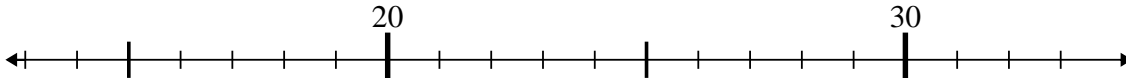
6. 14

7) $35 - 18 = ?$



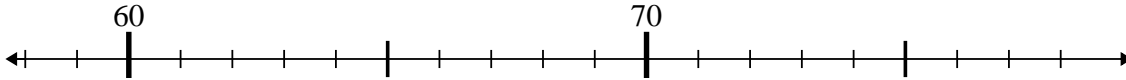
7. 17

8) $17 + 7 = ?$



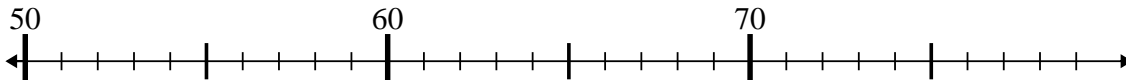
8. 24

9) $76 - 0 = ?$



9. 76

10) $55 + 5 = ?$



10. 60