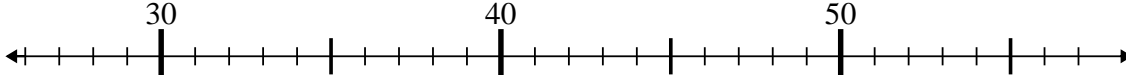




Benutze den Zahlenstrahl um jede Aufgabe zu lösen.

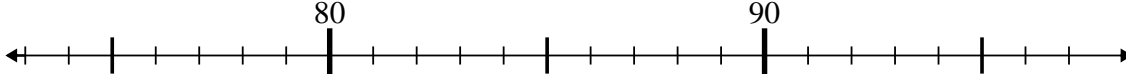
Antworten

1) $37 - 1 = ?$



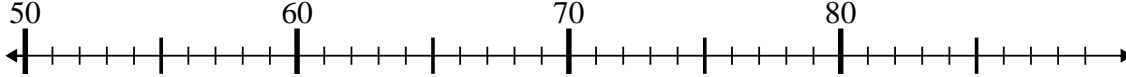
1. _____

2) $91 - 17 = ?$



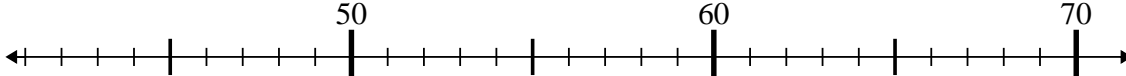
2. _____

3) $66 - 0 = ?$



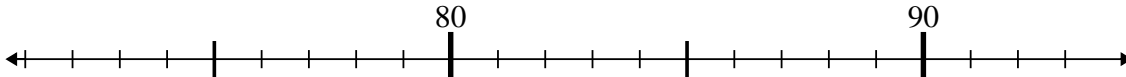
3. _____

4) $49 + 3 = ?$



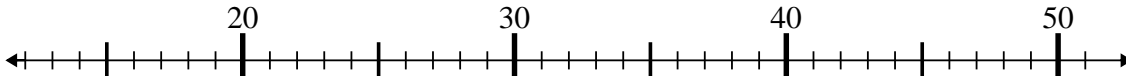
4. _____

5) $76 + 2 = ?$



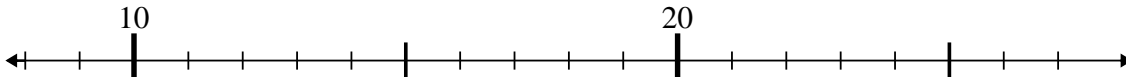
5. _____

6) $24 - 9 = ?$



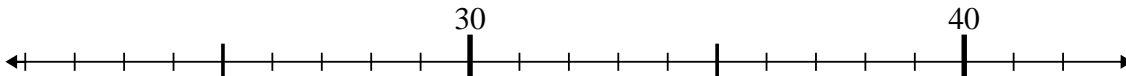
6. _____

7) $26 - 8 = ?$



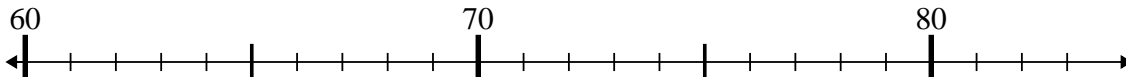
7. _____

8) $34 + 1 = ?$



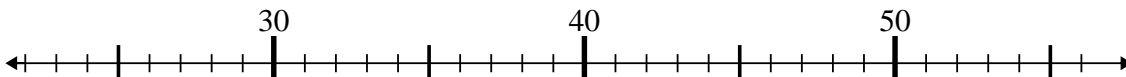
8. _____

9) $72 + 3 = ?$



9. _____

10) $32 + 8 = ?$



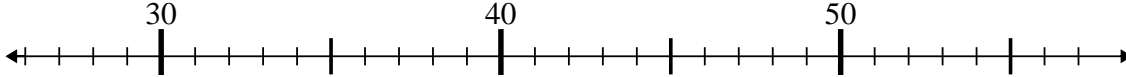
10. _____



Benutze den Zahlenstrahl um jede Aufgabe zu lösen.

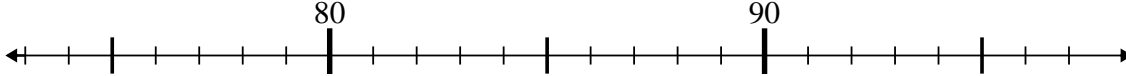
Antworten

1) $37 - 1 = ?$



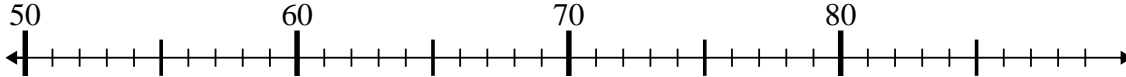
1. 36

2) $91 - 17 = ?$



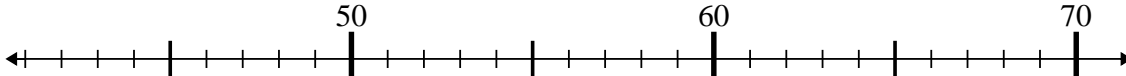
2. 74

3) $66 - 0 = ?$



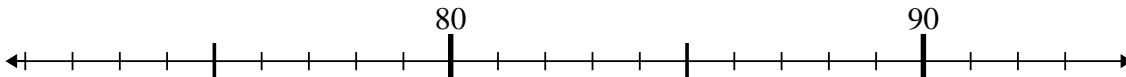
3. 66

4) $49 + 3 = ?$



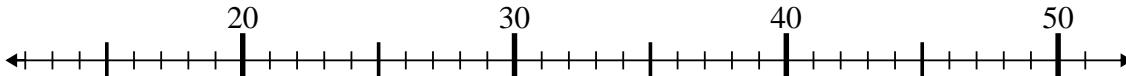
4. 52

5) $76 + 2 = ?$



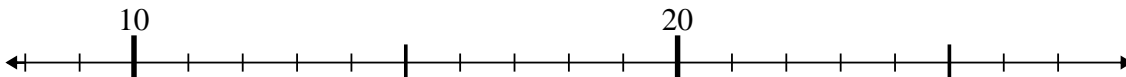
5. 78

6) $24 - 9 = ?$



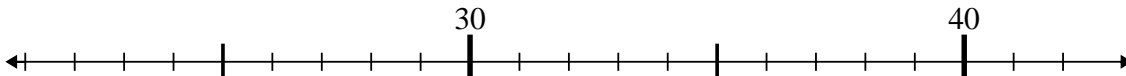
6. 15

7) $26 - 8 = ?$



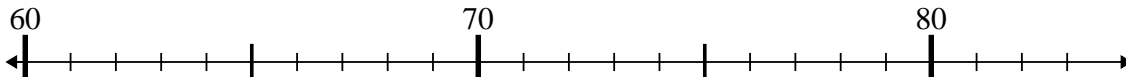
7. 18

8) $34 + 1 = ?$



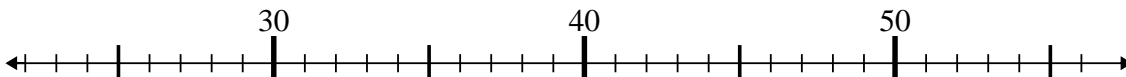
8. 35

9) $72 + 3 = ?$



9. 75

10) $32 + 8 = ?$



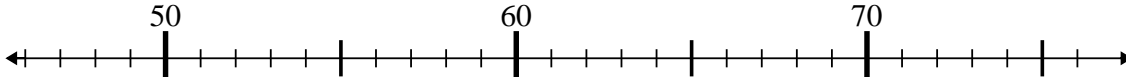
10. 40



Benutze den Zahlenstrahl um jede Aufgabe zu lösen.

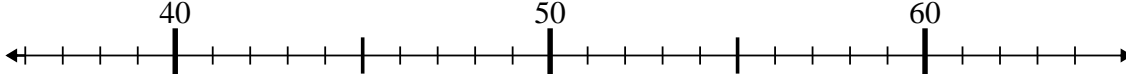
Antworten

1) $71 + 1 = ?$



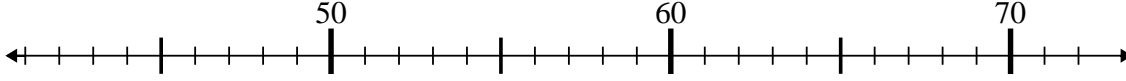
1. _____

2) $41 - 3 = ?$



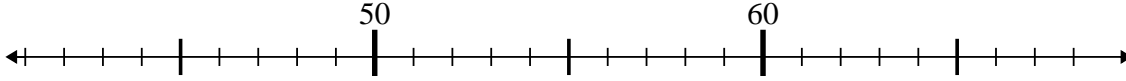
2. _____

3) $66 + 1 = ?$



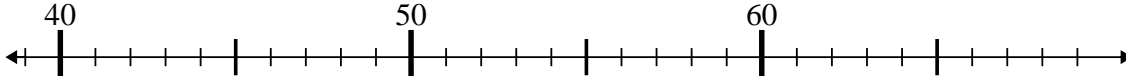
3. _____

4) $47 - 1 = ?$



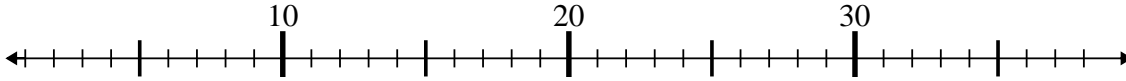
4. _____

5) $56 - 15 = ?$



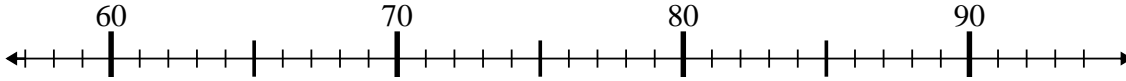
5. _____

6) $33 + 5 = ?$



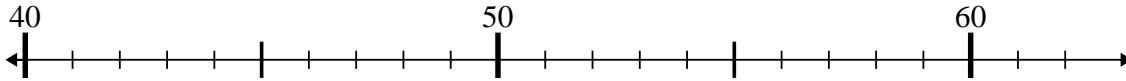
6. _____

7) $65 + 10 = ?$



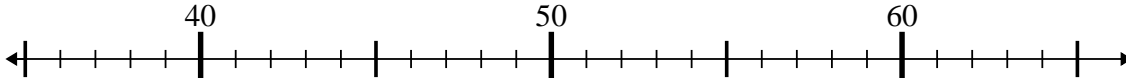
7. _____

8) $44 + 3 = ?$



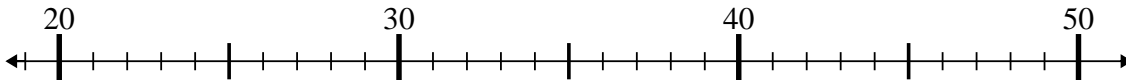
8. _____

9) $35 + 6 = ?$



9. _____

10) $21 + 19 = ?$



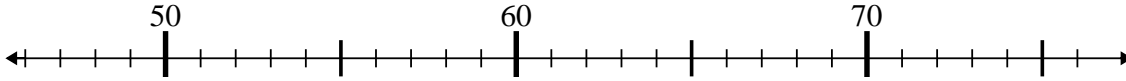
10. _____



Benutze den Zahlenstrahl um jede Aufgabe zu lösen.

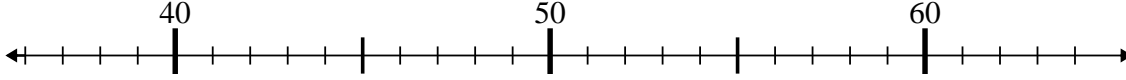
Antworten

1) $71 + 1 = ?$



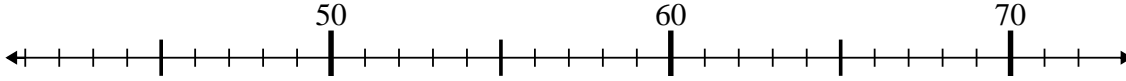
1. 72

2) $41 - 3 = ?$



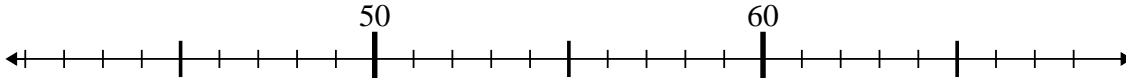
2. 38

3) $66 + 1 = ?$



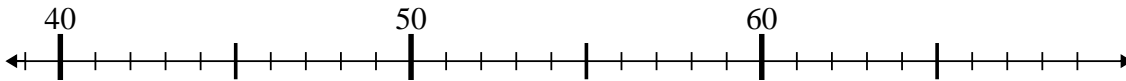
3. 67

4) $47 - 1 = ?$



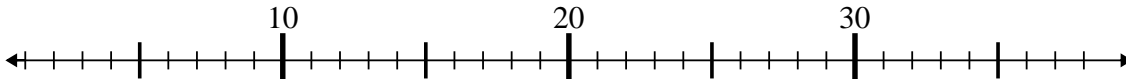
4. 46

5) $56 - 15 = ?$



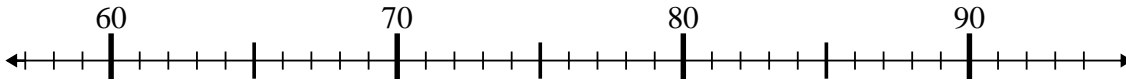
5. 41

6) $33 + 5 = ?$



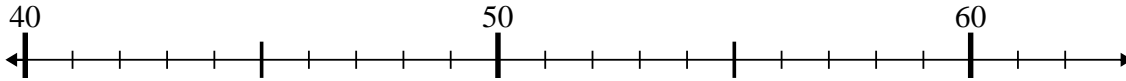
6. 38

7) $65 + 10 = ?$



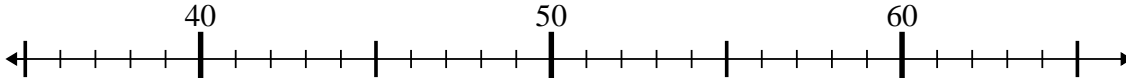
7. 75

8) $44 + 3 = ?$



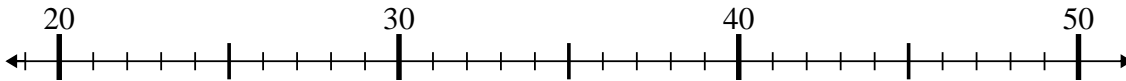
8. 47

9) $35 + 6 = ?$



9. 41

10) $21 + 19 = ?$



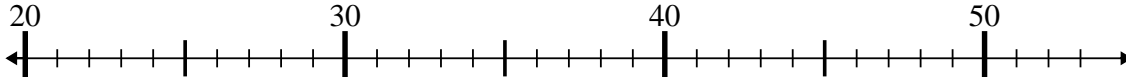
10. 40



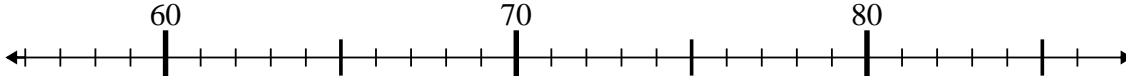
Benutze den Zahlenstrahl um jede Aufgabe zu lösen.

Antworten

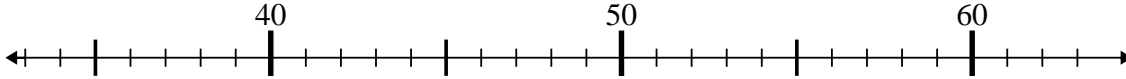
1) $21 + 5 = ?$



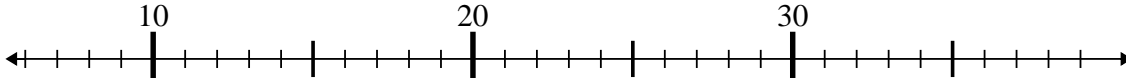
2) $79 + 0 = ?$



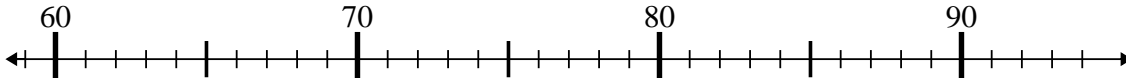
3) $62 - 23 = ?$



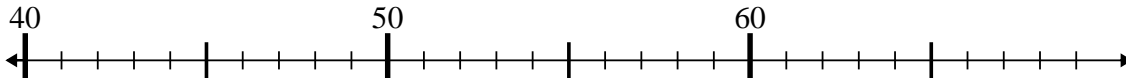
4) $13 + 2 = ?$



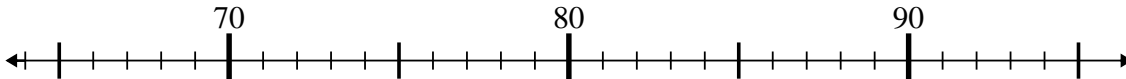
5) $64 + 0 = ?$



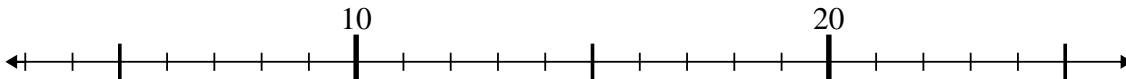
6) $63 - 10 = ?$



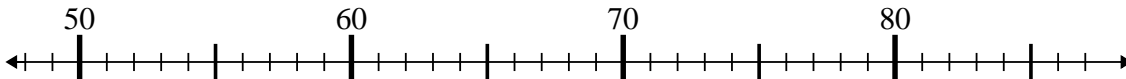
7) $76 + 15 = ?$



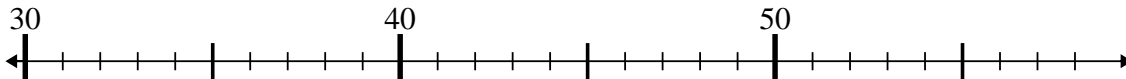
8) $13 - 2 = ?$



9) $77 - 24 = ?$



10) $56 - 1 = ?$



1. _____

2. _____

3. _____

4. _____

5. _____

6. _____

7. _____

8. _____

9. _____

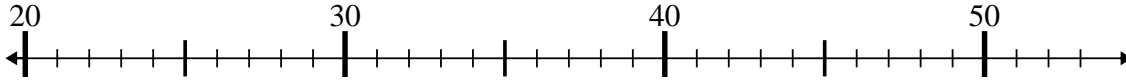
10. _____



Benutze den Zahlenstrahl um jede Aufgabe zu lösen.

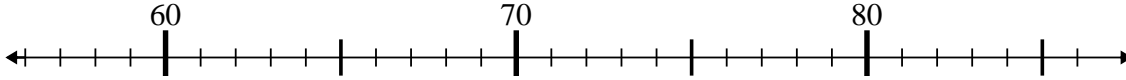
Antworten

1) $21 + 5 = ?$



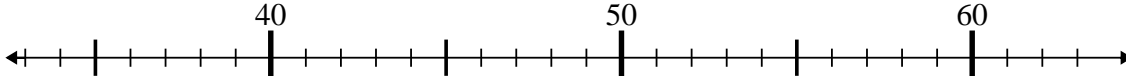
1. 26

2) $79 + 0 = ?$



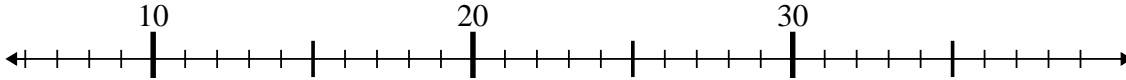
2. 79

3) $62 - 23 = ?$



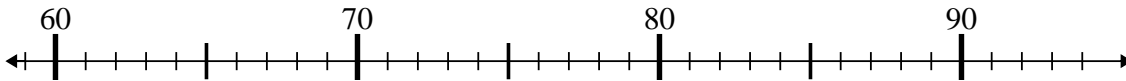
3. 39

4) $13 + 2 = ?$



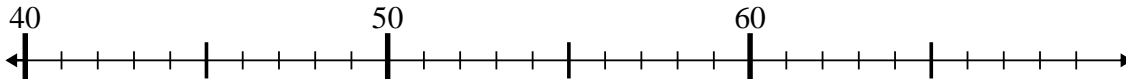
4. 15

5) $64 + 0 = ?$



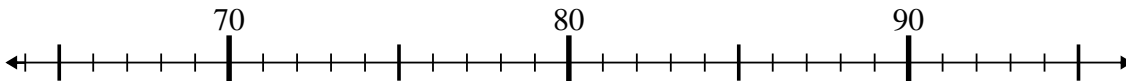
5. 64

6) $63 - 10 = ?$



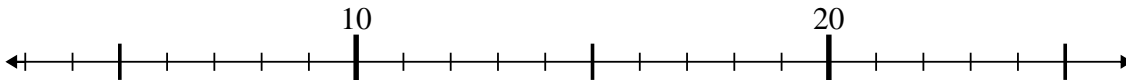
6. 53

7) $76 + 15 = ?$



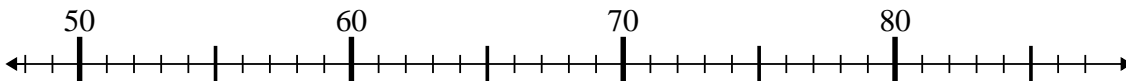
7. 91

8) $13 - 2 = ?$



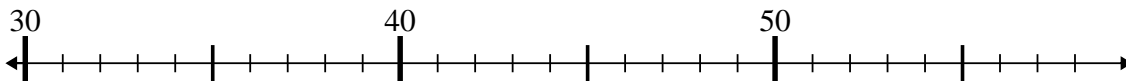
8. 11

9) $77 - 24 = ?$



9. 53

10) $56 - 1 = ?$



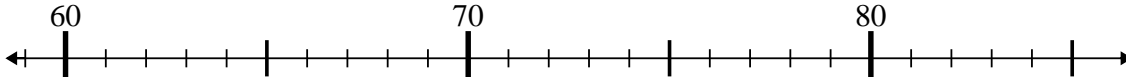
10. 55



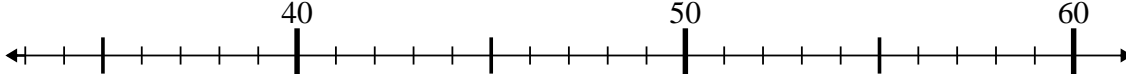
Benutze den Zahlenstrahl um jede Aufgabe zu lösen.

Antworten

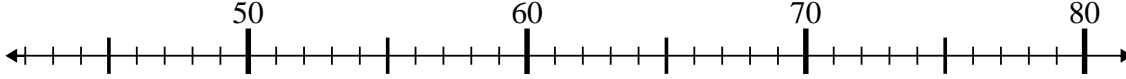
1) $64 + 0 = ?$



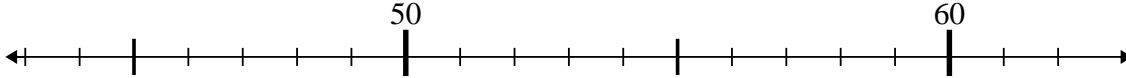
2) $39 + 11 = ?$



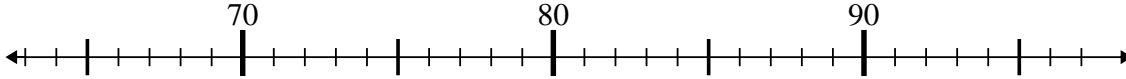
3) $63 + 7 = ?$



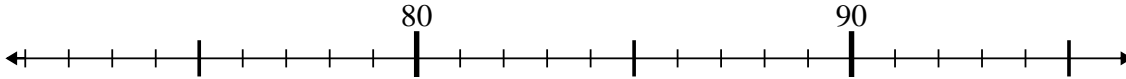
4) $62 + 0 = ?$



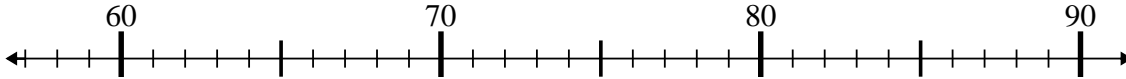
5) $75 - 6 = ?$



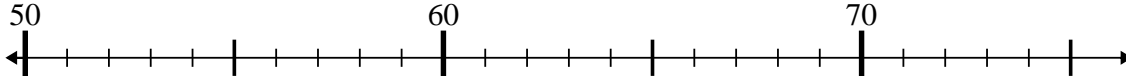
6) $89 - 15 = ?$



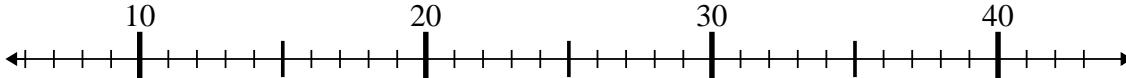
7) $77 - 19 = ?$



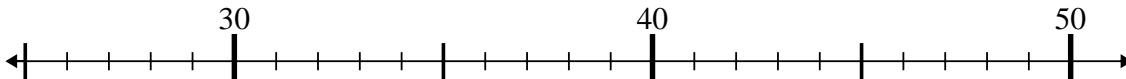
8) $55 - 5 = ?$



9) $28 - 14 = ?$



10) $35 + 14 = ?$



1. _____

2. _____

3. _____

4. _____

5. _____

6. _____

7. _____

8. _____

9. _____

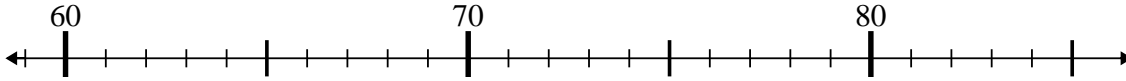
10. _____



Benutze den Zahlenstrahl um jede Aufgabe zu lösen.

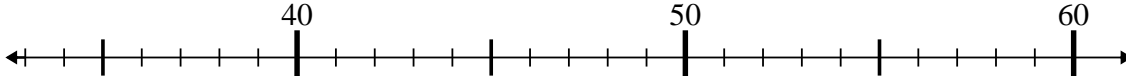
Antworten

1) $64 + 0 = ?$



1. 64

2) $39 + 11 = ?$



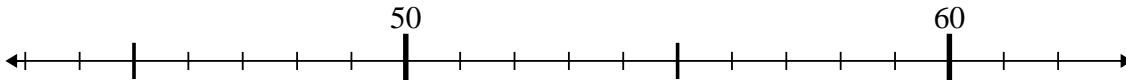
2. 50

3) $63 + 7 = ?$



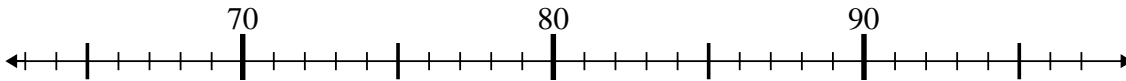
3. 70

4) $62 + 0 = ?$



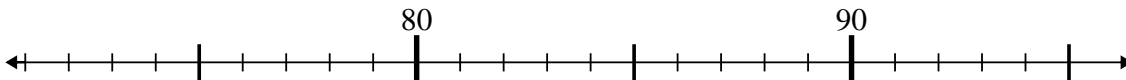
4. 62

5) $75 - 6 = ?$



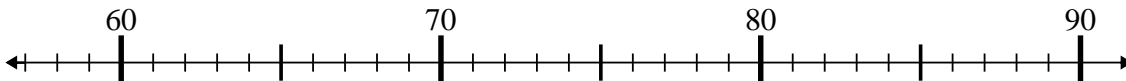
5. 69

6) $89 - 15 = ?$



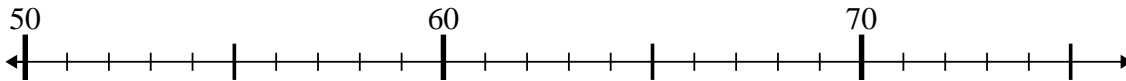
6. 74

7) $77 - 19 = ?$



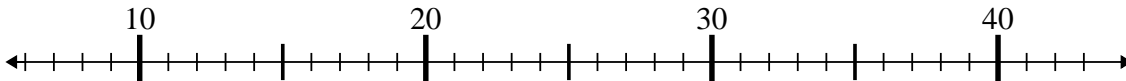
7. 58

8) $55 - 5 = ?$



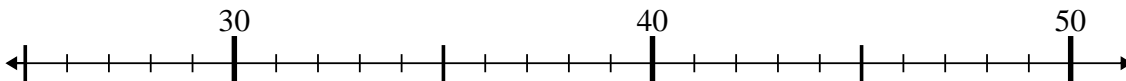
8. 50

9) $28 - 14 = ?$



9. 14

10) $35 + 14 = ?$



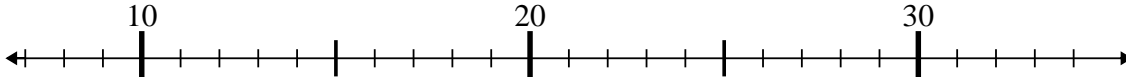
10. 49



Benutze den Zahlenstrahl um jede Aufgabe zu lösen.

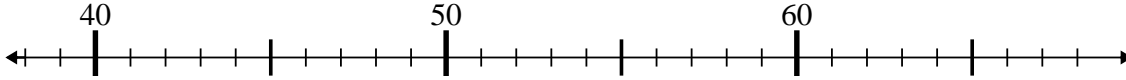
Antworten

1) $20 - 5 = ?$



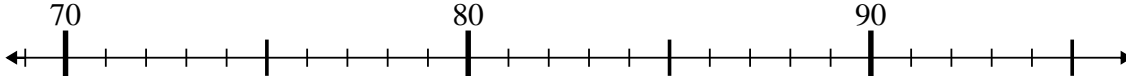
1. _____

2) $60 - 17 = ?$



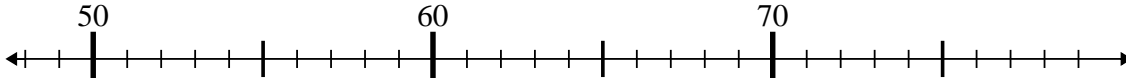
2. _____

3) $80 + 0 = ?$



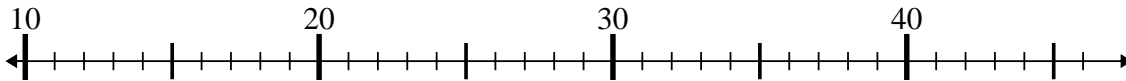
3. _____

4) $64 - 1 = ?$



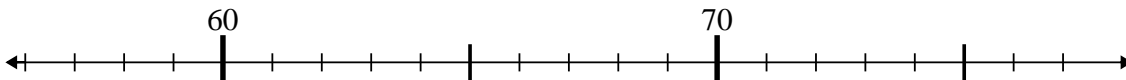
4. _____

5) $16 + 8 = ?$



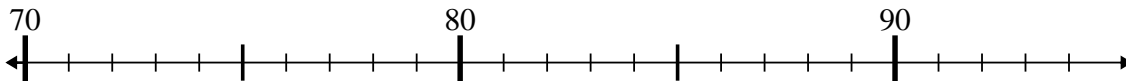
5. _____

6) $56 + 14 = ?$



6. _____

7) $82 - 10 = ?$



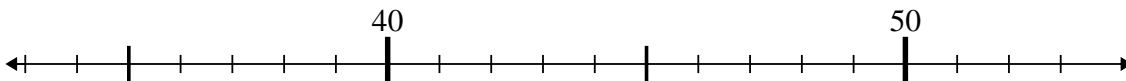
7. _____

8) $77 - 7 = ?$



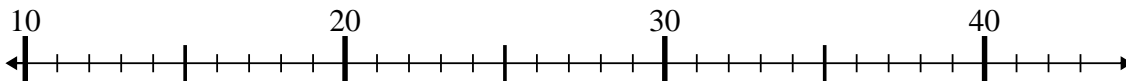
8. _____

9) $40 - 5 = ?$



9. _____

10) $43 - 21 = ?$



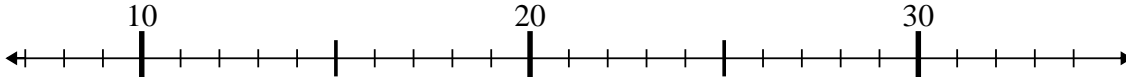
10. _____



Benutze den Zahlenstrahl um jede Aufgabe zu lösen.

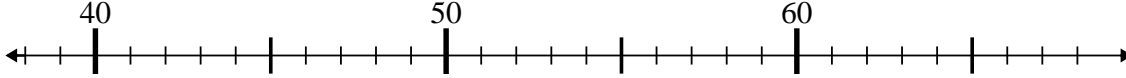
Antworten

1) $20 - 5 = ?$



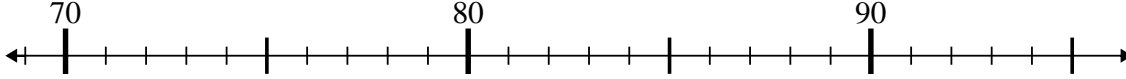
1. 15

2) $60 - 17 = ?$



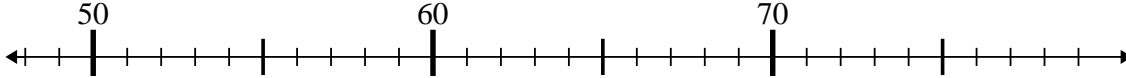
2. 43

3) $80 + 0 = ?$



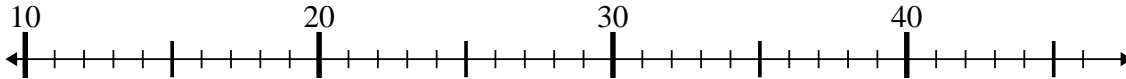
3. 80

4) $64 - 1 = ?$



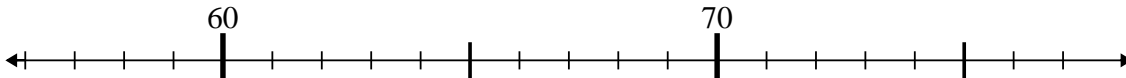
4. 63

5) $16 + 8 = ?$



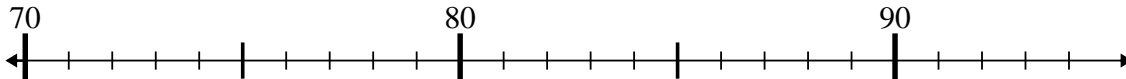
5. 24

6) $56 + 14 = ?$



6. 70

7) $82 - 10 = ?$



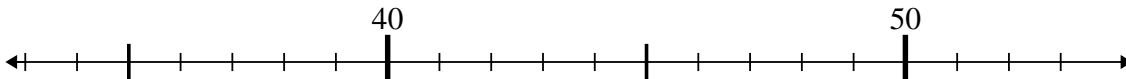
7. 72

8) $77 - 7 = ?$



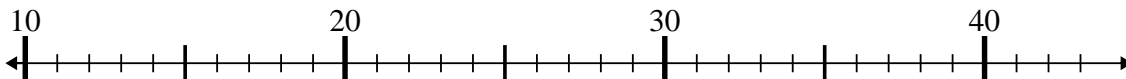
8. 70

9) $40 - 5 = ?$



9. 35

10) $43 - 21 = ?$



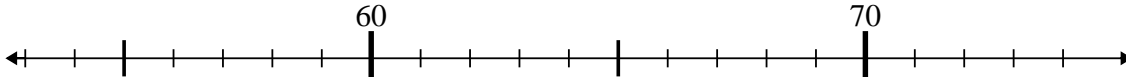
10. 22



Benutze den Zahlenstrahl um jede Aufgabe zu lösen.

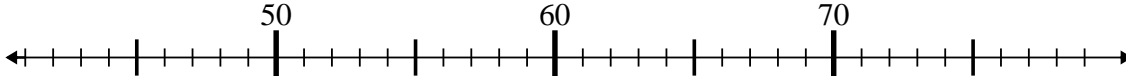
Antworten

1) $60 - 2 = ?$



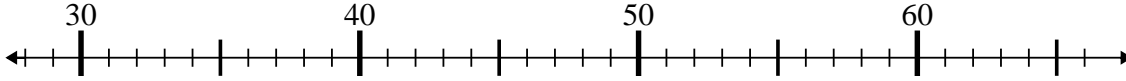
1. _____

2) $75 - 33 = ?$



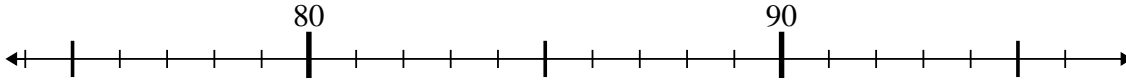
2. _____

3) $52 + 3 = ?$



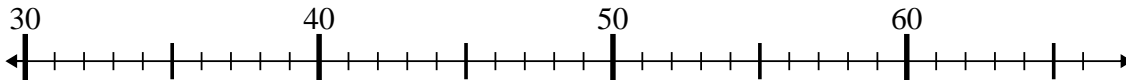
3. _____

4) $80 - 2 = ?$



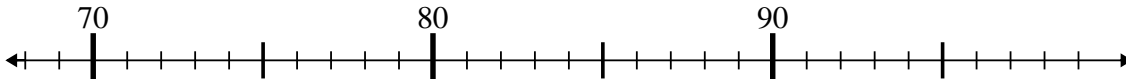
4. _____

5) $36 + 23 = ?$



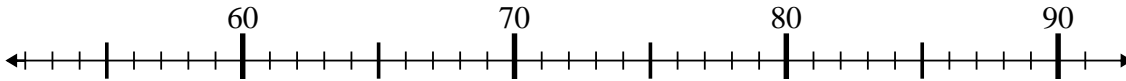
5. _____

6) $87 - 18 = ?$



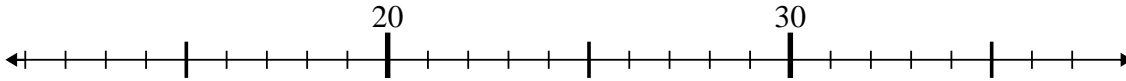
6. _____

7) $63 + 16 = ?$



7. _____

8) $27 - 1 = ?$



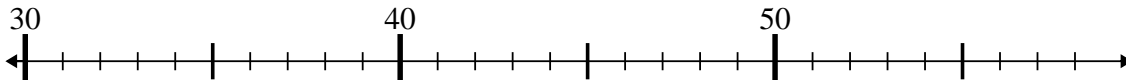
8. _____

9) $38 - 17 = ?$



9. _____

10) $53 - 19 = ?$



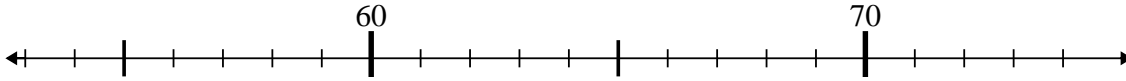
10. _____



Benutze den Zahlenstrahl um jede Aufgabe zu lösen.

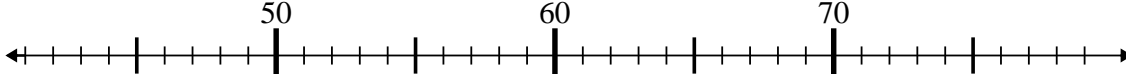
Antworten

1) $60 - 2 = ?$



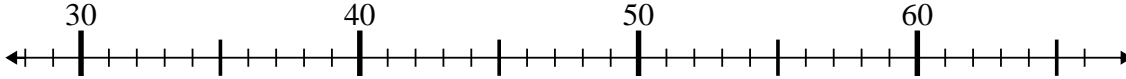
1. 58

2) $75 - 33 = ?$



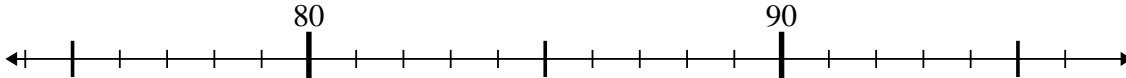
2. 42

3) $52 + 3 = ?$



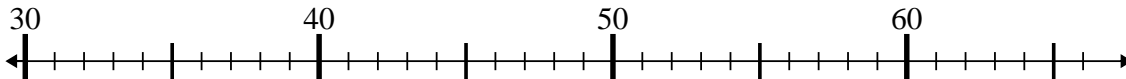
3. 55

4) $80 - 2 = ?$



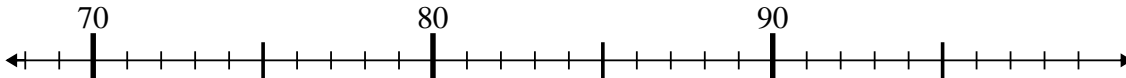
4. 78

5) $36 + 23 = ?$



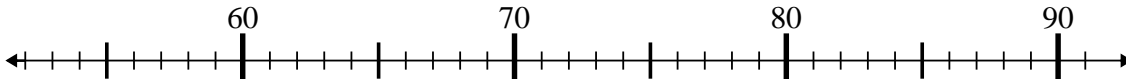
5. 59

6) $87 - 18 = ?$



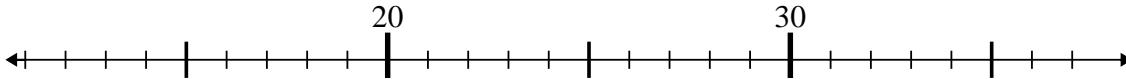
6. 69

7) $63 + 16 = ?$



7. 79

8) $27 - 1 = ?$



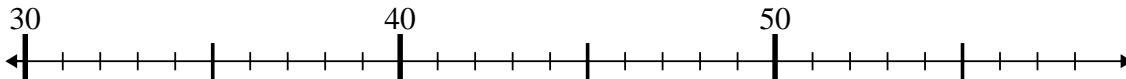
8. 26

9) $38 - 17 = ?$



9. 21

10) $53 - 19 = ?$



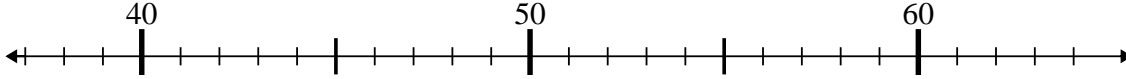
10. 34



Benutze den Zahlenstrahl um jede Aufgabe zu lösen.

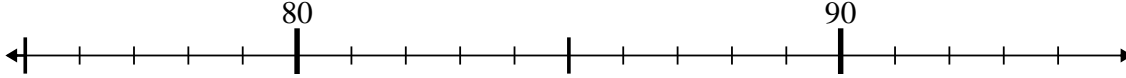
Antworten

1) $64 - 5 = ?$



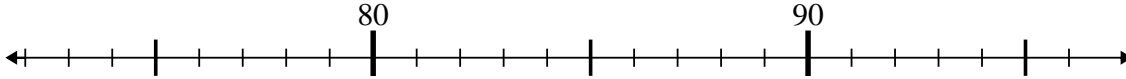
1. _____

2) $84 - 3 = ?$



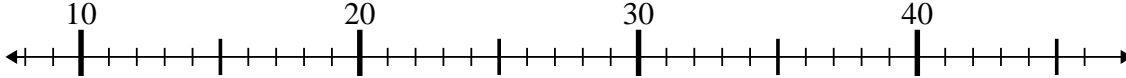
2. _____

3) $78 + 0 = ?$



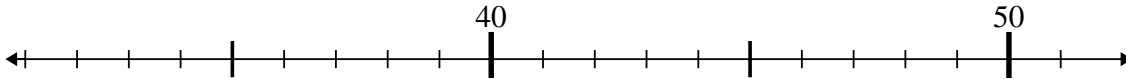
3. _____

4) $34 + 6 = ?$



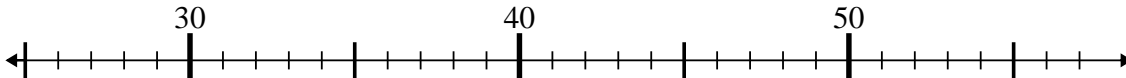
4. _____

5) $47 - 14 = ?$



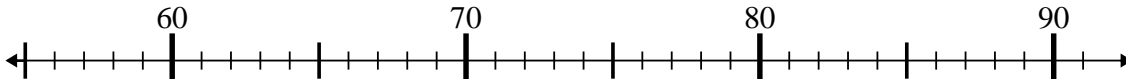
5. _____

6) $41 - 7 = ?$



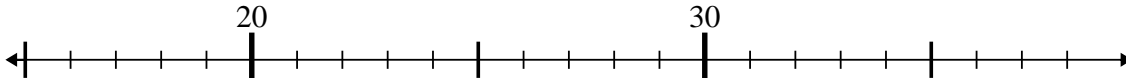
6. _____

7) $62 + 5 = ?$



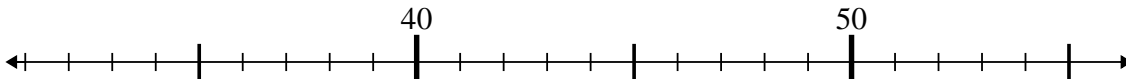
7. _____

8) $33 - 16 = ?$



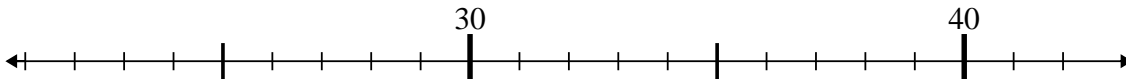
8. _____

9) $47 - 15 = ?$



9. _____

10) $35 - 5 = ?$



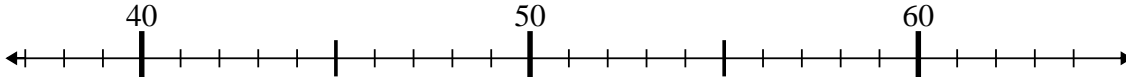
10. _____



Benutze den Zahlenstrahl um jede Aufgabe zu lösen.

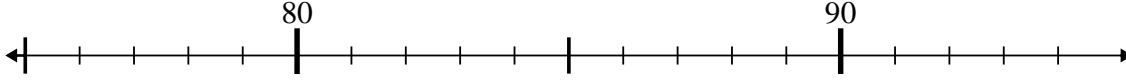
Antworten

1) $64 - 5 = ?$



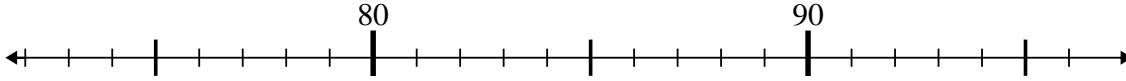
1. 59

2) $84 - 3 = ?$



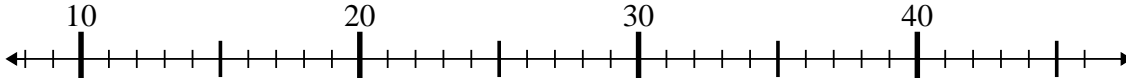
2. 81

3) $78 + 0 = ?$



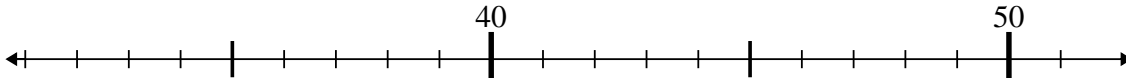
3. 78

4) $34 + 6 = ?$



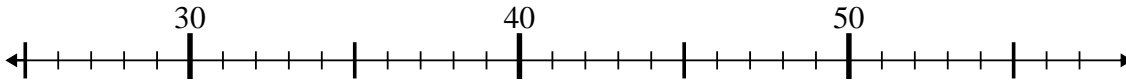
4. 40

5) $47 - 14 = ?$



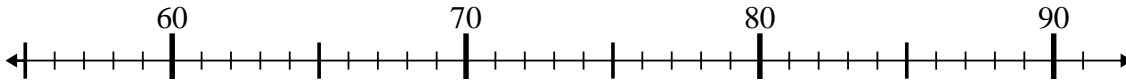
5. 33

6) $41 - 7 = ?$



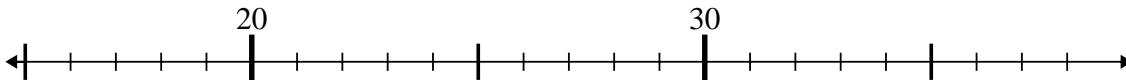
6. 34

7) $62 + 5 = ?$



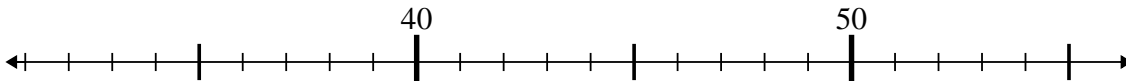
7. 67

8) $33 - 16 = ?$



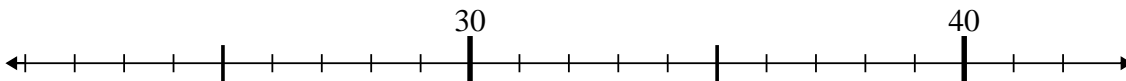
8. 17

9) $47 - 15 = ?$



9. 32

10) $35 - 5 = ?$



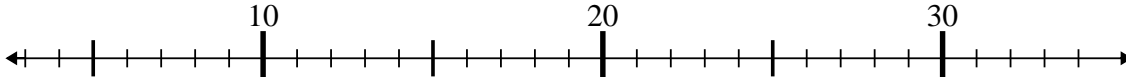
10. 30



Benutze den Zahlenstrahl um jede Aufgabe zu lösen.

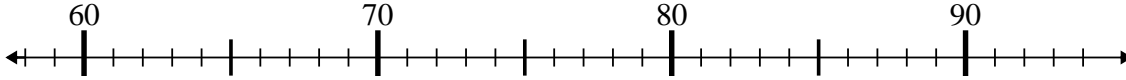
Antworten

1) $32 - 23 = ?$



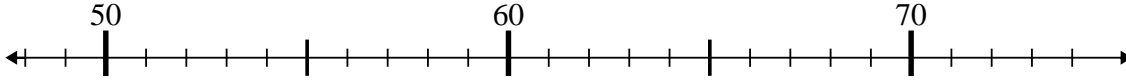
1. _____

2) $87 - 23 = ?$



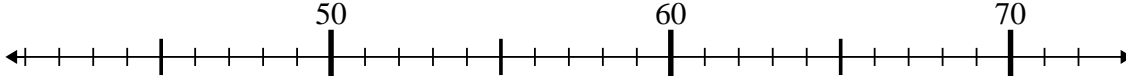
2. _____

3) $63 - 13 = ?$



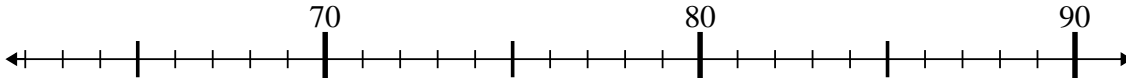
3. _____

4) $50 - 5 = ?$



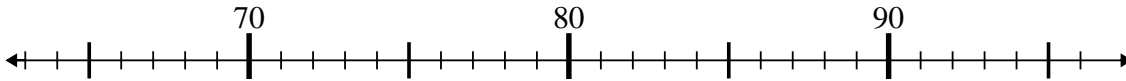
4. _____

5) $86 - 0 = ?$



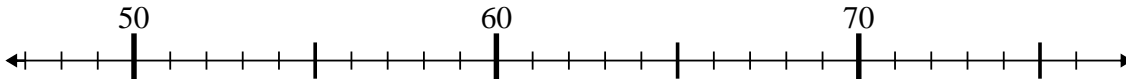
5. _____

6) $67 + 11 = ?$



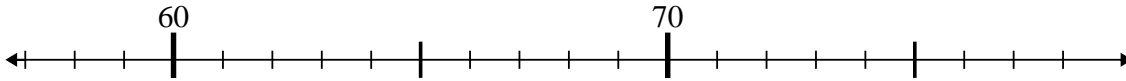
6. _____

7) $63 - 12 = ?$



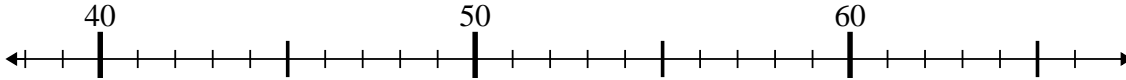
7. _____

8) $68 - 2 = ?$



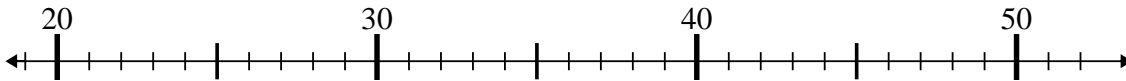
8. _____

9) $45 + 1 = ?$



9. _____

10) $24 + 27 = ?$

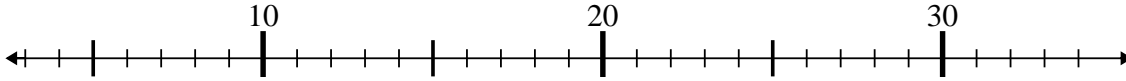


10. _____

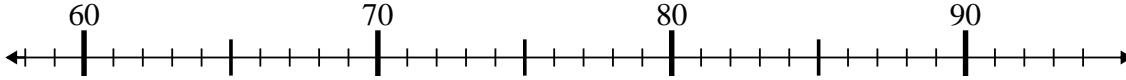


Benutze den Zahlenstrahl um jede Aufgabe zu lösen.

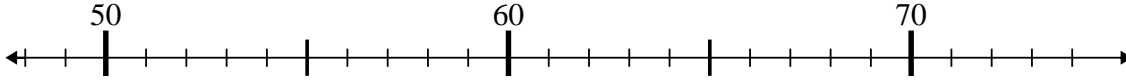
1) $32 - 23 = ?$



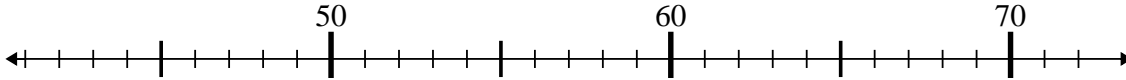
2) $87 - 23 = ?$



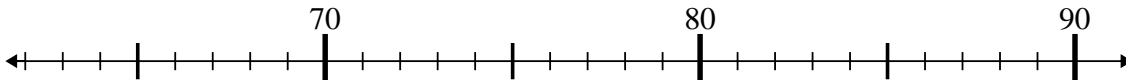
3) $63 - 13 = ?$



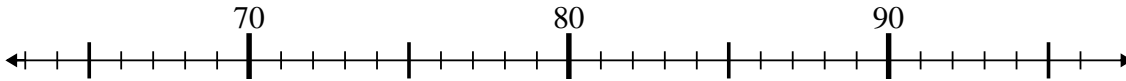
4) $50 - 5 = ?$



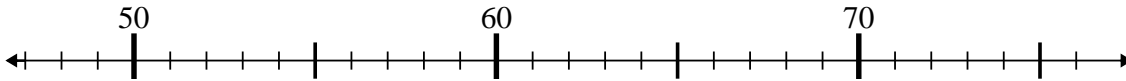
5) $86 - 0 = ?$



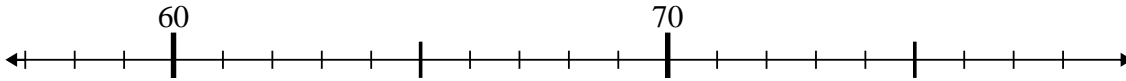
6) $67 + 11 = ?$



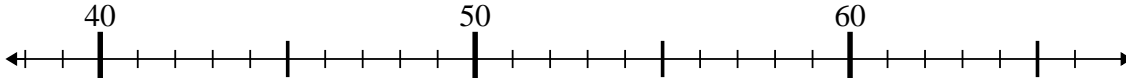
7) $63 - 12 = ?$



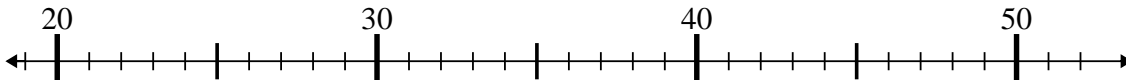
8) $68 - 2 = ?$



9) $45 + 1 = ?$



10) $24 + 27 = ?$



Antworten

1. 9

2. 64

3. 50

4. 45

5. 86

6. 78

7. 51

8. 66

9. 46

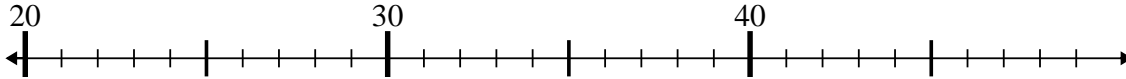
10. 51



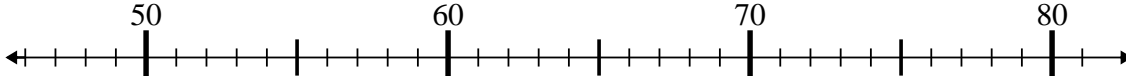
Benutze den Zahlenstrahl um jede Aufgabe zu lösen.

Antworten

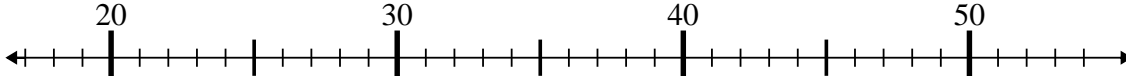
1) $31 + 8 = ?$



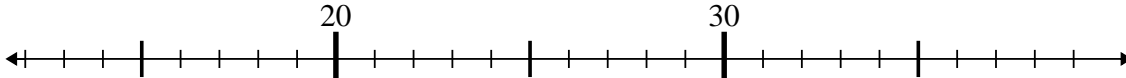
2) $60 + 3 = ?$



3) $25 + 0 = ?$



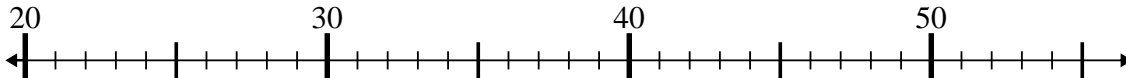
4) $13 + 5 = ?$



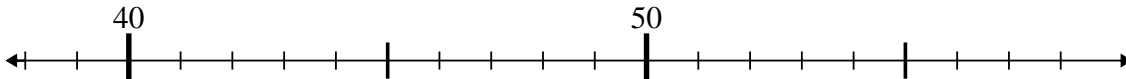
5) $33 - 0 = ?$



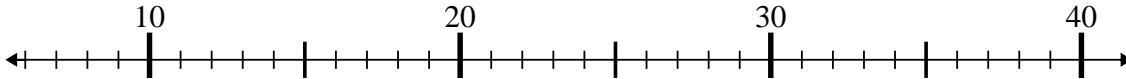
6) $26 + 2 = ?$



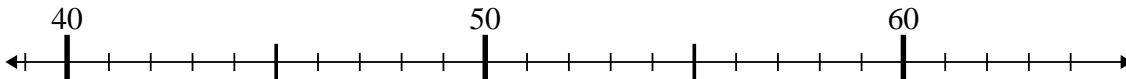
7) $45 - 5 = ?$



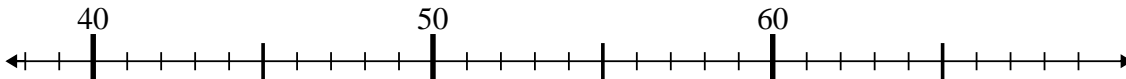
8) $38 - 0 = ?$



9) $42 + 19 = ?$



10) $44 + 6 = ?$



1. _____

2. _____

3. _____

4. _____

5. _____

6. _____

7. _____

8. _____

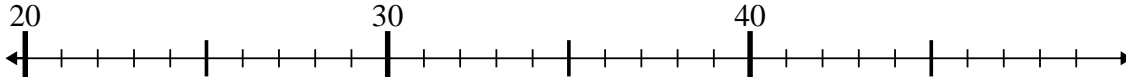
9. _____

10. _____

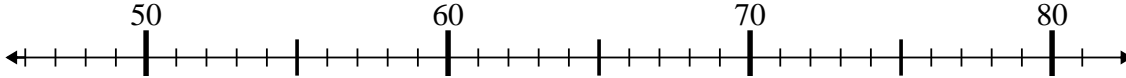


Benutze den Zahlenstrahl um jede Aufgabe zu lösen.

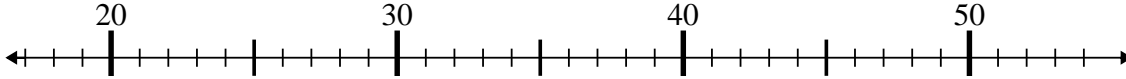
1) $31 + 8 = ?$



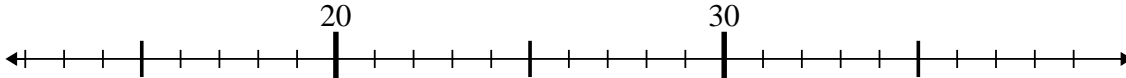
2) $60 + 3 = ?$



3) $25 + 0 = ?$



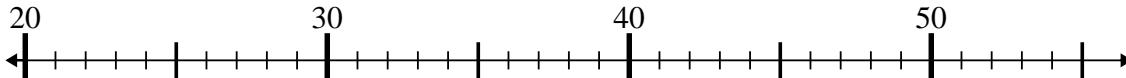
4) $13 + 5 = ?$



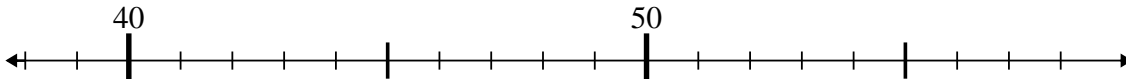
5) $33 - 0 = ?$



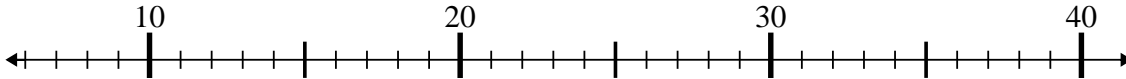
6) $26 + 2 = ?$



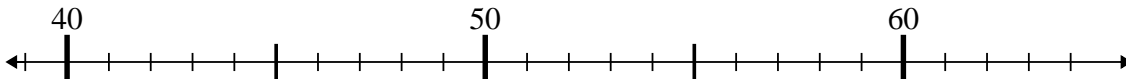
7) $45 - 5 = ?$



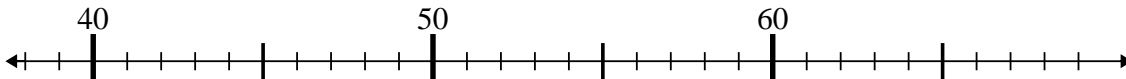
8) $38 - 0 = ?$



9) $42 + 19 = ?$



10) $44 + 6 = ?$

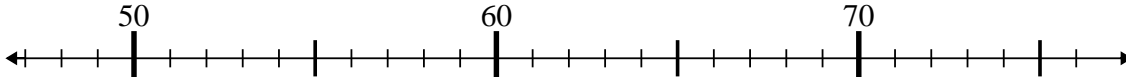
**Antworten**1. 392. 633. 254. 185. 336. 287. 408. 389. 6110. 50



Benutze den Zahlenstrahl um jede Aufgabe zu lösen.

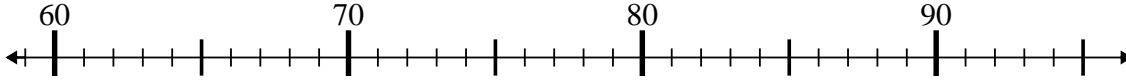
Antworten

1) $48 + 5 = ?$



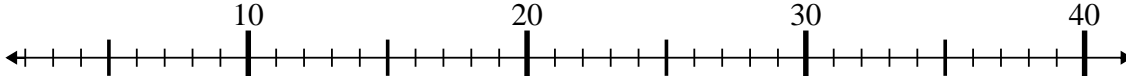
1. _____

2) $81 + 13 = ?$



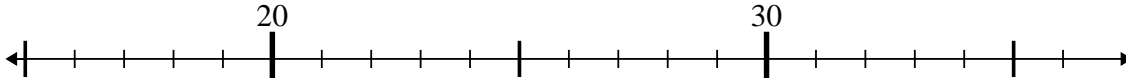
2. _____

3) $36 - 24 = ?$



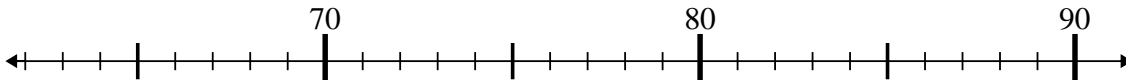
3. _____

4) $20 - 5 = ?$



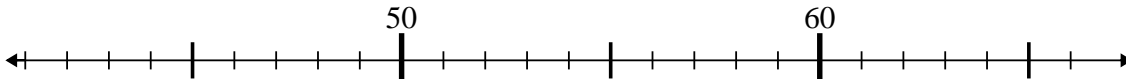
4. _____

5) $66 + 3 = ?$



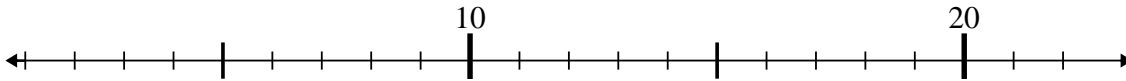
5. _____

6) $63 - 8 = ?$



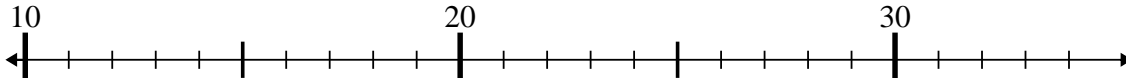
6. _____

7) $7 + 11 = ?$



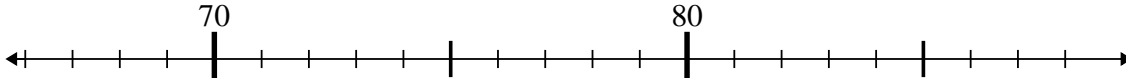
7. _____

8) $22 - 8 = ?$



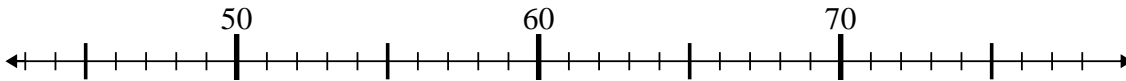
8. _____

9) $73 + 12 = ?$



9. _____

10) $53 - 9 = ?$



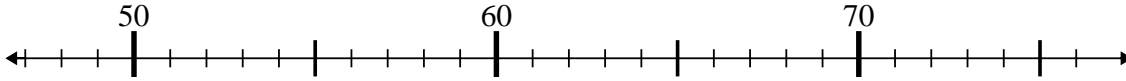
10. _____



Benutze den Zahlenstrahl um jede Aufgabe zu lösen.

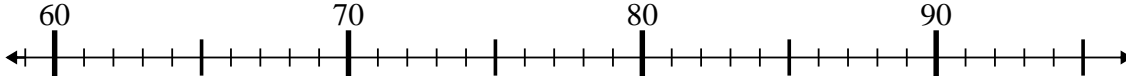
Antworten

1) $48 + 5 = ?$



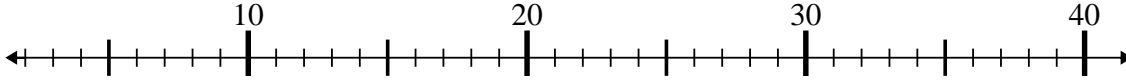
1. 53

2) $81 + 13 = ?$



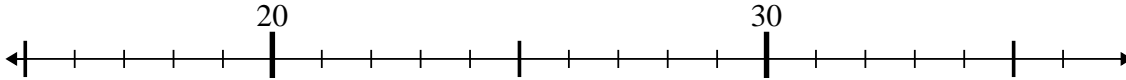
2. 94

3) $36 - 24 = ?$



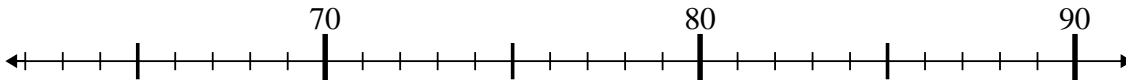
3. 12

4) $20 - 5 = ?$



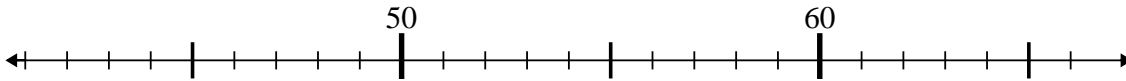
4. 15

5) $66 + 3 = ?$



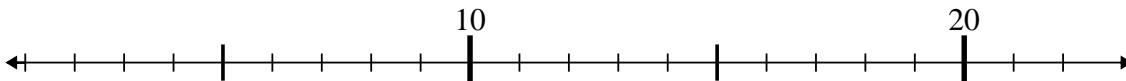
5. 69

6) $63 - 8 = ?$



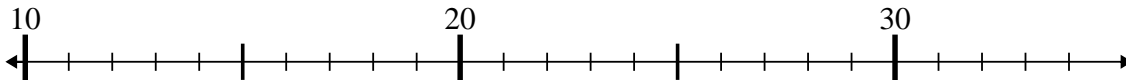
6. 55

7) $7 + 11 = ?$



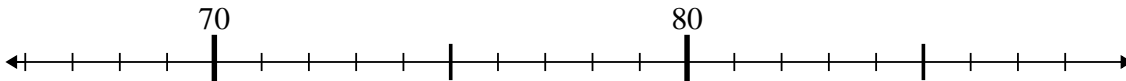
7. 18

8) $22 - 8 = ?$



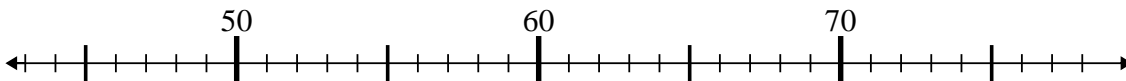
8. 14

9) $73 + 12 = ?$



9. 85

10) $53 - 9 = ?$



10. 44