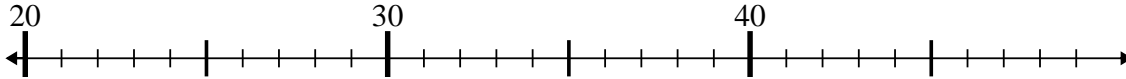




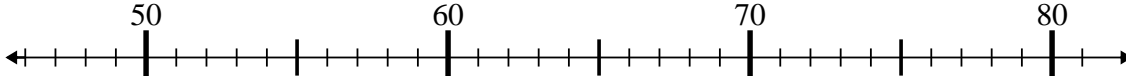
Benutze den Zahlenstrahl um jede Aufgabe zu lösen.

Antworten

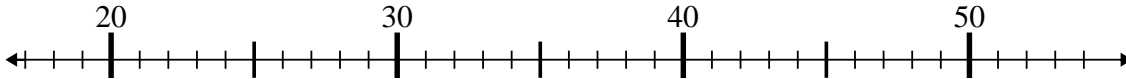
1) $31 + 8 = ?$



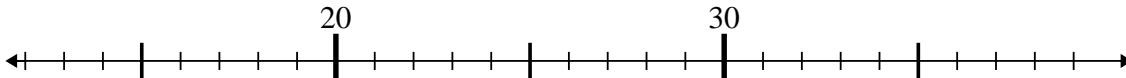
2) $60 + 3 = ?$



3) $25 + 0 = ?$



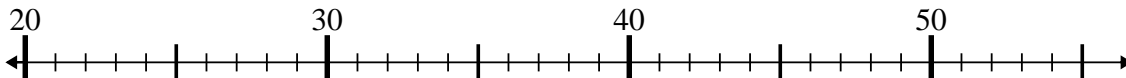
4) $13 + 5 = ?$



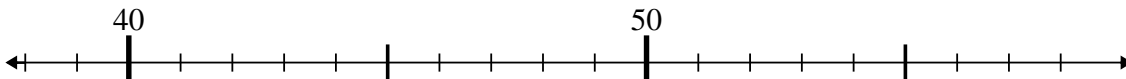
5) $33 - 0 = ?$



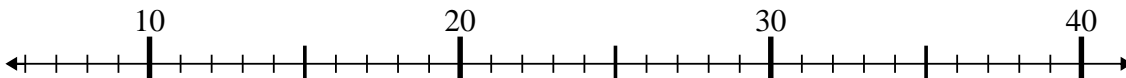
6) $26 + 2 = ?$



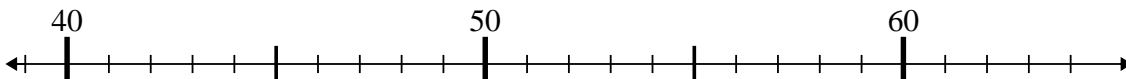
7) $45 - 5 = ?$



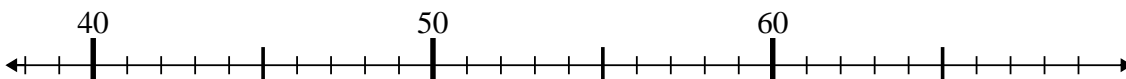
8) $38 - 0 = ?$



9) $42 + 19 = ?$



10) $44 + 6 = ?$



1. _____

2. _____

3. _____

4. _____

5. _____

6. _____

7. _____

8. _____

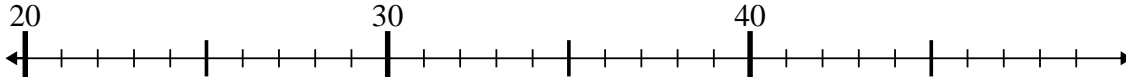
9. _____

10. _____

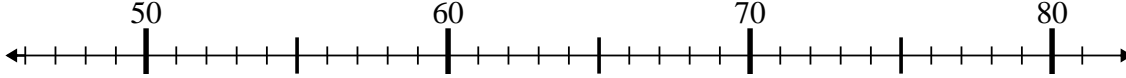


Benutze den Zahlenstrahl um jede Aufgabe zu lösen.

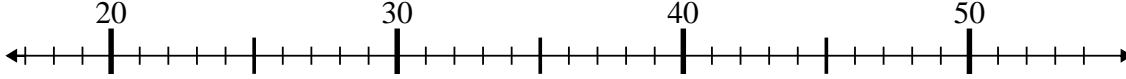
1) $31 + 8 = ?$



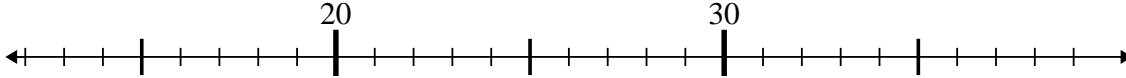
2) $60 + 3 = ?$



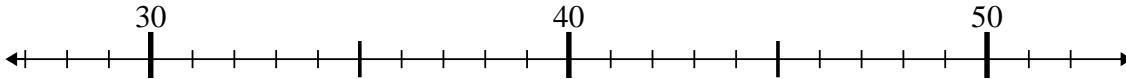
3) $25 + 0 = ?$



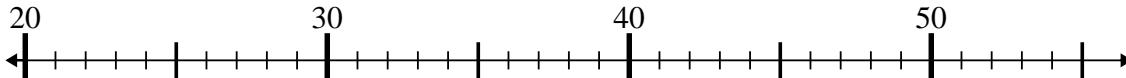
4) $13 + 5 = ?$



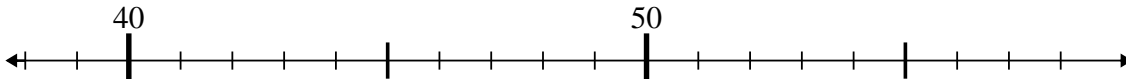
5) $33 - 0 = ?$



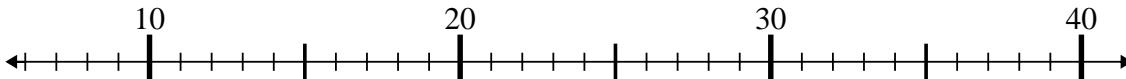
6) $26 + 2 = ?$



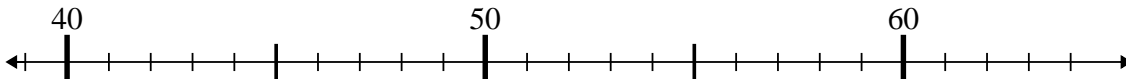
7) $45 - 5 = ?$



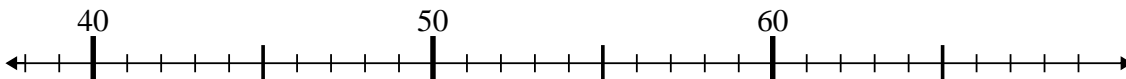
8) $38 - 0 = ?$



9) $42 + 19 = ?$



10) $44 + 6 = ?$



Antworten

1. 39

2. 63

3. 25

4. 18

5. 33

6. 28

7. 40

8. 38

9. 61

10. 50