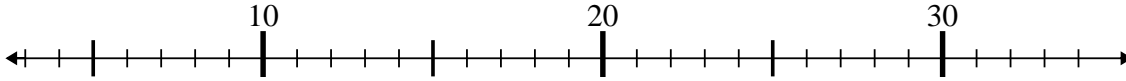




Benutze den Zahlenstrahl um jede Aufgabe zu lösen.

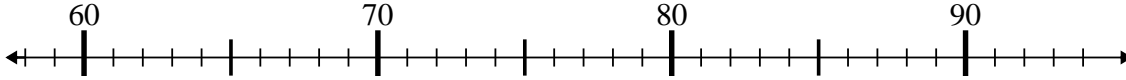
Antworten

1) $32 - 23 = ?$



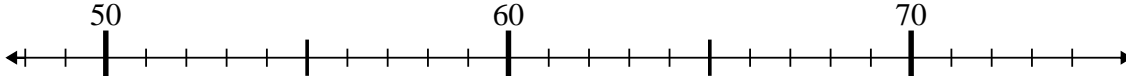
1. _____

2) $87 - 23 = ?$



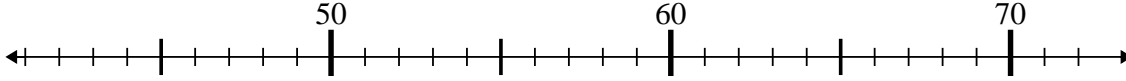
2. _____

3) $63 - 13 = ?$



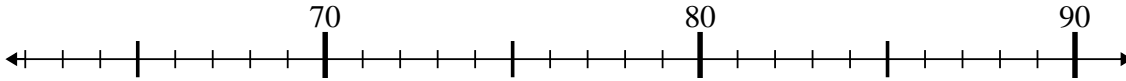
3. _____

4) $50 - 5 = ?$



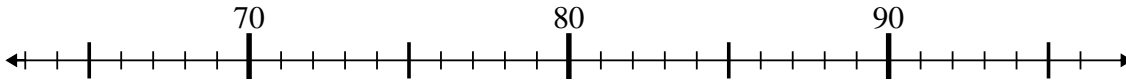
4. _____

5) $86 - 0 = ?$



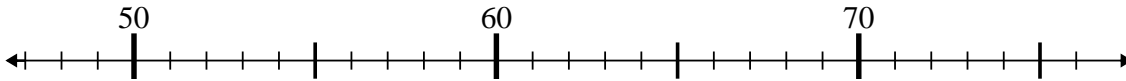
5. _____

6) $67 + 11 = ?$



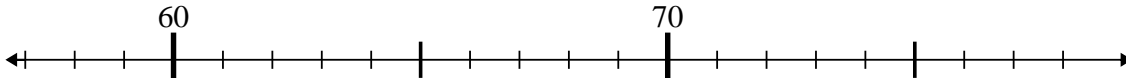
6. _____

7) $63 - 12 = ?$



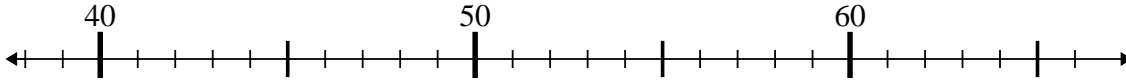
7. _____

8) $68 - 2 = ?$



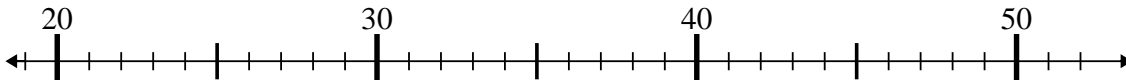
8. _____

9) $45 + 1 = ?$



9. _____

10) $24 + 27 = ?$

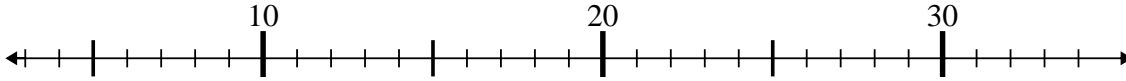


10. _____

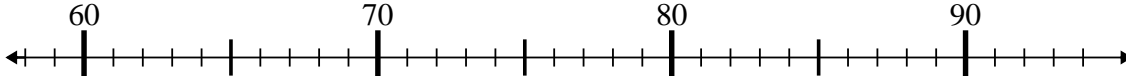


Benutze den Zahlenstrahl um jede Aufgabe zu lösen.

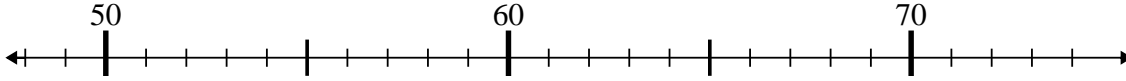
1) $32 - 23 = ?$



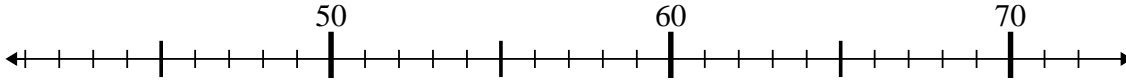
2) $87 - 23 = ?$



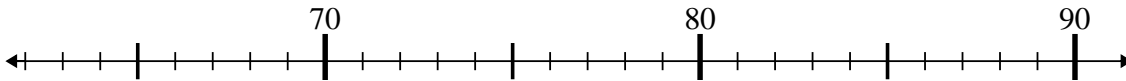
3) $63 - 13 = ?$



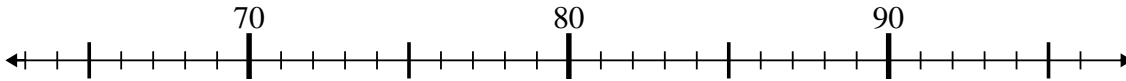
4) $50 - 5 = ?$



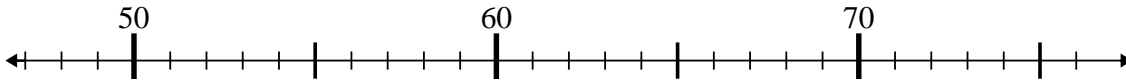
5) $86 - 0 = ?$



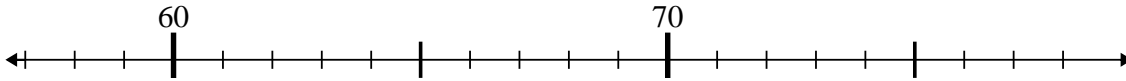
6) $67 + 11 = ?$



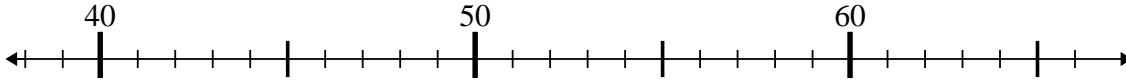
7) $63 - 12 = ?$



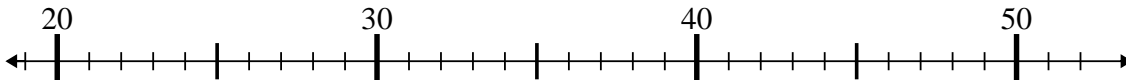
8) $68 - 2 = ?$



9) $45 + 1 = ?$



10) $24 + 27 = ?$



Antworten

1. 9

2. 64

3. 50

4. 45

5. 86

6. 78

7. 51

8. 66

9. 46

10. 51