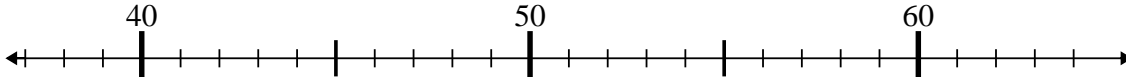




Benutze den Zahlenstrahl um jede Aufgabe zu lösen.

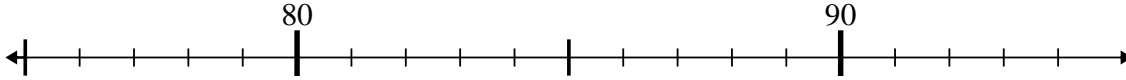
Antworten

1) $64 - 5 = ?$



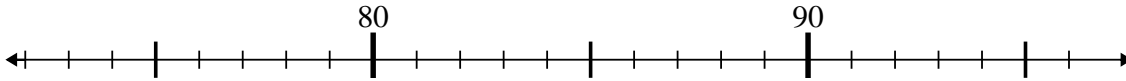
1. _____

2) $84 - 3 = ?$



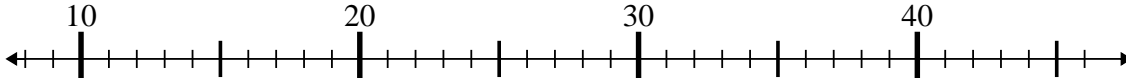
2. _____

3) $78 + 0 = ?$



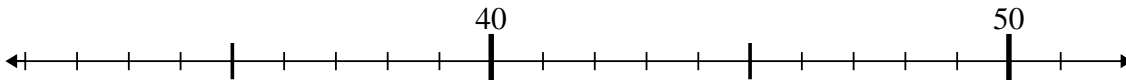
3. _____

4) $34 + 6 = ?$



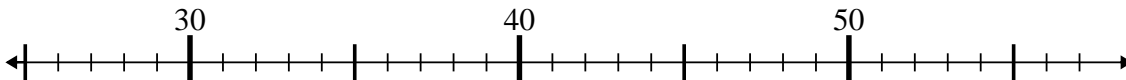
4. _____

5) $47 - 14 = ?$



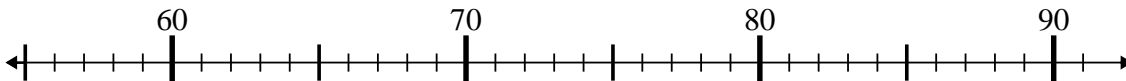
5. _____

6) $41 - 7 = ?$



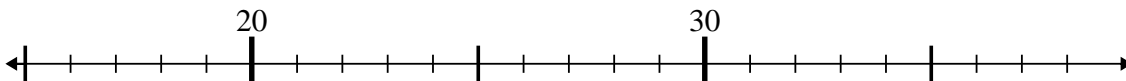
6. _____

7) $62 + 5 = ?$



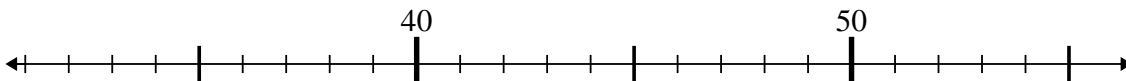
7. _____

8) $33 - 16 = ?$



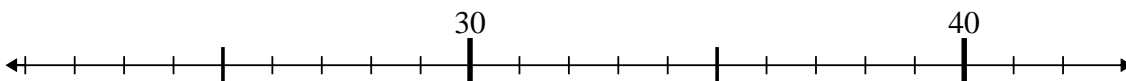
8. _____

9) $47 - 15 = ?$



9. _____

10) $35 - 5 = ?$



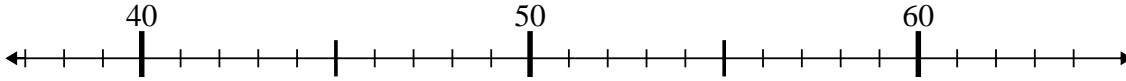
10. _____



Benutze den Zahlenstrahl um jede Aufgabe zu lösen.

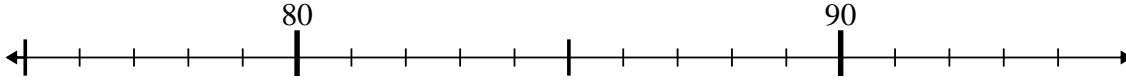
Antworten

1) $64 - 5 = ?$



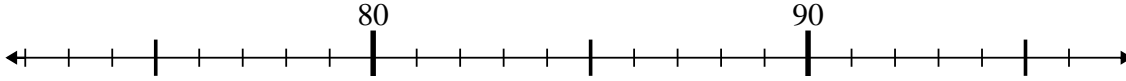
1. 59

2) $84 - 3 = ?$



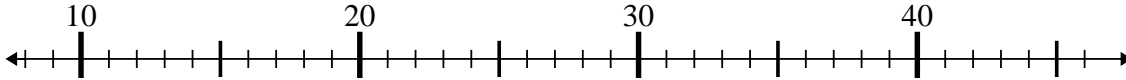
2. 81

3) $78 + 0 = ?$



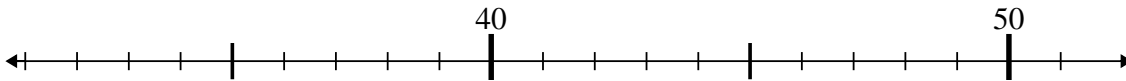
3. 78

4) $34 + 6 = ?$



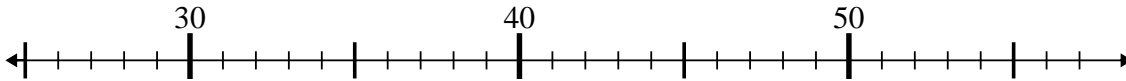
4. 40

5) $47 - 14 = ?$



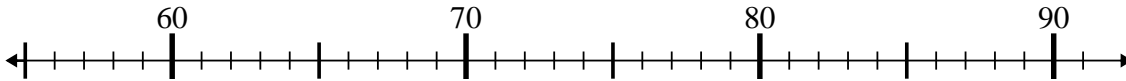
5. 33

6) $41 - 7 = ?$



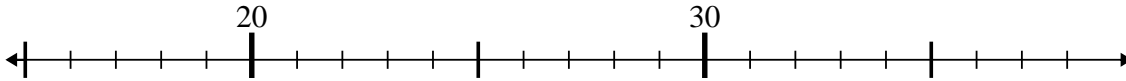
6. 34

7) $62 + 5 = ?$



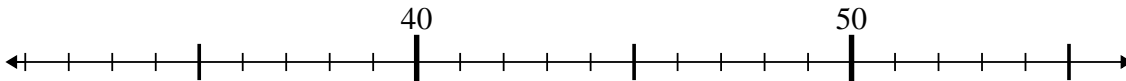
7. 67

8) $33 - 16 = ?$



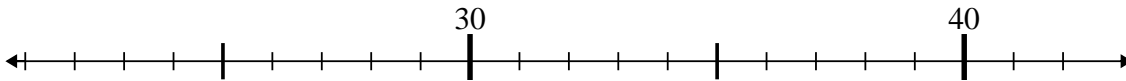
8. 17

9) $47 - 15 = ?$



9. 32

10) $35 - 5 = ?$



10. 30