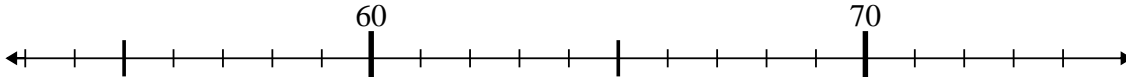




Benutze den Zahlenstrahl um jede Aufgabe zu lösen.

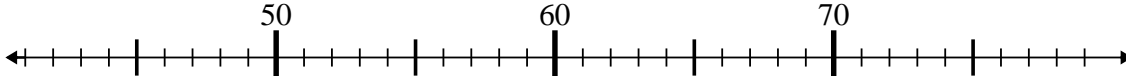
**Antworten**

1)  $60 - 2 = ?$



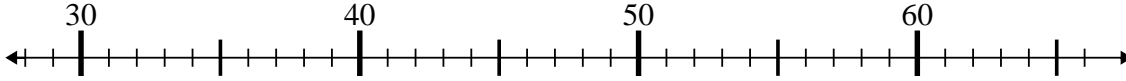
1. \_\_\_\_\_

2)  $75 - 33 = ?$



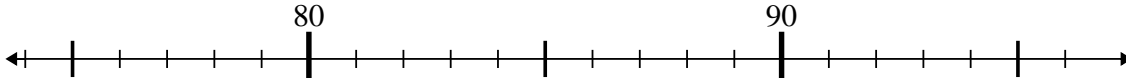
2. \_\_\_\_\_

3)  $52 + 3 = ?$



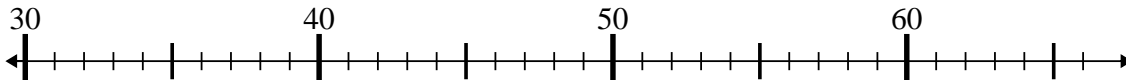
3. \_\_\_\_\_

4)  $80 - 2 = ?$



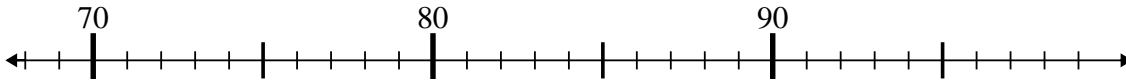
4. \_\_\_\_\_

5)  $36 + 23 = ?$



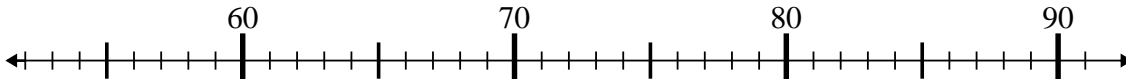
5. \_\_\_\_\_

6)  $87 - 18 = ?$



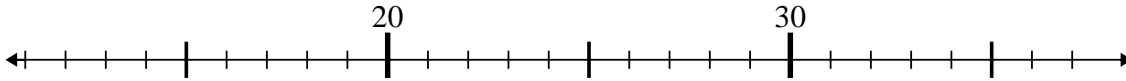
6. \_\_\_\_\_

7)  $63 + 16 = ?$



7. \_\_\_\_\_

8)  $27 - 1 = ?$



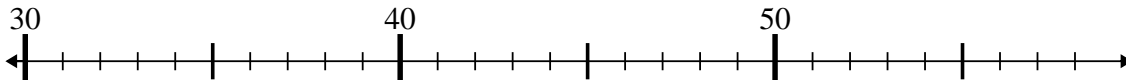
8. \_\_\_\_\_

9)  $38 - 17 = ?$



9. \_\_\_\_\_

10)  $53 - 19 = ?$



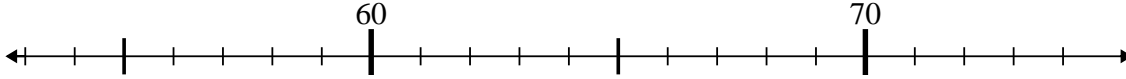
10. \_\_\_\_\_



Benutze den Zahlenstrahl um jede Aufgabe zu lösen.

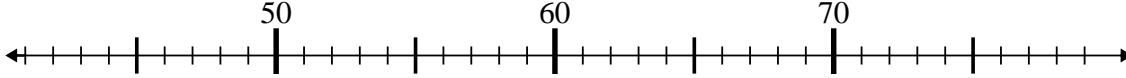
**Antworten**

1)  $60 - 2 = ?$



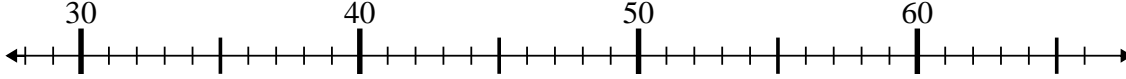
1. 58

2)  $75 - 33 = ?$



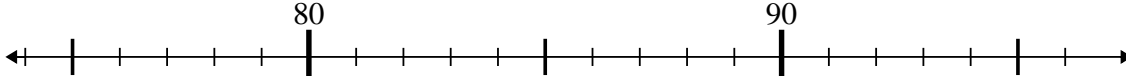
2. 42

3)  $52 + 3 = ?$



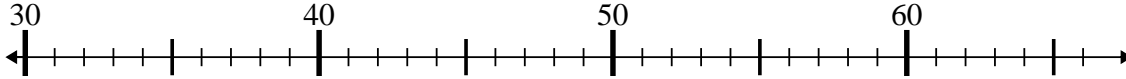
3. 55

4)  $80 - 2 = ?$



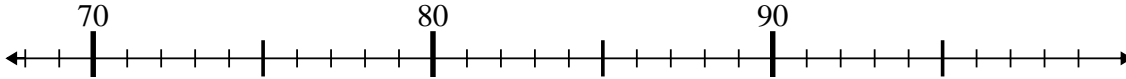
4. 78

5)  $36 + 23 = ?$



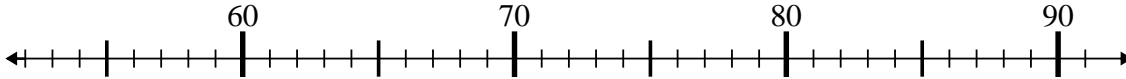
5. 59

6)  $87 - 18 = ?$



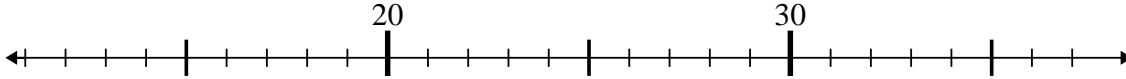
6. 69

7)  $63 + 16 = ?$



7. 79

8)  $27 - 1 = ?$



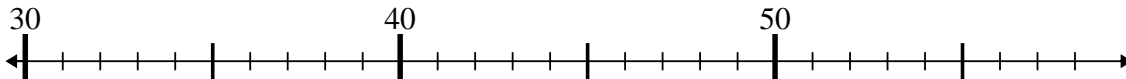
8. 26

9)  $38 - 17 = ?$



9. 21

10)  $53 - 19 = ?$



10. 34