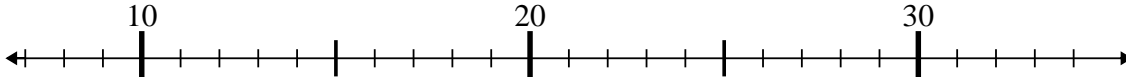




Benutze den Zahlenstrahl um jede Aufgabe zu lösen.

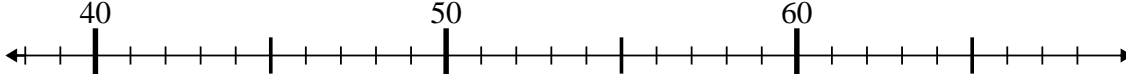
Antworten

1) $20 - 5 = ?$



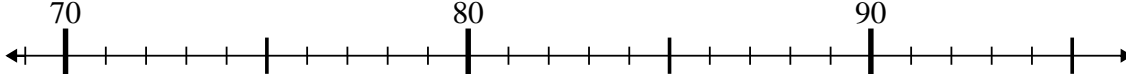
1. _____

2) $60 - 17 = ?$



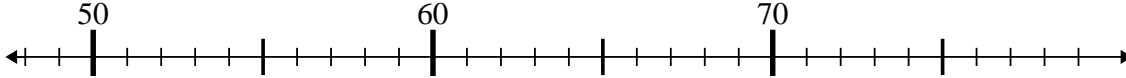
2. _____

3) $80 + 0 = ?$



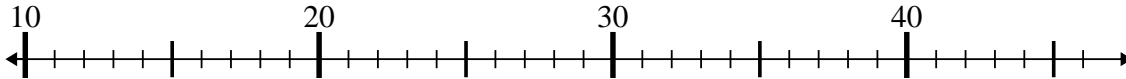
3. _____

4) $64 - 1 = ?$



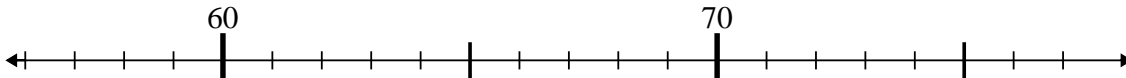
4. _____

5) $16 + 8 = ?$



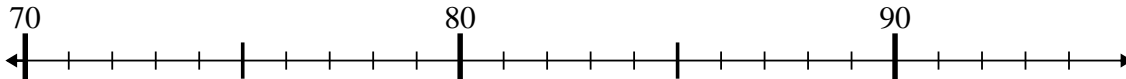
5. _____

6) $56 + 14 = ?$



6. _____

7) $82 - 10 = ?$



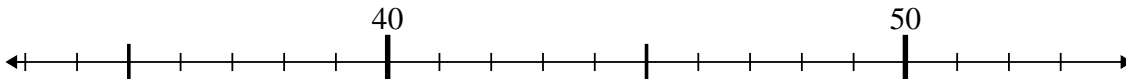
7. _____

8) $77 - 7 = ?$



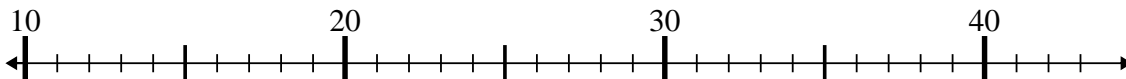
8. _____

9) $40 - 5 = ?$



9. _____

10) $43 - 21 = ?$



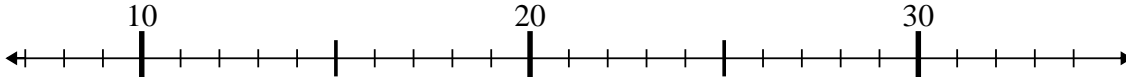
10. _____



Benutze den Zahlenstrahl um jede Aufgabe zu lösen.

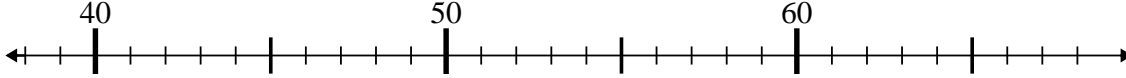
Antworten

1) $20 - 5 = ?$



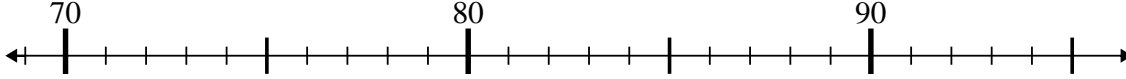
1. 15

2) $60 - 17 = ?$



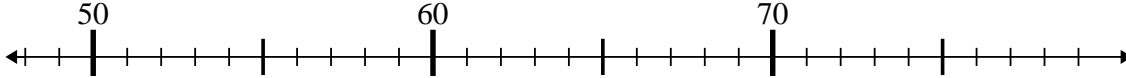
2. 43

3) $80 + 0 = ?$



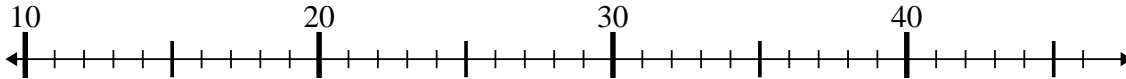
3. 80

4) $64 - 1 = ?$



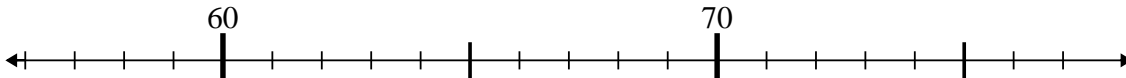
4. 63

5) $16 + 8 = ?$



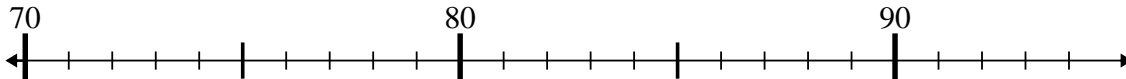
5. 24

6) $56 + 14 = ?$



6. 70

7) $82 - 10 = ?$



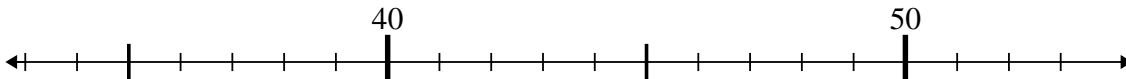
7. 72

8) $77 - 7 = ?$



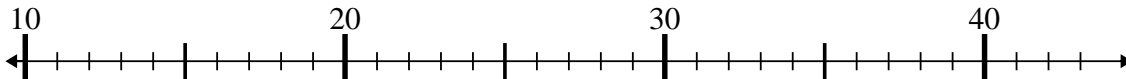
8. 70

9) $40 - 5 = ?$



9. 35

10) $43 - 21 = ?$



10. 22