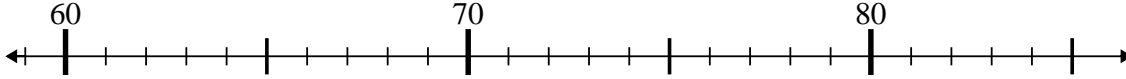




Benutze den Zahlenstrahl um jede Aufgabe zu lösen.

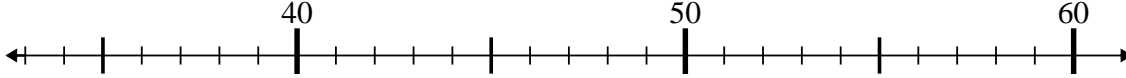
**Antworten**

1)  $64 + 0 = ?$



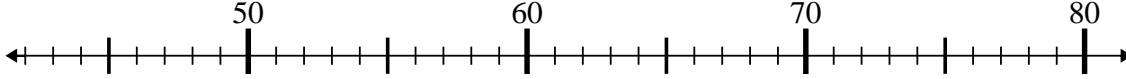
1. \_\_\_\_\_

2)  $39 + 11 = ?$



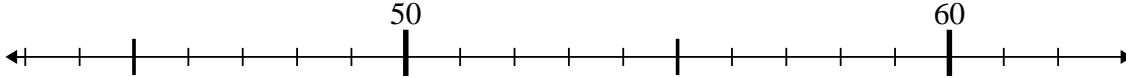
2. \_\_\_\_\_

3)  $63 + 7 = ?$



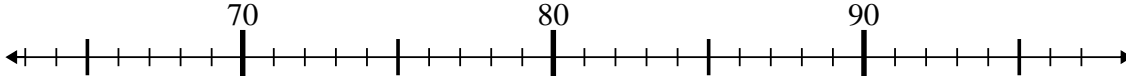
3. \_\_\_\_\_

4)  $62 + 0 = ?$



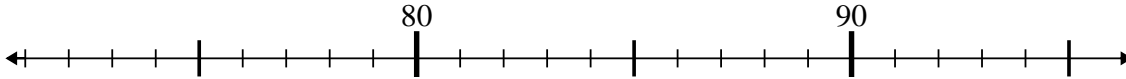
4. \_\_\_\_\_

5)  $75 - 6 = ?$



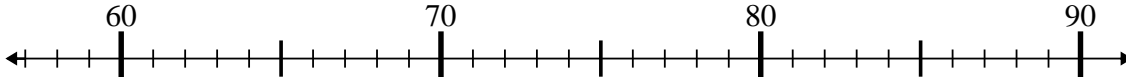
5. \_\_\_\_\_

6)  $89 - 15 = ?$



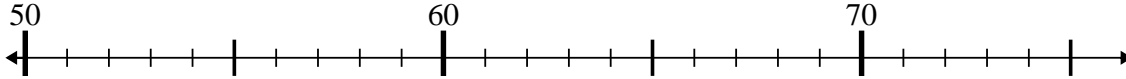
6. \_\_\_\_\_

7)  $77 - 19 = ?$



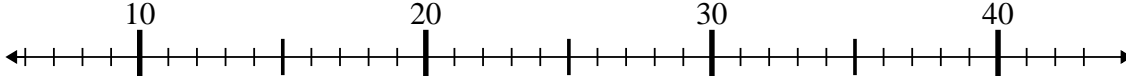
7. \_\_\_\_\_

8)  $55 - 5 = ?$



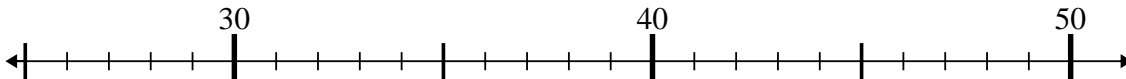
8. \_\_\_\_\_

9)  $28 - 14 = ?$



9. \_\_\_\_\_

10)  $35 + 14 = ?$



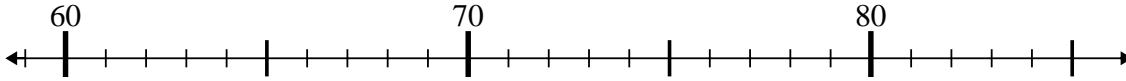
10. \_\_\_\_\_



Benutze den Zahlenstrahl um jede Aufgabe zu lösen.

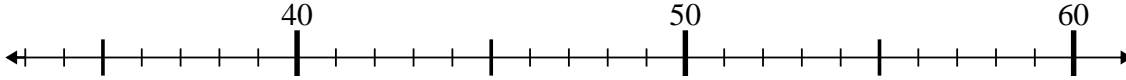
**Antworten**

1)  $64 + 0 = ?$



1. 64

2)  $39 + 11 = ?$



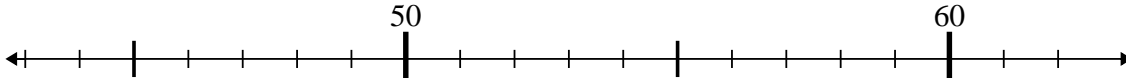
2. 50

3)  $63 + 7 = ?$



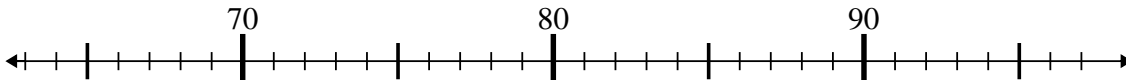
3. 70

4)  $62 + 0 = ?$



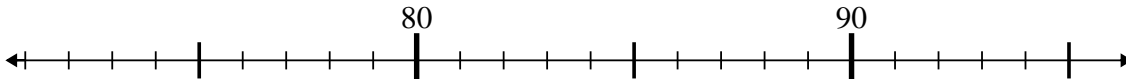
4. 62

5)  $75 - 6 = ?$



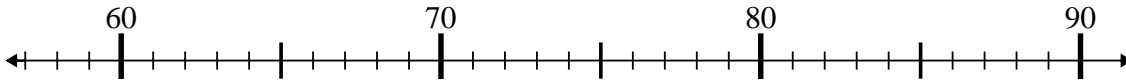
5. 69

6)  $89 - 15 = ?$



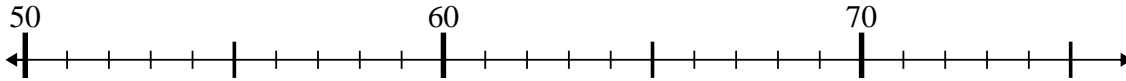
6. 74

7)  $77 - 19 = ?$



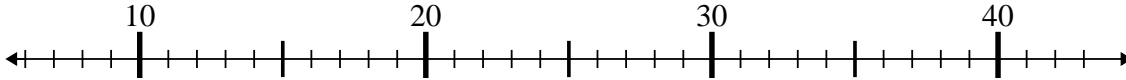
7. 58

8)  $55 - 5 = ?$



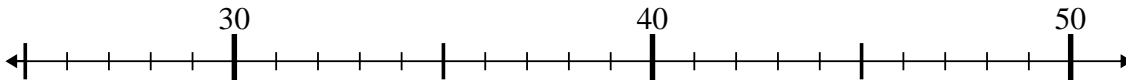
8. 50

9)  $28 - 14 = ?$



9. 14

10)  $35 + 14 = ?$



10. 49