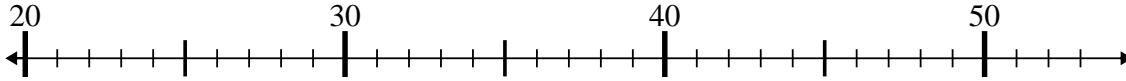




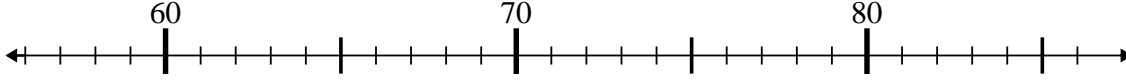
Benutze den Zahlenstrahl um jede Aufgabe zu lösen.

**Antworten**

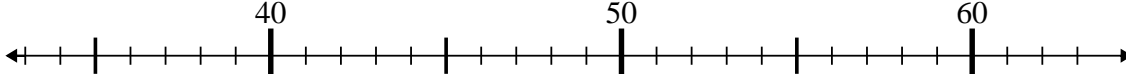
1)  $21 + 5 = ?$



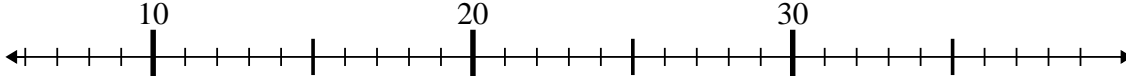
2)  $79 + 0 = ?$



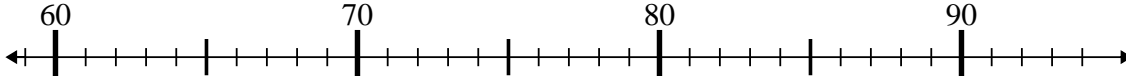
3)  $62 - 23 = ?$



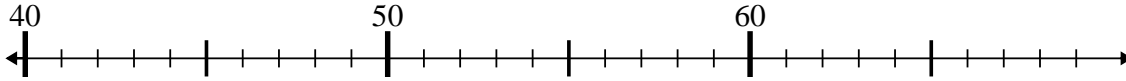
4)  $13 + 2 = ?$



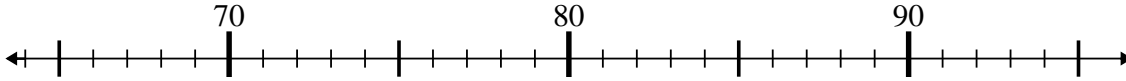
5)  $64 + 0 = ?$



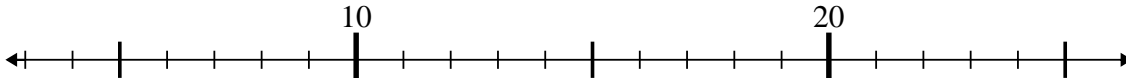
6)  $63 - 10 = ?$



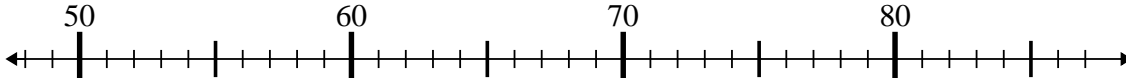
7)  $76 + 15 = ?$



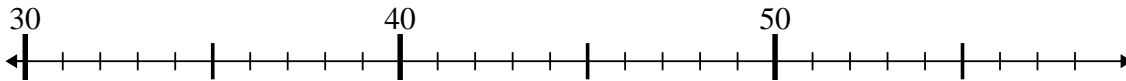
8)  $13 - 2 = ?$



9)  $77 - 24 = ?$



10)  $56 - 1 = ?$



1. \_\_\_\_\_

2. \_\_\_\_\_

3. \_\_\_\_\_

4. \_\_\_\_\_

5. \_\_\_\_\_

6. \_\_\_\_\_

7. \_\_\_\_\_

8. \_\_\_\_\_

9. \_\_\_\_\_

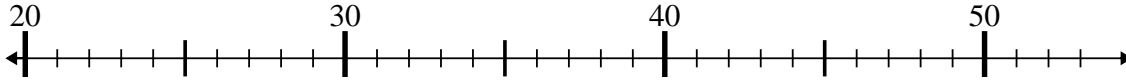
10. \_\_\_\_\_



Benutze den Zahlenstrahl um jede Aufgabe zu lösen.

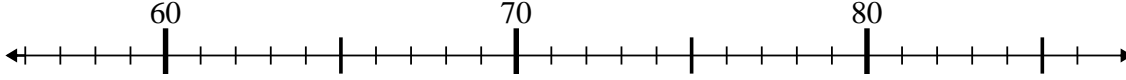
**Antworten**

1)  $21 + 5 = ?$



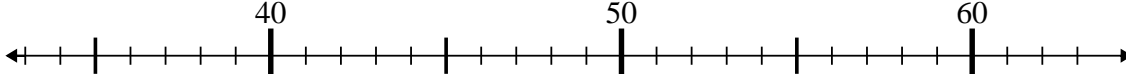
1. 26

2)  $79 + 0 = ?$



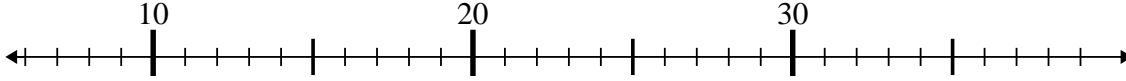
2. 79

3)  $62 - 23 = ?$



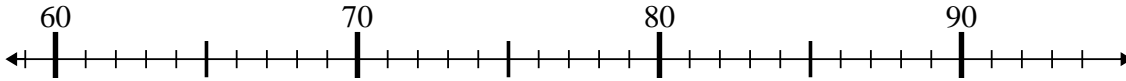
3. 39

4)  $13 + 2 = ?$



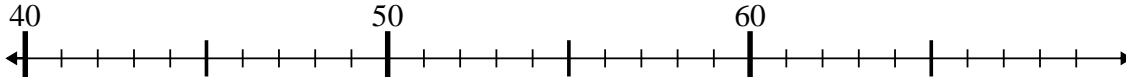
4. 15

5)  $64 + 0 = ?$



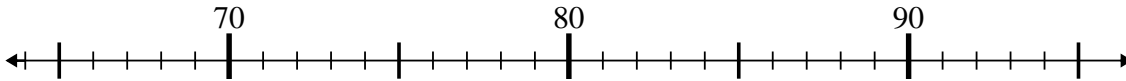
5. 64

6)  $63 - 10 = ?$



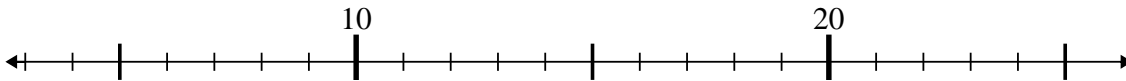
6. 53

7)  $76 + 15 = ?$



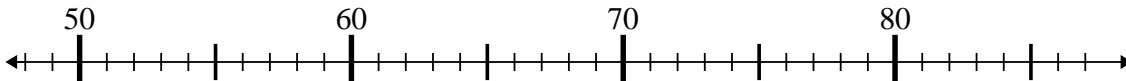
7. 91

8)  $13 - 2 = ?$



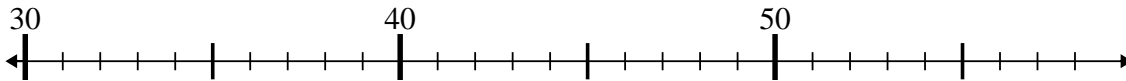
8. 11

9)  $77 - 24 = ?$



9. 53

10)  $56 - 1 = ?$



10. 55