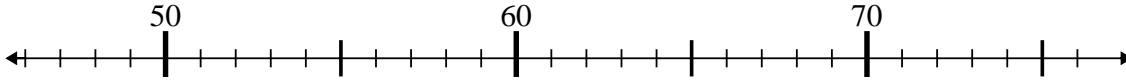




Benutze den Zahlenstrahl um jede Aufgabe zu lösen.

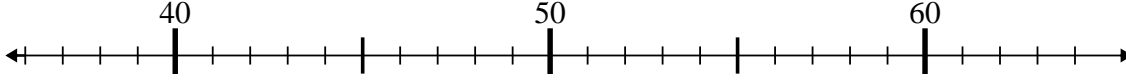
**Antworten**

1)  $71 + 1 = ?$



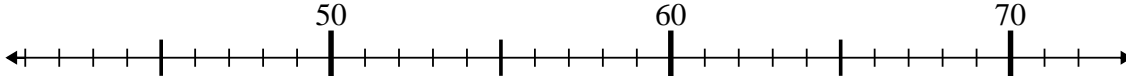
1. \_\_\_\_\_

2)  $41 - 3 = ?$



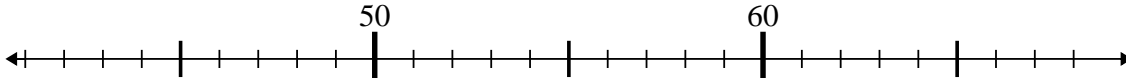
2. \_\_\_\_\_

3)  $66 + 1 = ?$



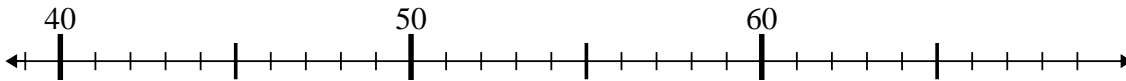
3. \_\_\_\_\_

4)  $47 - 1 = ?$



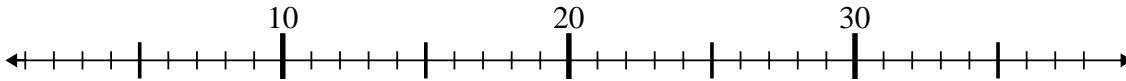
4. \_\_\_\_\_

5)  $56 - 15 = ?$



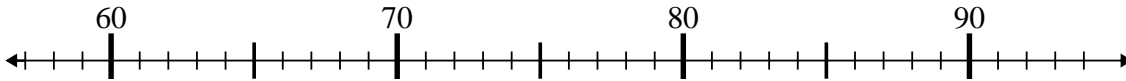
5. \_\_\_\_\_

6)  $33 + 5 = ?$



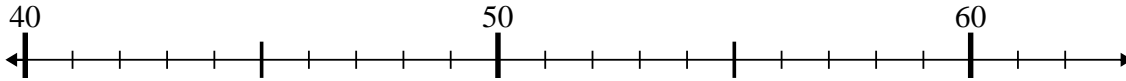
6. \_\_\_\_\_

7)  $65 + 10 = ?$



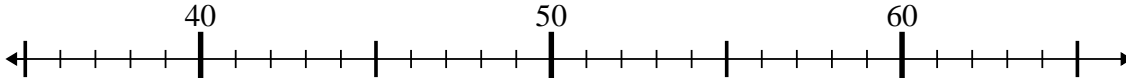
7. \_\_\_\_\_

8)  $44 + 3 = ?$



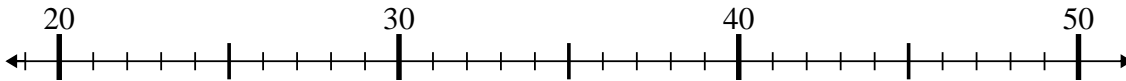
8. \_\_\_\_\_

9)  $35 + 6 = ?$



9. \_\_\_\_\_

10)  $21 + 19 = ?$



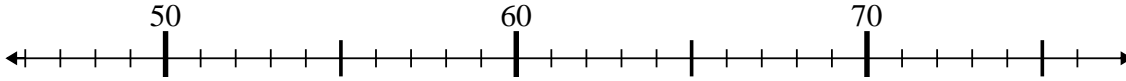
10. \_\_\_\_\_



Benutze den Zahlenstrahl um jede Aufgabe zu lösen.

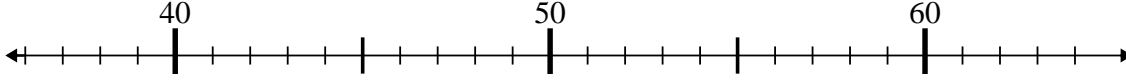
**Antworten**

1)  $71 + 1 = ?$



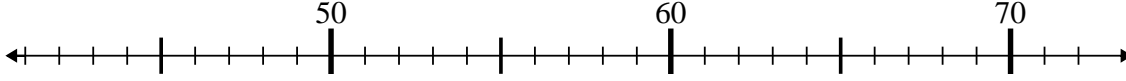
1. 72

2)  $41 - 3 = ?$



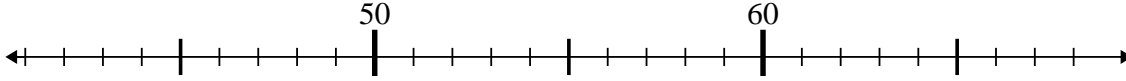
2. 38

3)  $66 + 1 = ?$



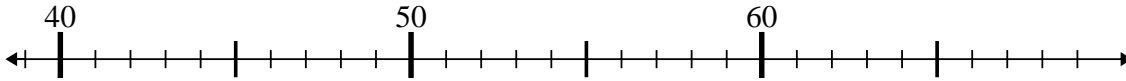
3. 67

4)  $47 - 1 = ?$



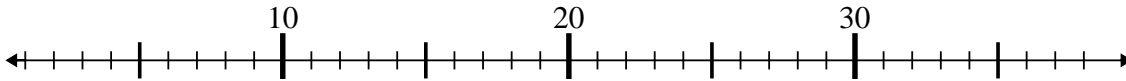
4. 46

5)  $56 - 15 = ?$



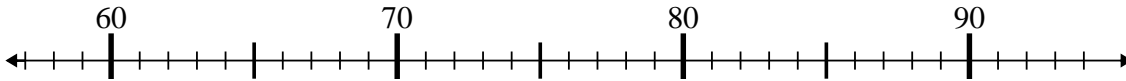
5. 41

6)  $33 + 5 = ?$



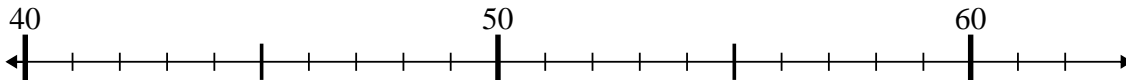
6. 38

7)  $65 + 10 = ?$



7. 75

8)  $44 + 3 = ?$



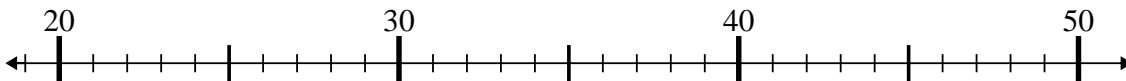
8. 47

9)  $35 + 6 = ?$



9. 41

10)  $21 + 19 = ?$



10. 40