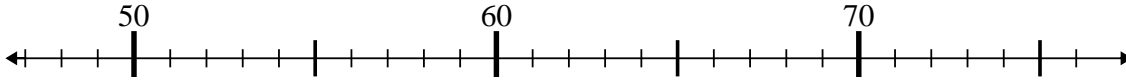




Benutze den Zahlenstrahl um jede Aufgabe zu lösen.

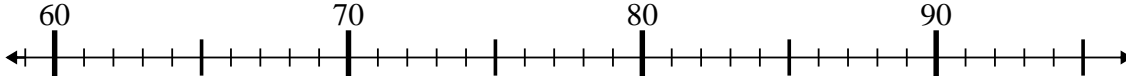
Antworten

1) $48 + 5 = ?$



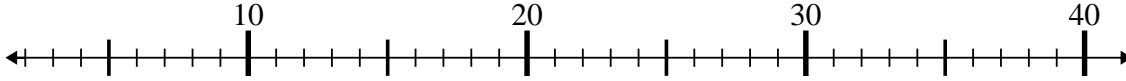
1. _____

2) $81 + 13 = ?$



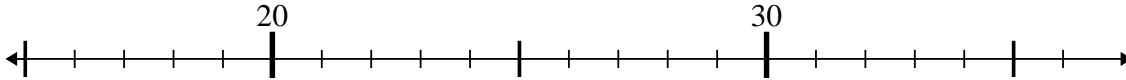
2. _____

3) $36 - 24 = ?$



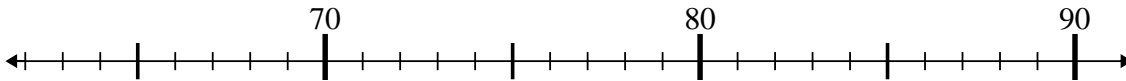
3. _____

4) $20 - 5 = ?$



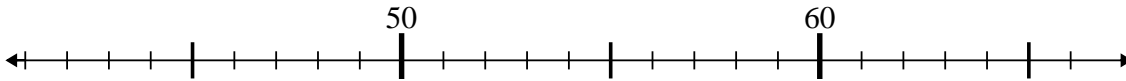
4. _____

5) $66 + 3 = ?$



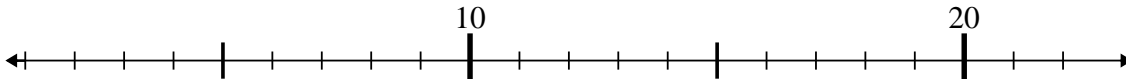
5. _____

6) $63 - 8 = ?$



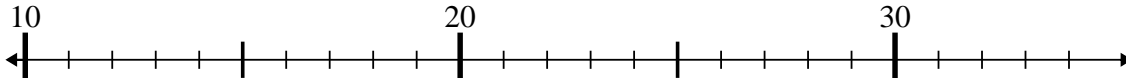
6. _____

7) $7 + 11 = ?$



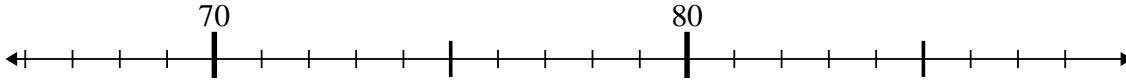
7. _____

8) $22 - 8 = ?$



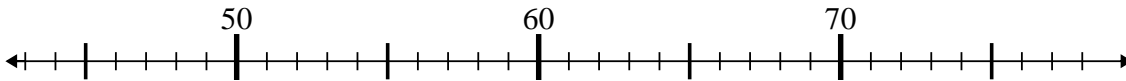
8. _____

9) $73 + 12 = ?$



9. _____

10) $53 - 9 = ?$



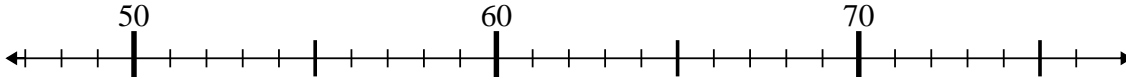
10. _____



Benutze den Zahlenstrahl um jede Aufgabe zu lösen.

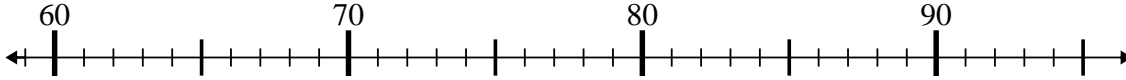
Antworten

1) $48 + 5 = ?$



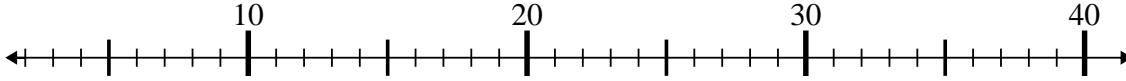
1. 53

2) $81 + 13 = ?$



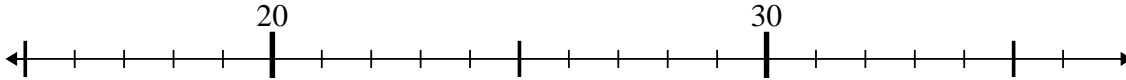
2. 94

3) $36 - 24 = ?$



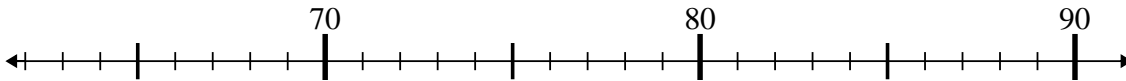
3. 12

4) $20 - 5 = ?$



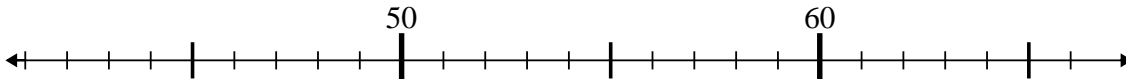
4. 15

5) $66 + 3 = ?$



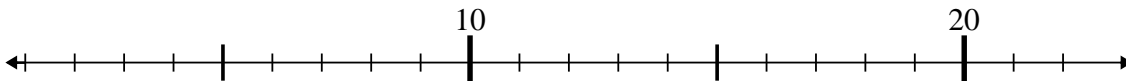
5. 69

6) $63 - 8 = ?$



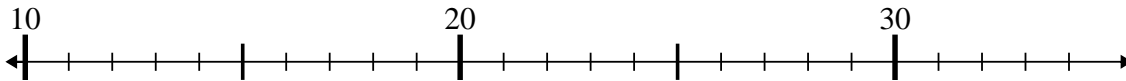
6. 55

7) $7 + 11 = ?$



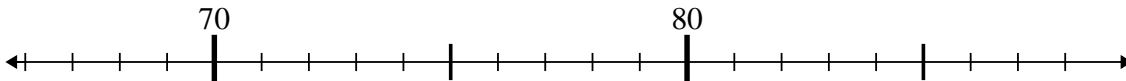
7. 18

8) $22 - 8 = ?$



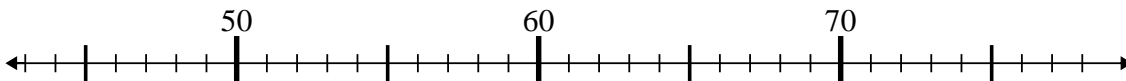
8. 14

9) $73 + 12 = ?$



9. 85

10) $53 - 9 = ?$



10. 44