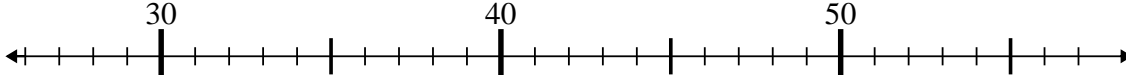




Benutze den Zahlenstrahl um jede Aufgabe zu lösen.

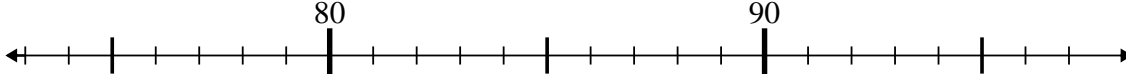
Antworten

1) $37 - 1 = ?$



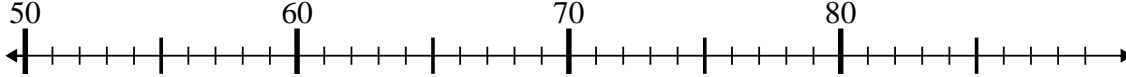
1. _____

2) $91 - 17 = ?$



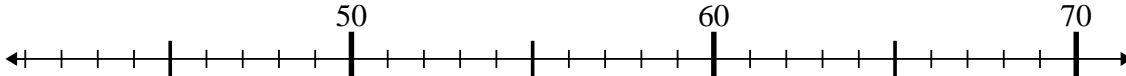
2. _____

3) $66 - 0 = ?$



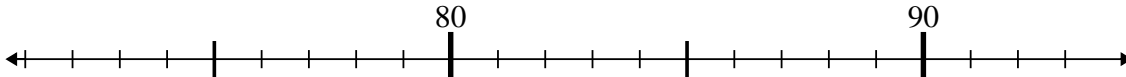
3. _____

4) $49 + 3 = ?$



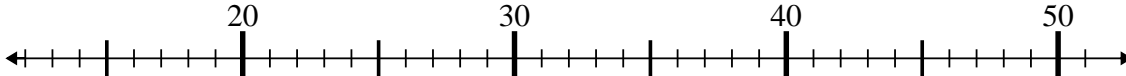
4. _____

5) $76 + 2 = ?$



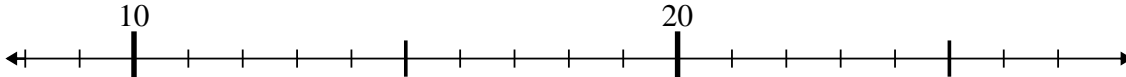
5. _____

6) $24 - 9 = ?$



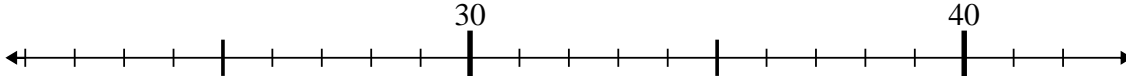
6. _____

7) $26 - 8 = ?$



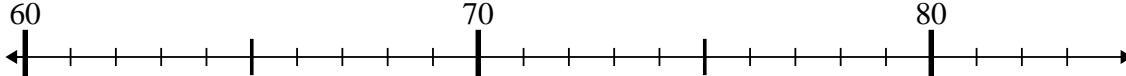
7. _____

8) $34 + 1 = ?$



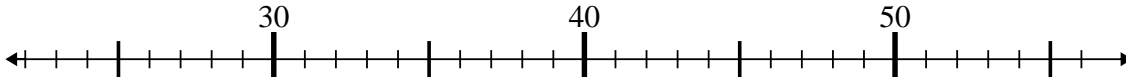
8. _____

9) $72 + 3 = ?$



9. _____

10) $32 + 8 = ?$



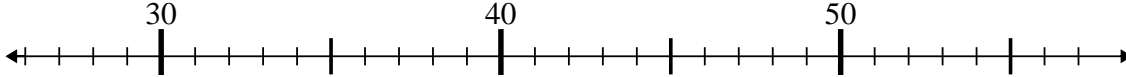
10. _____



Benutze den Zahlenstrahl um jede Aufgabe zu lösen.

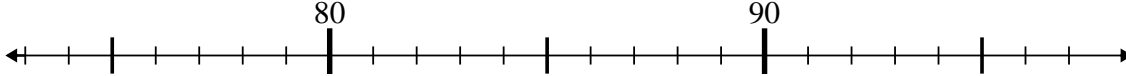
Antworten

1) $37 - 1 = ?$



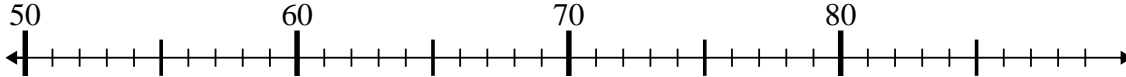
1. 36

2) $91 - 17 = ?$



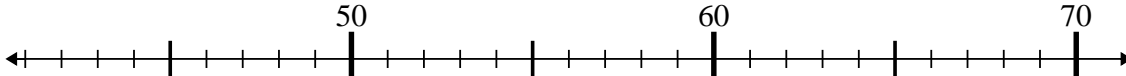
2. 74

3) $66 - 0 = ?$



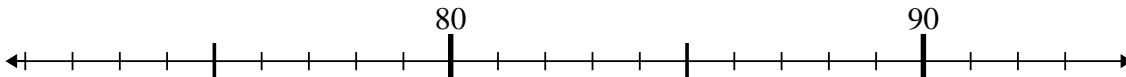
3. 66

4) $49 + 3 = ?$



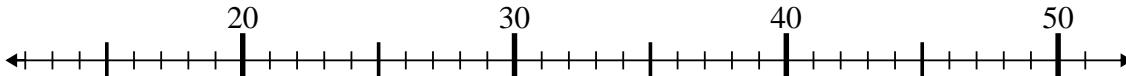
4. 52

5) $76 + 2 = ?$



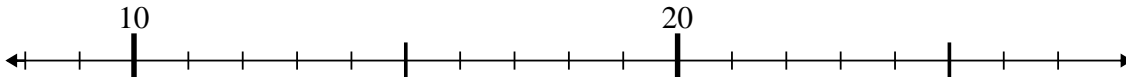
5. 78

6) $24 - 9 = ?$



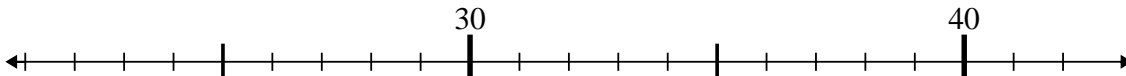
6. 15

7) $26 - 8 = ?$



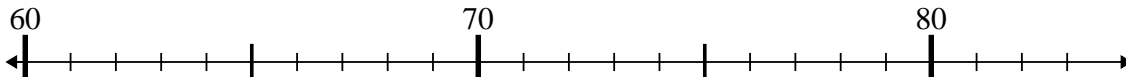
7. 18

8) $34 + 1 = ?$



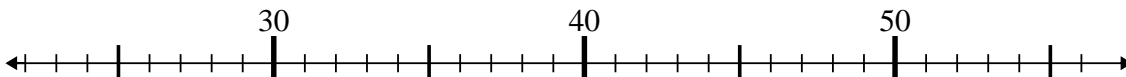
8. 35

9) $72 + 3 = ?$



9. 75

10) $32 + 8 = ?$



10. 40